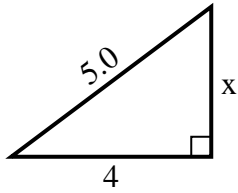




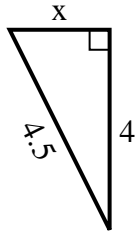
SPANISH_INSTRUCTIONS

Respuestas

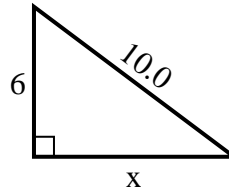
1) perímetro = 12 u



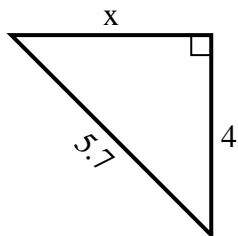
2) perímetro = 10.5 u



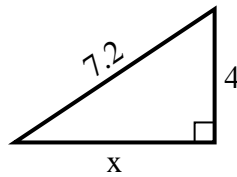
3) perímetro = 24 u



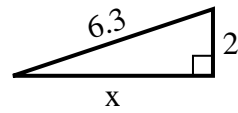
4) perímetro = 13.7 u



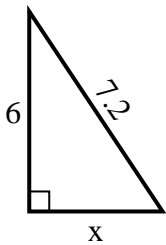
5) perímetro = 17.2 u



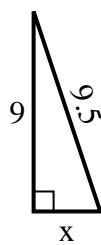
6) perímetro = 14.3 u



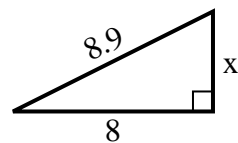
7) perímetro = 17.2 u



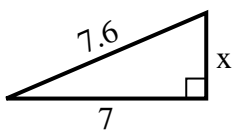
8) perímetro = 21.5 u



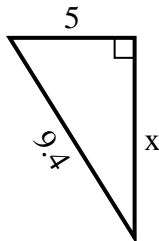
9) perímetro = 20.9 u



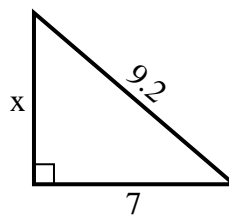
10) perímetro = 17.6 u



11) perímetro = 22.4 u



12) perímetro = 22.2 u



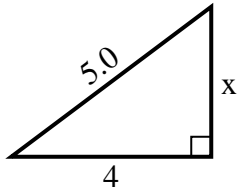
1. _____
2. _____
3. _____
4. _____
5. _____
6. _____
7. _____
8. _____
9. _____
10. _____
11. _____
12. _____



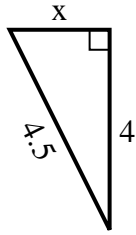
SPANISH_INSTRUCTIONS

Respuestas

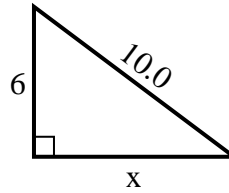
1) perímetro = 12 u



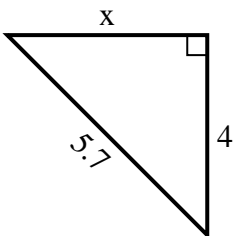
2) perímetro = 10.5 u



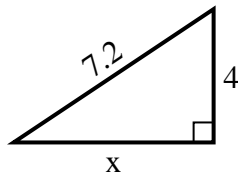
3) perímetro = 24 u



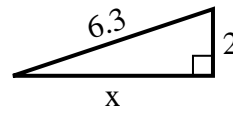
4) perímetro = 13.7 u



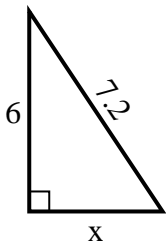
5) perímetro = 17.2 u



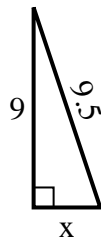
6) perímetro = 14.3 u



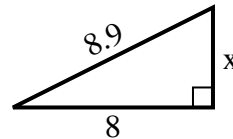
7) perímetro = 17.2 u



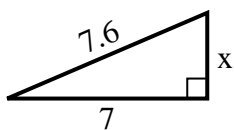
8) perímetro = 21.5 u



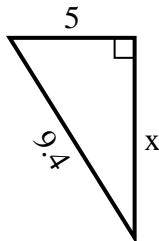
9) perímetro = 20.9 u



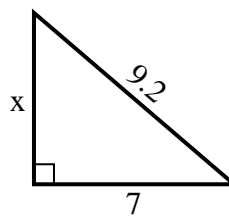
10) perímetro = 17.6 u



11) perímetro = 22.4 u



12) perímetro = 22.2 u



1. 3
2. 2
3. 8
4. 4
5. 6
6. 6
7. 4
8. 3
9. 4
10. 3
11. 8
12. 6