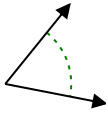




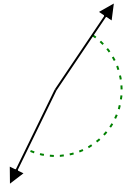
Determina si el ángulo mostrado es agudo, obtuso, recto o llano.

Respuestas

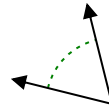
Ej)



1)



2)

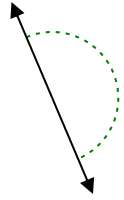


Ej. agudo

1. _____

2. _____

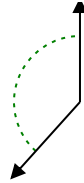
3)



4)



5)

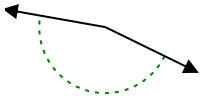


3. _____

4. _____

5. _____

6)



7)



8)

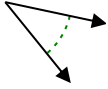


6. _____

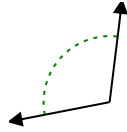
7. _____

8. _____

9)



10)



11)



9. _____

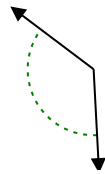
10. _____

11. _____

12)



13)



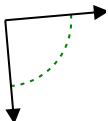
14)



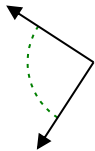
12. _____

13. _____

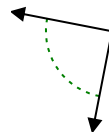
15)



16)



17)



14. _____

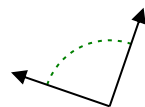
15. _____

16. _____

18)



19)



20)



17. _____

18. _____

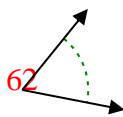
19. _____

20. _____

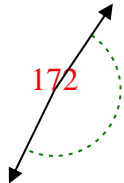


Determina si el ángulo mostrado es agudo, obtuso, recto o llano.

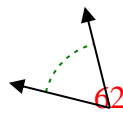
Ej)



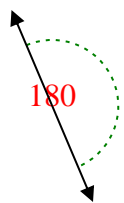
1)



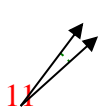
2)



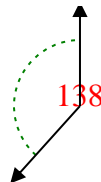
3)



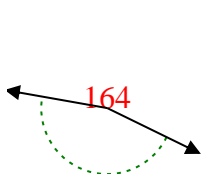
4)



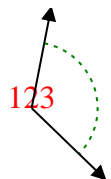
5)



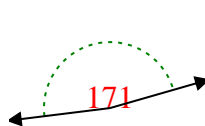
6)



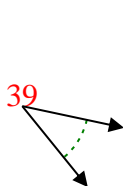
7)



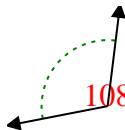
8)



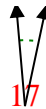
9)



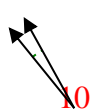
10)



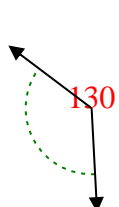
11)



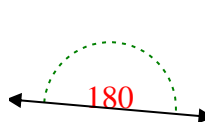
12)



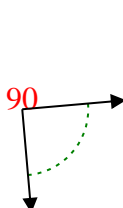
13)



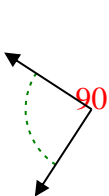
14)



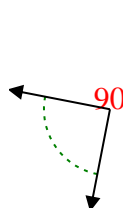
15)



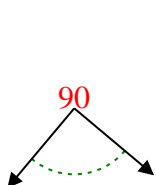
16)



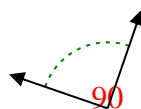
17)



18)



19)



20)



Respuestas

Ej. agudo

1. obtuso

2. agudo

3. recto

4. agudo

5. obtuso

6. obtuso

7. obtuso

8. obtuso

9. agudo

10. obtuso

11. agudo

12. agudo

13. obtuso

14. recto

15. derecho

16. derecho

17. derecho

18. derecho

19. derecho

20. agudo