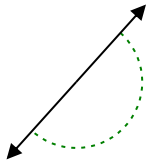




Determina si el ángulo mostrado es agudo, obtuso, recto o llano.

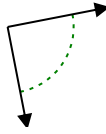
Respuestas

Ej)

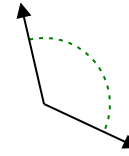


Ej. **recto**

1)

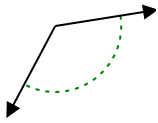


2)



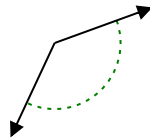
1. _____

3)



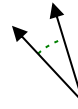
2. _____

4)



3. _____

5)



4. _____

6)



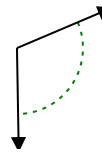
5. _____

7)



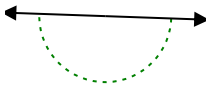
6. _____

8)



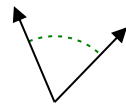
7. _____

9)



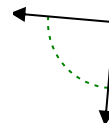
8. _____

10)



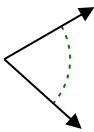
9. _____

11)



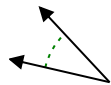
10. _____

12)



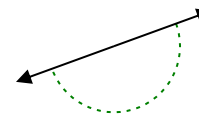
11. _____

13)



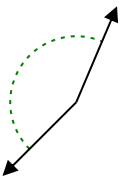
12. _____

14)



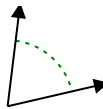
13. _____

15)



14. _____

16)



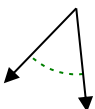
15. _____

17)



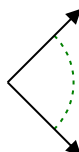
16. _____

18)



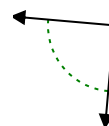
17. _____

19)



18. _____

20)



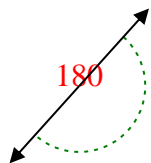
19. _____

20. _____

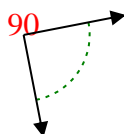


Determina si el ángulo mostrado es agudo, obtuso, recto o llano.

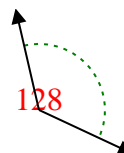
Ej)



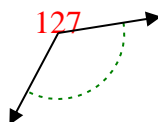
1)



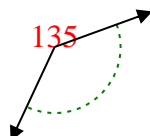
2)



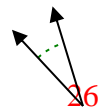
3)



4)



5)



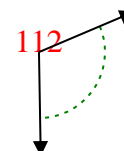
6)



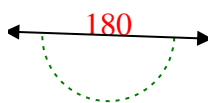
7)



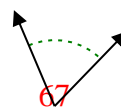
8)



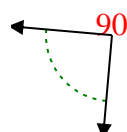
9)



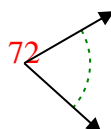
10)



11)



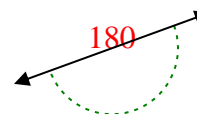
12)



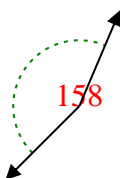
13)



14)



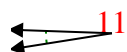
15)



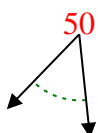
16)



17)



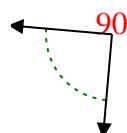
18)



19)



20)



Respuestas

Ej. recto

1. derecho

2. obtuso

3. obtuso

4. obtuso

5. agudo

6. obtuso

7. obtuso

8. obtuso

9. recto

10. agudo

11. derecho

12. agudo

13. agudo

14. recto

15. obtuso

16. agudo

17. agudo

18. agudo

19. derecho

20. derecho