



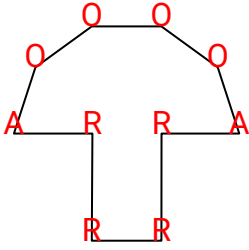
Encontrar los ángulos en las figuras

Nombre: **Clave De Respuestas**

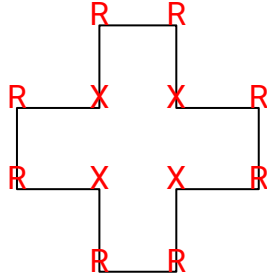
Cuenta el número de ángulos Agudos, Obtusos, Rectos y Concavos de cada figura.

Respuestas

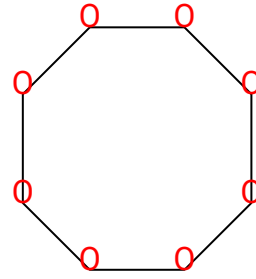
Ej)



1)



2)



Ej. 2 4 4 0

1. 0 0 8 4

2. 0 8 0 0

3. 1 2 1 0

4. 2 3 0 1

5. 2 2 0 0

6. 2 2 1 2

7. 4 0 0 3

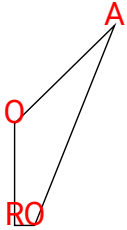
8. 2 1 1 1

9. 1 1 3 1

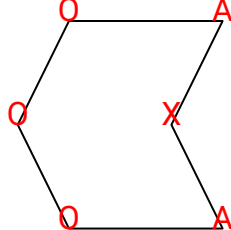
10. 0 0 8 4

11. 2 2 0 0

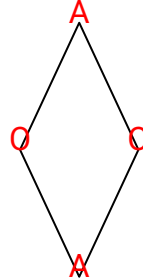
3)



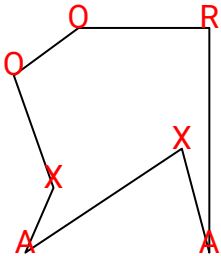
4)



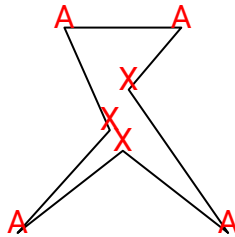
5)



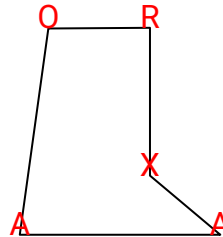
6)



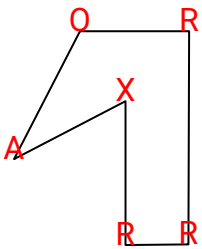
7)



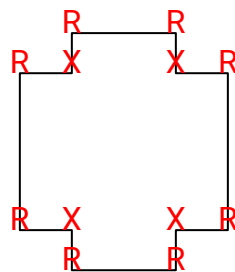
8)



9)



10)



11)

