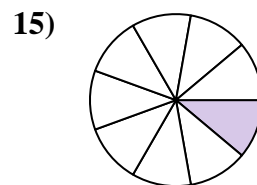
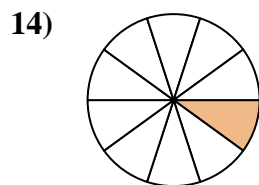
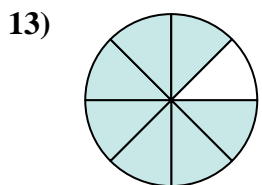
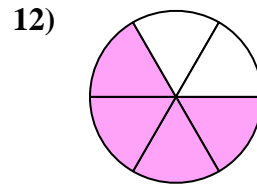
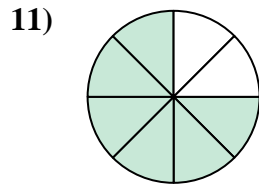
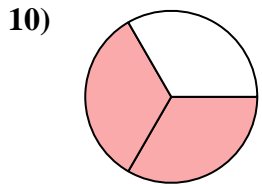
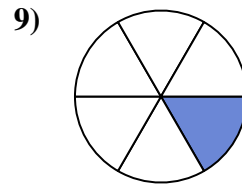
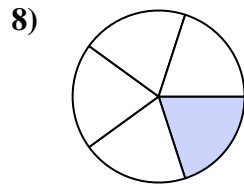
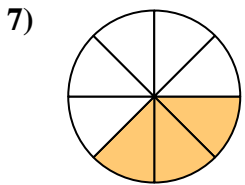
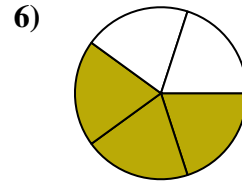
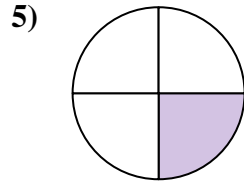
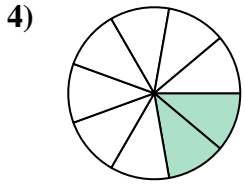
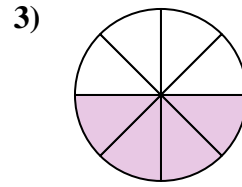
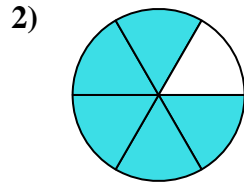
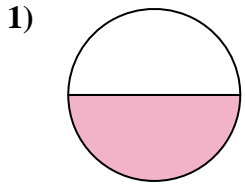




Encuentra el ángulo (en grados) de la parte sombreada del círculo.

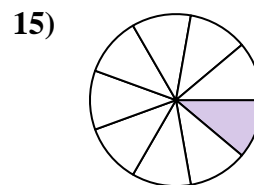
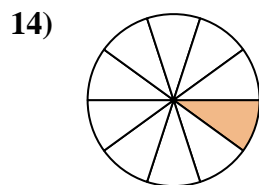
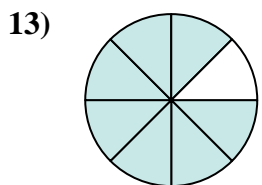
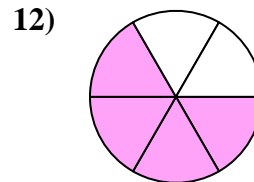
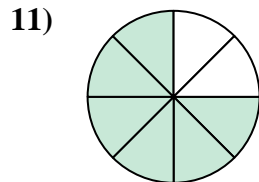
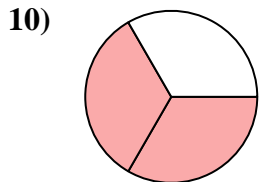
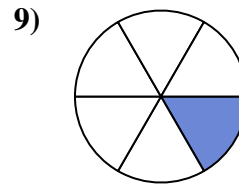
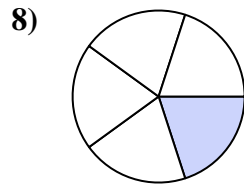
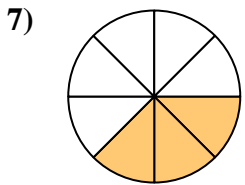
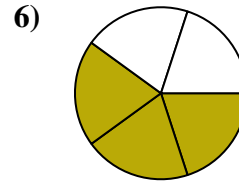
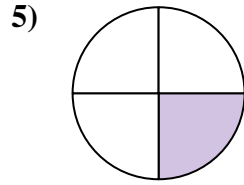
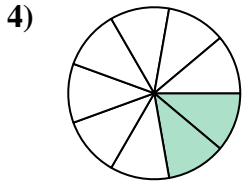
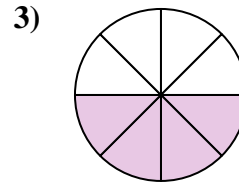
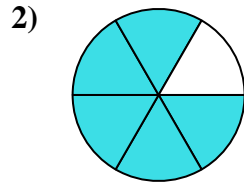
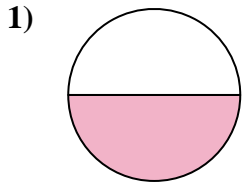


Respuestas

1. _____
2. _____
3. _____
4. _____
5. _____
6. _____
7. _____
8. _____
9. _____
10. _____
11. _____
12. _____
13. _____
14. _____
15. _____



Encuentra el ángulo (en grados) de la parte sombreada del círculo.



Respuestas

1. 180

2. 300

3. 180

4. 80

5. 90

6. 216

7. 135

8. 72

9. 60

10. 240

11. 270

12. 240

13. 315

14. 36

15. 40



Encuentra el ángulo (en grados) de la parte sombreada del círculo.

135

72

80

60

90

216

270

240

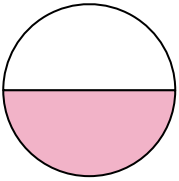
180

180

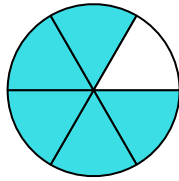
240

300

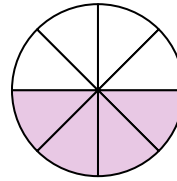
1)



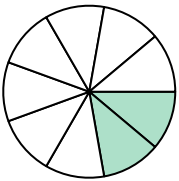
2)



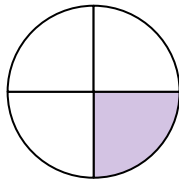
3)



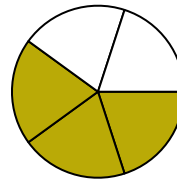
4)



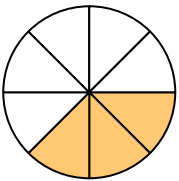
5)



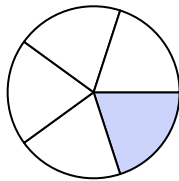
6)



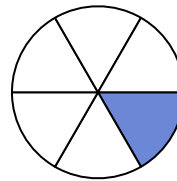
7)



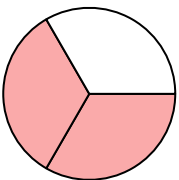
8)



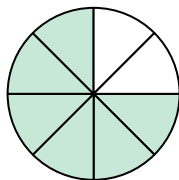
9)



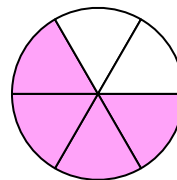
10)



11)



12)



Respuestas

1. _____

2. _____

3. _____

4. _____

5. _____

6. _____

7. _____

8. _____

9. _____

10. _____

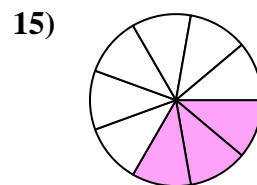
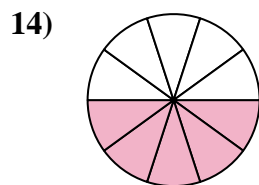
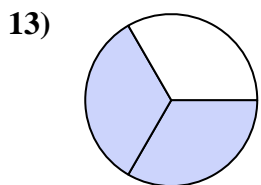
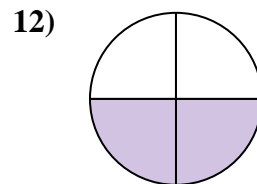
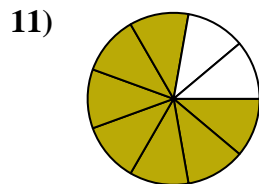
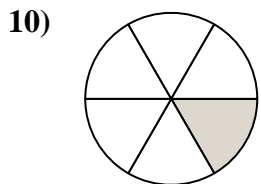
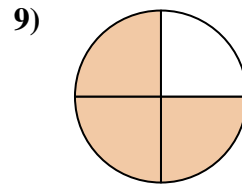
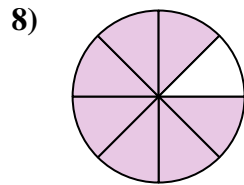
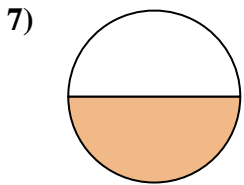
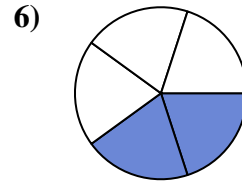
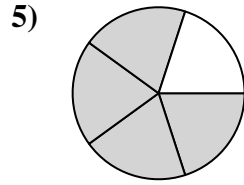
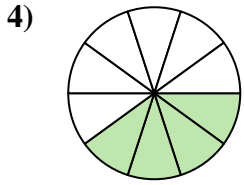
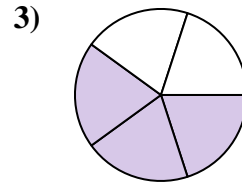
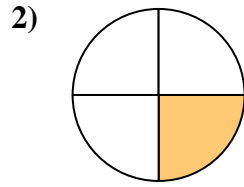
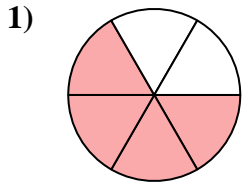
11. _____

12. _____



Encuentra el ángulo (en grados) de la parte sombreada del círculo.

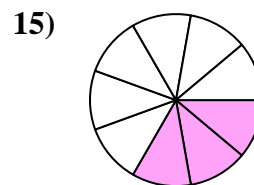
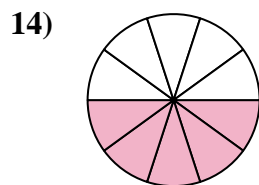
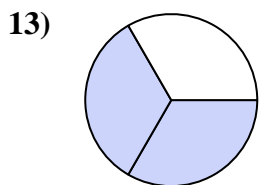
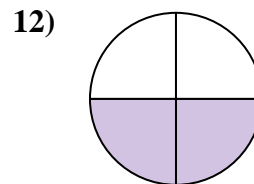
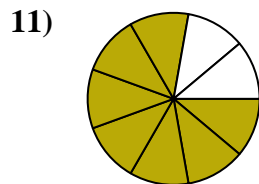
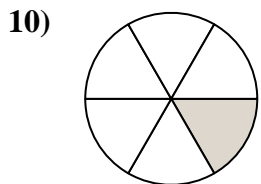
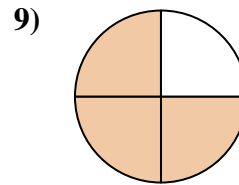
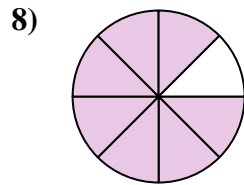
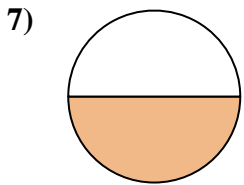
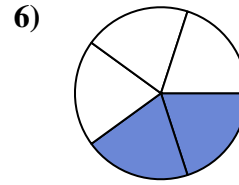
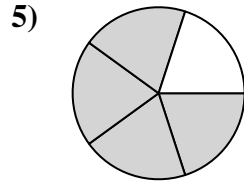
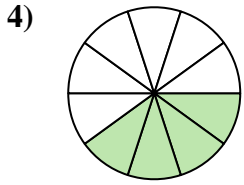
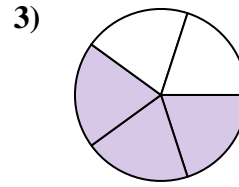
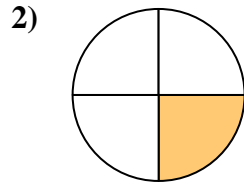
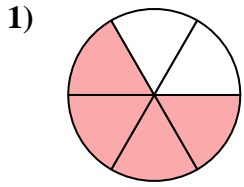
Respuestas



1. _____
2. _____
3. _____
4. _____
5. _____
6. _____
7. _____
8. _____
9. _____
10. _____
11. _____
12. _____
13. _____
14. _____
15. _____



Encuentra el ángulo (en grados) de la parte sombreada del círculo.



Respuestas

1. 240

2. 90

3. 216

4. 144

5. 288

6. 144

7. 180

8. 315

9. 270

10. 60

11. 280

12. 180

13. 240

14. 180

15. 120



Encuentra el ángulo (en grados) de la parte sombreada del círculo.

288

216

315

144

280

60

90

240

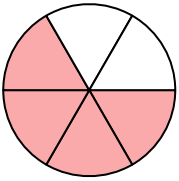
144

270

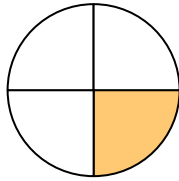
180

180

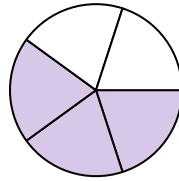
1)



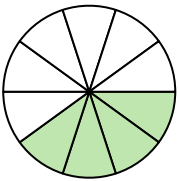
2)



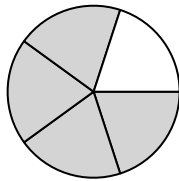
3)



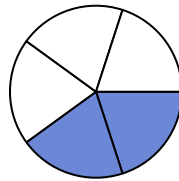
4)



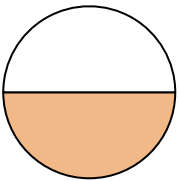
5)



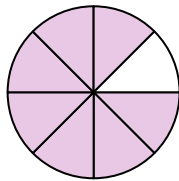
6)



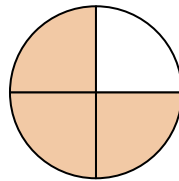
7)



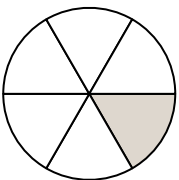
8)



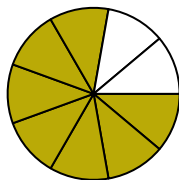
9)



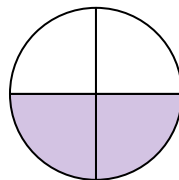
10)



11)



12)



Respuestas

1. _____

2. _____

3. _____

4. _____

5. _____

6. _____

7. _____

8. _____

9. _____

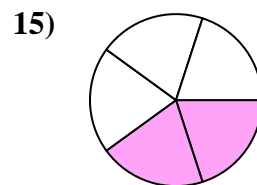
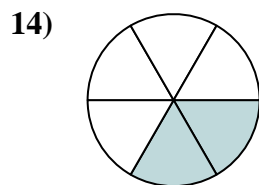
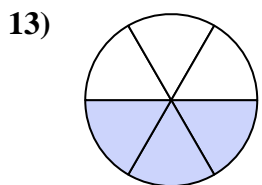
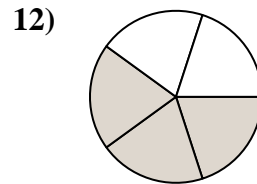
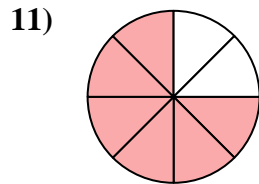
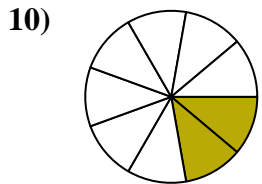
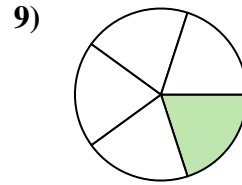
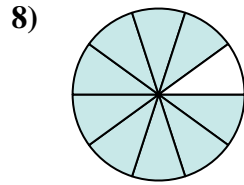
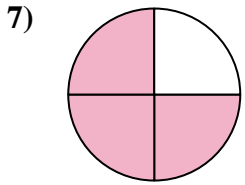
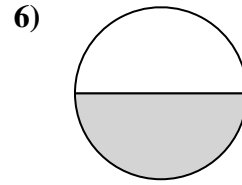
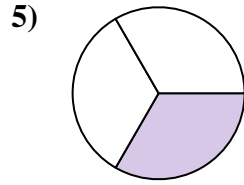
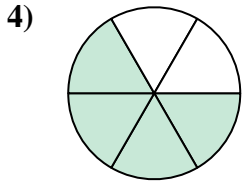
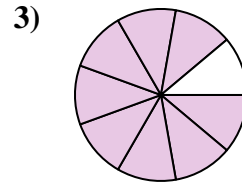
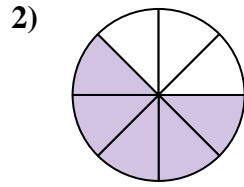
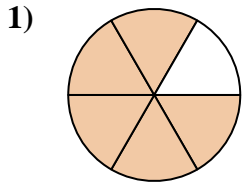
10. _____

11. _____

12. _____



Encuentra el ángulo (en grados) de la parte sombreada del círculo.



Respuestas

1. _____

2. _____

3. _____

4. _____

5. _____

6. _____

7. _____

8. _____

9. _____

10. _____

11. _____

12. _____

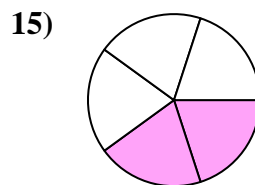
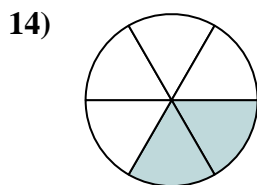
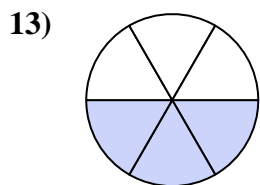
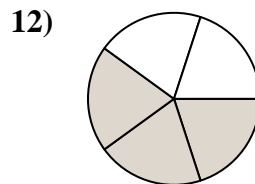
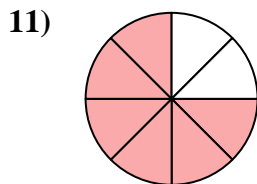
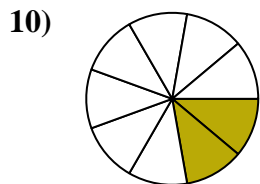
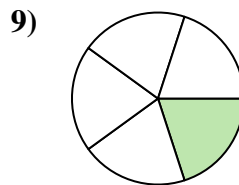
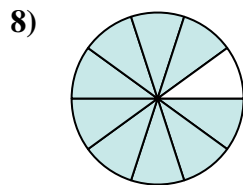
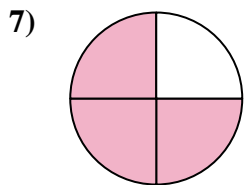
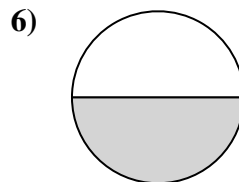
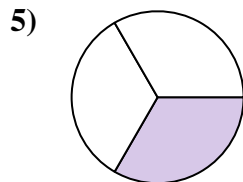
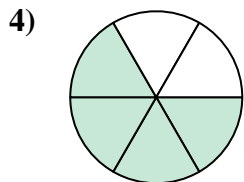
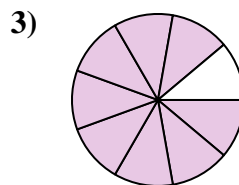
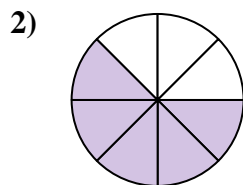
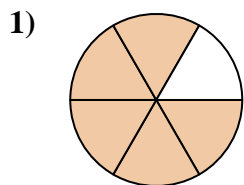
13. _____

14. _____

15. _____



Encuentra el ángulo (en grados) de la parte sombreada del círculo.



Respuestas

1. 300
2. 225
3. 320
4. 240
5. 120
6. 180
7. 270
8. 324
9. 72
10. 80
11. 270
12. 216
13. 180
14. 120
15. 144



Encuentra el ángulo (en grados) de la parte sombreada del círculo.

270

180

216

72

320

80

240

225

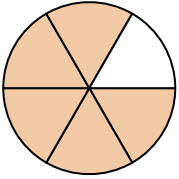
300

120

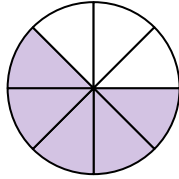
270

324

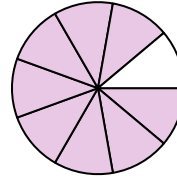
1)



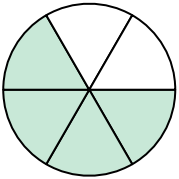
2)



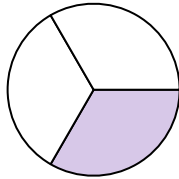
3)



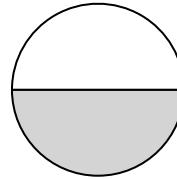
4)



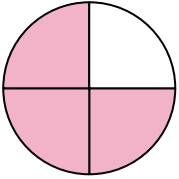
5)



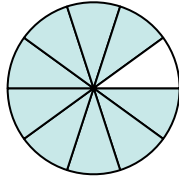
6)



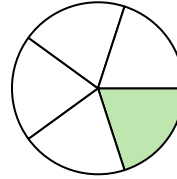
7)



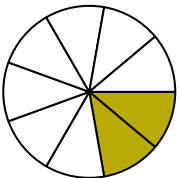
8)



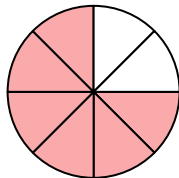
9)



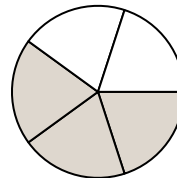
10)



11)



12)



Respuestas

1. _____

2. _____

3. _____

4. _____

5. _____

6. _____

7. _____

8. _____

9. _____

10. _____

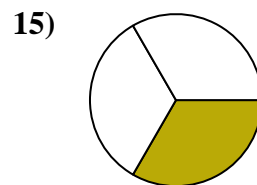
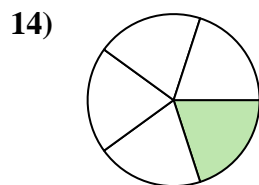
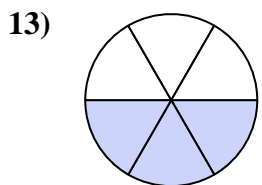
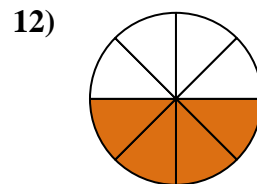
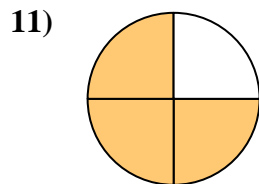
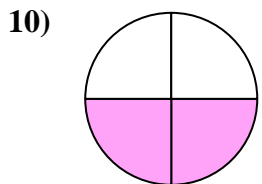
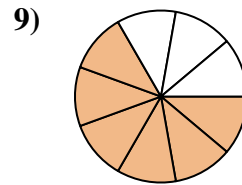
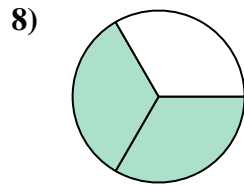
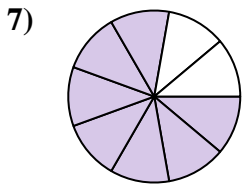
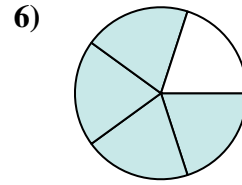
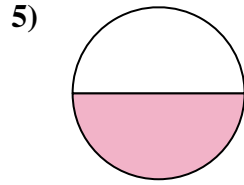
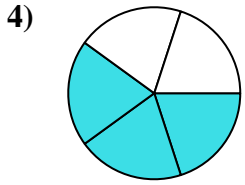
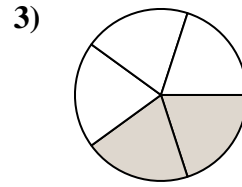
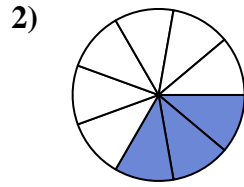
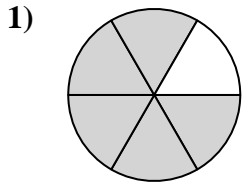
11. _____

12. _____



Encuentra el ángulo (en grados) de la parte sombreada del círculo.

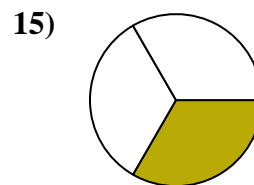
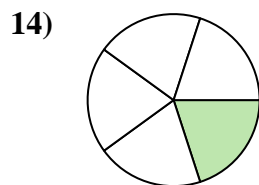
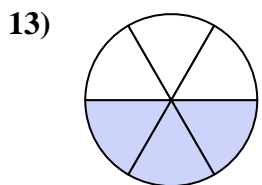
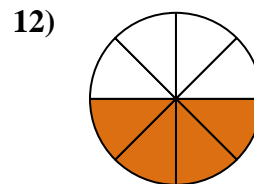
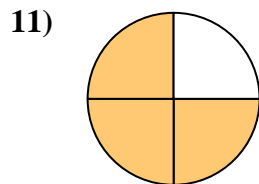
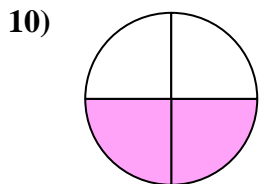
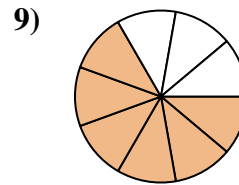
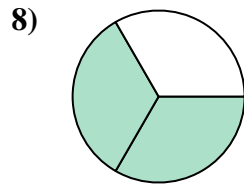
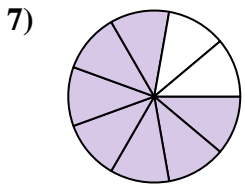
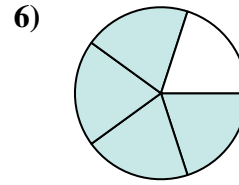
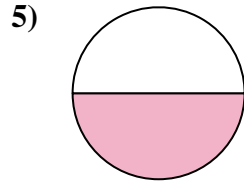
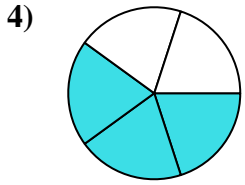
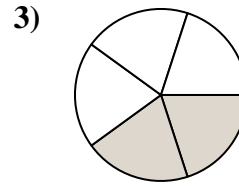
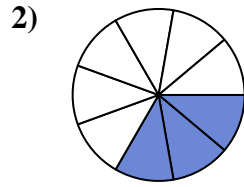
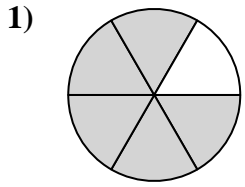
Respuestas



1. _____
2. _____
3. _____
4. _____
5. _____
6. _____
7. _____
8. _____
9. _____
10. _____
11. _____
12. _____
13. _____
14. _____
15. _____



Encuentra el ángulo (en grados) de la parte sombreada del círculo.



Respuestas

1. 300

2. 120

3. 144

4. 216

5. 180

6. 288

7. 280

8. 240

9. 240

10. 180

11. 270

12. 180

13. 180

14. 72

15. 120



Encuentra el ángulo (en grados) de la parte sombreada del círculo.

240

180

180

240

270

120

144

288

280

300

216

180

Respuestas

1. _____

2. _____

3. _____

4. _____

5. _____

6. _____

7. _____

8. _____

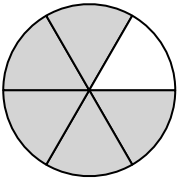
9. _____

10. _____

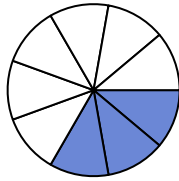
11. _____

12. _____

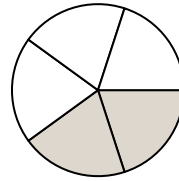
1)



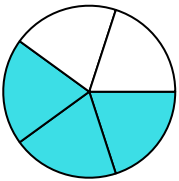
2)



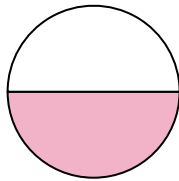
3)



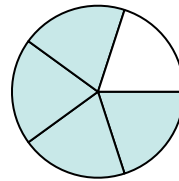
4)



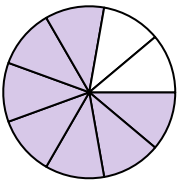
5)



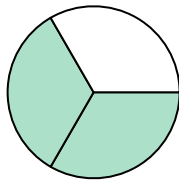
6)



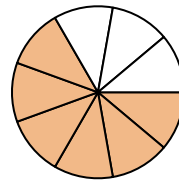
7)



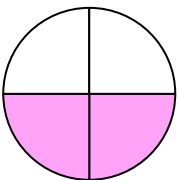
8)



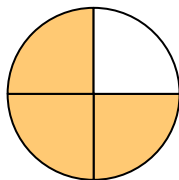
9)



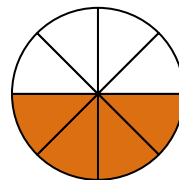
10)



11)



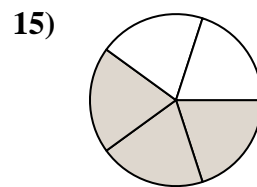
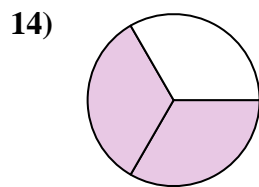
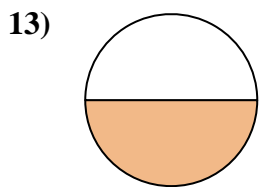
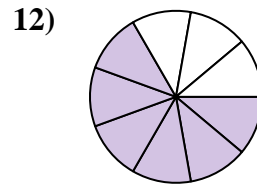
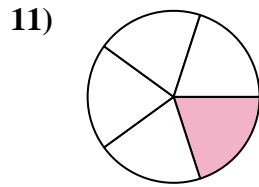
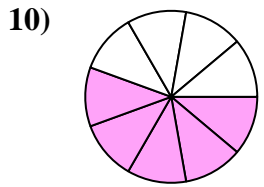
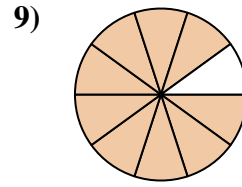
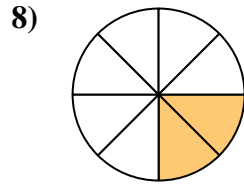
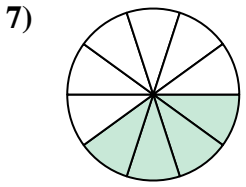
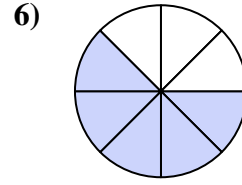
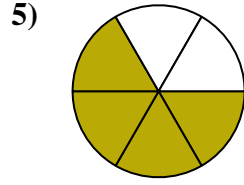
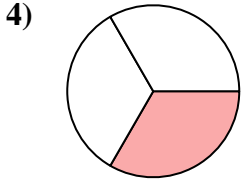
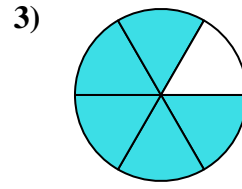
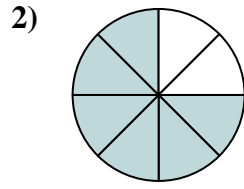
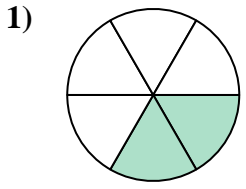
12)





Encuentra el ángulo (en grados) de la parte sombreada del círculo.

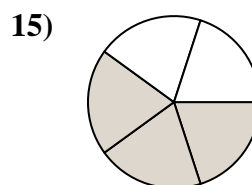
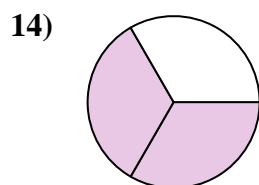
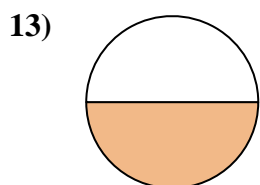
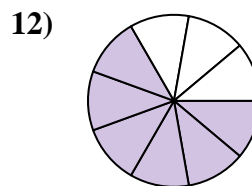
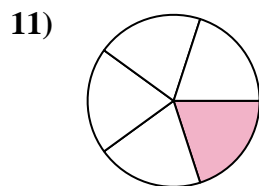
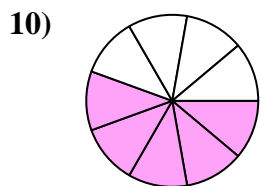
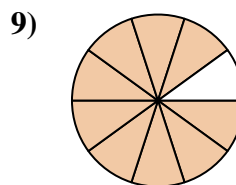
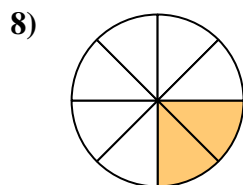
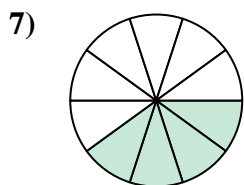
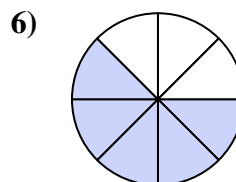
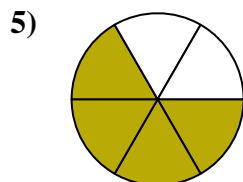
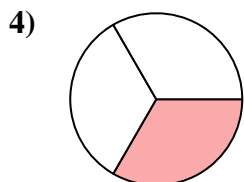
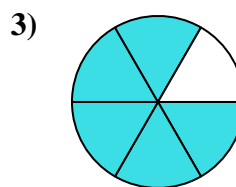
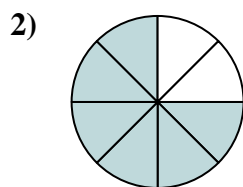
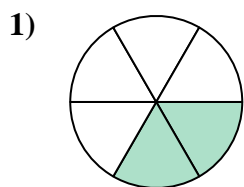
Respuestas



1. _____
2. _____
3. _____
4. _____
5. _____
6. _____
7. _____
8. _____
9. _____
10. _____
11. _____
12. _____
13. _____
14. _____
15. _____



Encuentra el ángulo (en grados) de la parte sombreada del círculo.



Respuestas

- 1. 120
- 2. 270
- 3. 300
- 4. 120
- 5. 240
- 6. 225
- 7. 144
- 8. 90
- 9. 324
- 10. 200
- 11. 72
- 12. 240
- 13. 180
- 14. 240
- 15. 216



Encuentra el ángulo (en grados) de la parte sombreada del círculo.

144

120

120

270

200

240

240

90

72

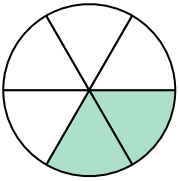
225

324

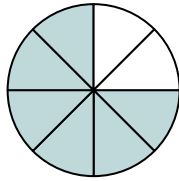
300

Respuestas

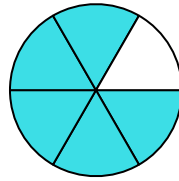
1)



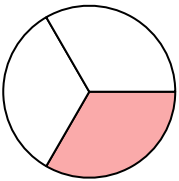
2)



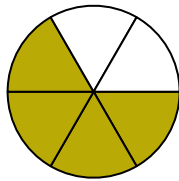
3)



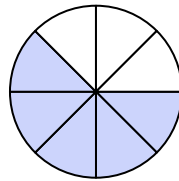
4)



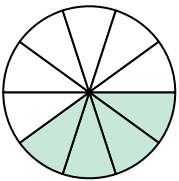
5)



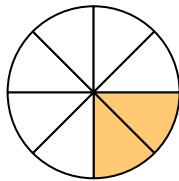
6)



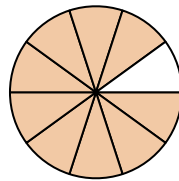
7)



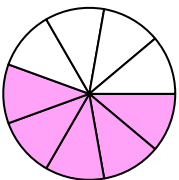
8)



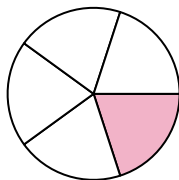
9)



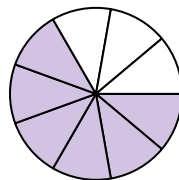
10)



11)



12)



1. _____

2. _____

3. _____

4. _____

5. _____

6. _____

7. _____

8. _____

9. _____

10. _____

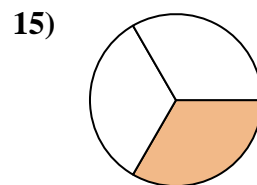
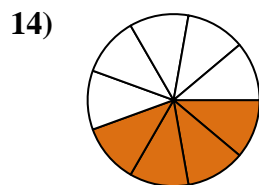
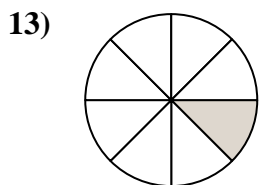
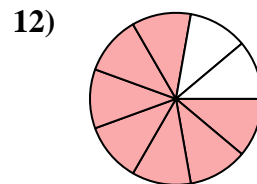
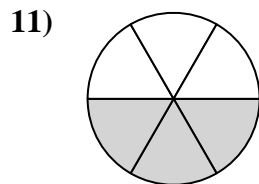
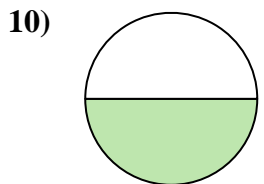
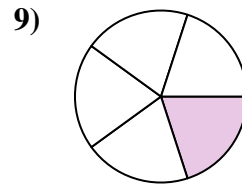
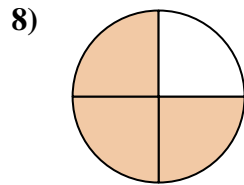
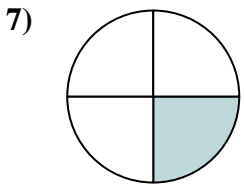
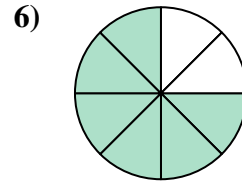
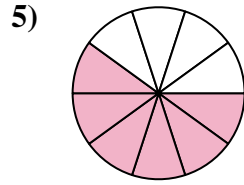
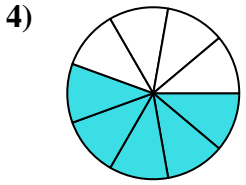
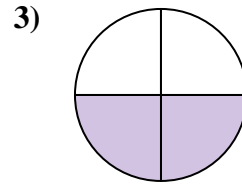
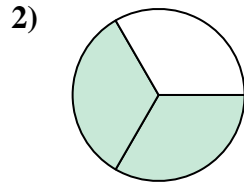
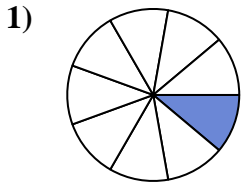
11. _____

12. _____



Encuentra el ángulo (en grados) de la parte sombreada del círculo.

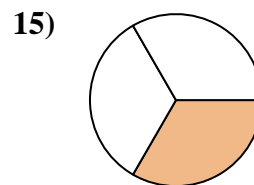
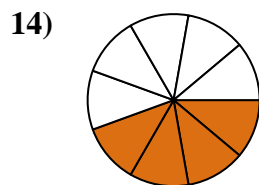
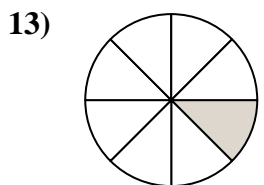
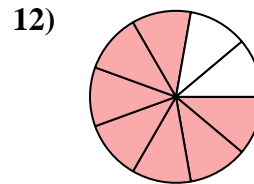
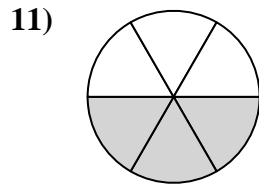
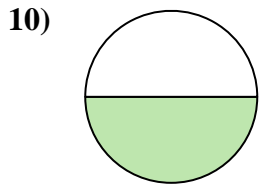
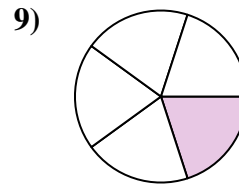
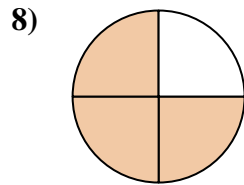
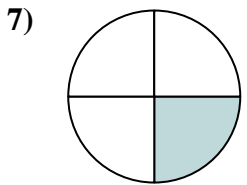
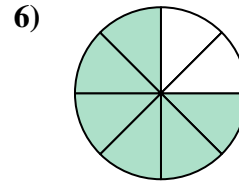
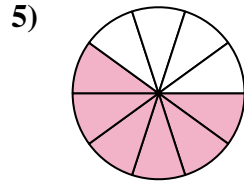
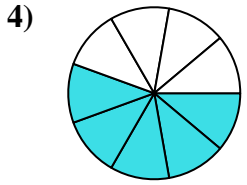
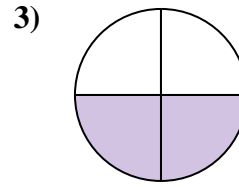
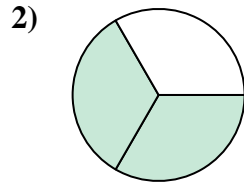
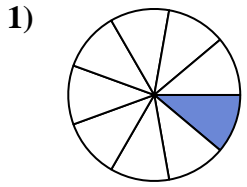
Respuestas



1. _____
2. _____
3. _____
4. _____
5. _____
6. _____
7. _____
8. _____
9. _____
10. _____
11. _____
12. _____
13. _____
14. _____
15. _____



Encuentra el ángulo (en grados) de la parte sombreada del círculo.



Respuestas

1. 40

2. 240

3. 180

4. 200

5. 216

6. 270

7. 90

8. 270

9. 72

10. 180

11. 180

12. 280

13. 45

14. 160

15. 120



Encuentra el ángulo (en grados) de la parte sombreada del círculo.

180

180

216

270

240

180

200

72

40

270

280

90

Respuestas

1. _____

2. _____

3. _____

4. _____

5. _____

6. _____

7. _____

8. _____

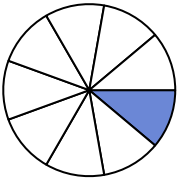
9. _____

10. _____

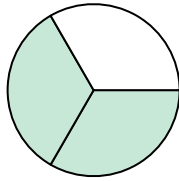
11. _____

12. _____

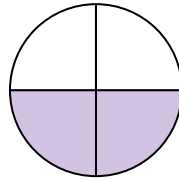
1)



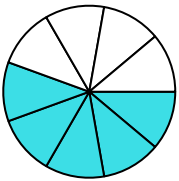
2)



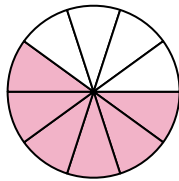
3)



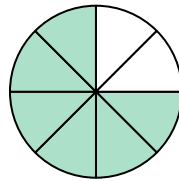
4)



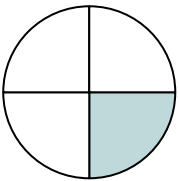
5)



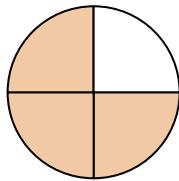
6)



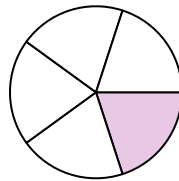
7)



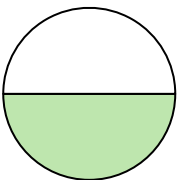
8)



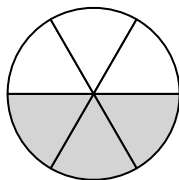
9)



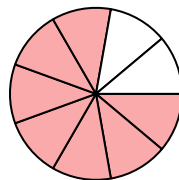
10)



11)

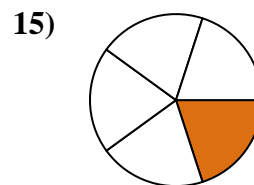
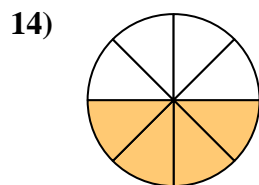
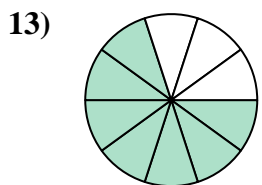
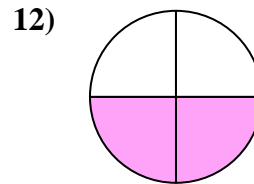
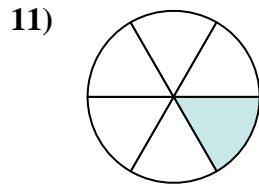
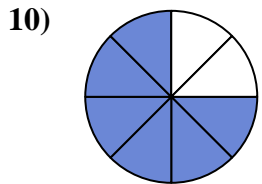
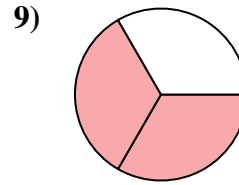
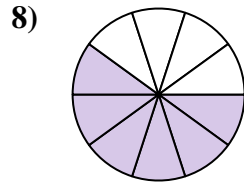
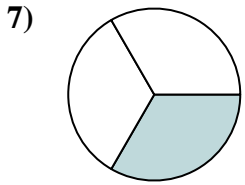
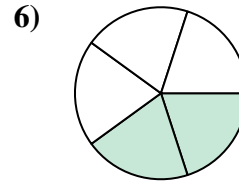
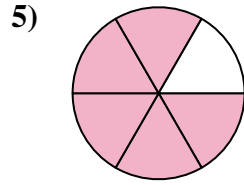
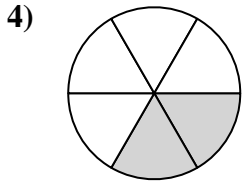
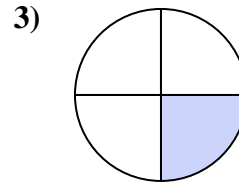
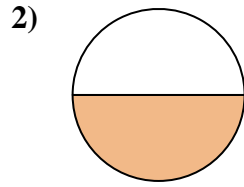
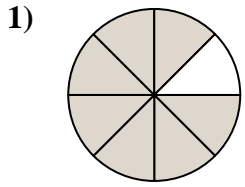


12)





Encuentra el ángulo (en grados) de la parte sombreada del círculo.

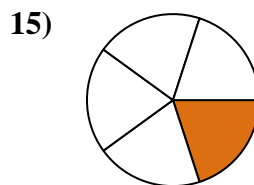
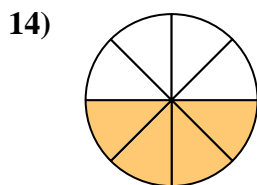
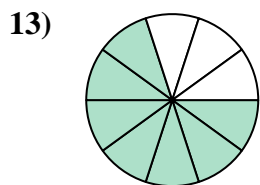
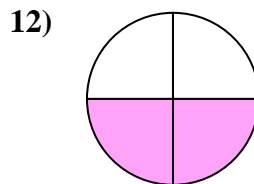
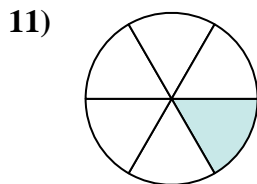
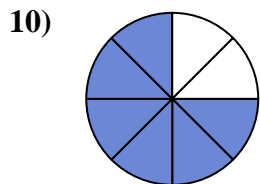
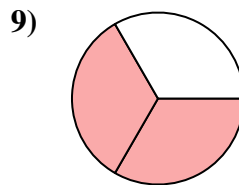
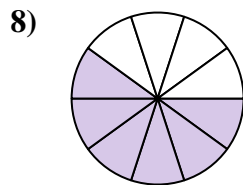
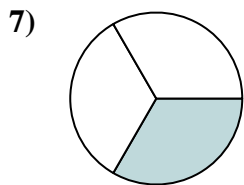
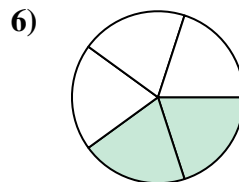
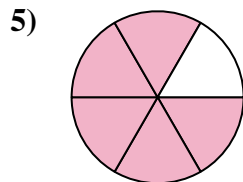
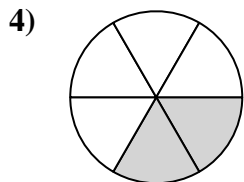
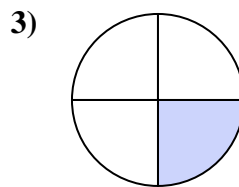
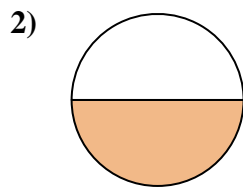
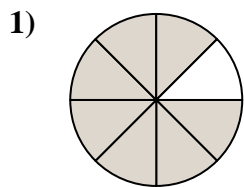


Respuestas

1. _____
2. _____
3. _____
4. _____
5. _____
6. _____
7. _____
8. _____
9. _____
10. _____
11. _____
12. _____
13. _____
14. _____
15. _____



Encuentra el ángulo (en grados) de la parte sombreada del círculo.



Respuestas

1. 315

2. 180

3. 90

4. 120

5. 300

6. 144

7. 120

8. 216

9. 240

10. 270

11. 60

12. 180

13. 252

14. 180

15. 72



Encuentra el ángulo (en grados) de la parte sombreada del círculo.

120

270

90

216

315

180

180

144

240

300

120

60

Respuestas

1. _____

2. _____

3. _____

4. _____

5. _____

6. _____

7. _____

8. _____

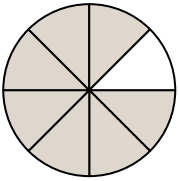
9. _____

10. _____

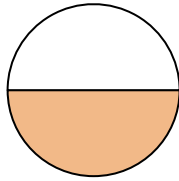
11. _____

12. _____

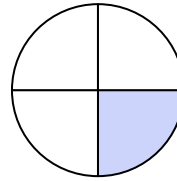
1)



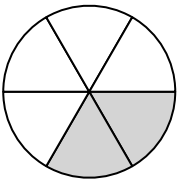
2)



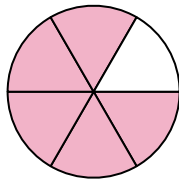
3)



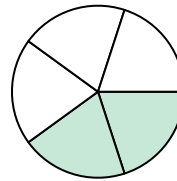
4)



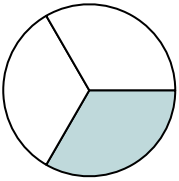
5)



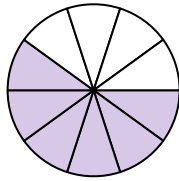
6)



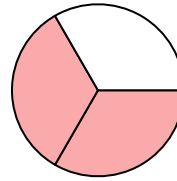
7)



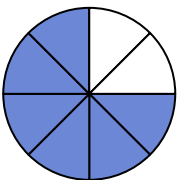
8)



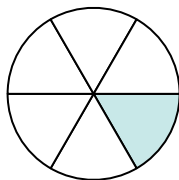
9)



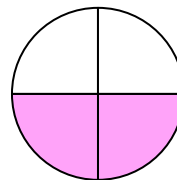
10)



11)



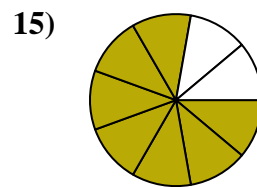
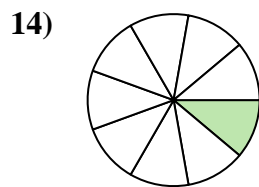
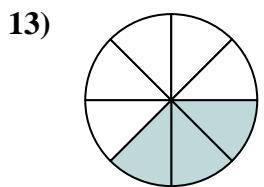
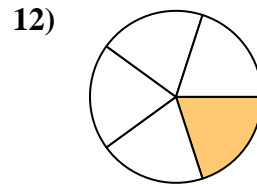
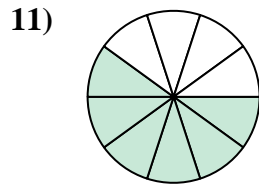
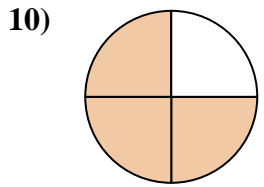
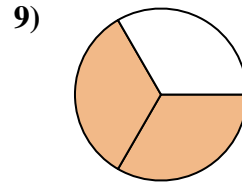
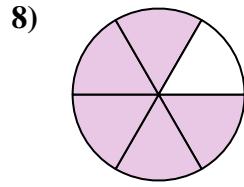
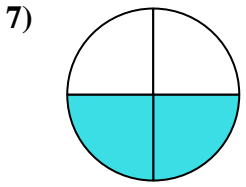
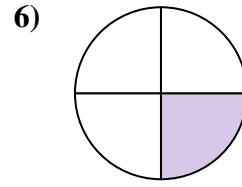
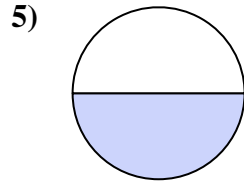
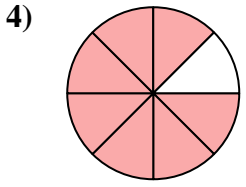
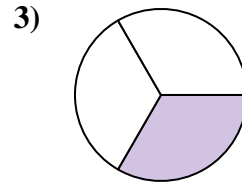
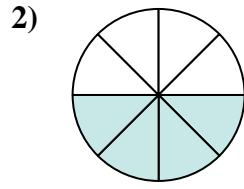
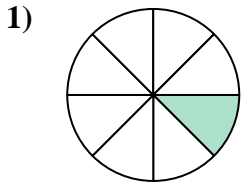
12)





Encuentra el ángulo (en grados) de la parte sombreada del círculo.

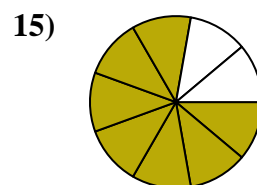
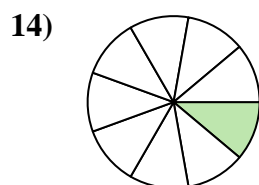
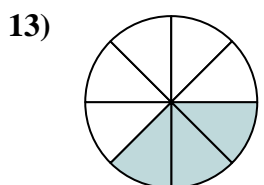
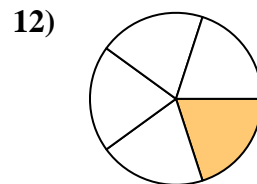
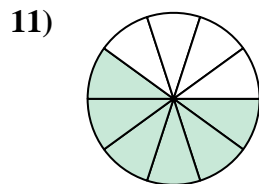
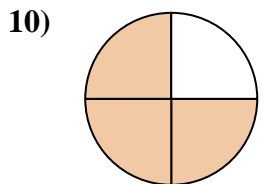
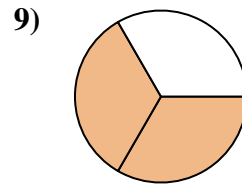
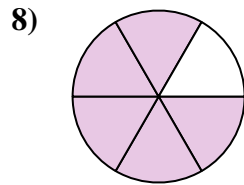
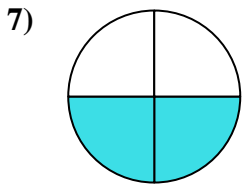
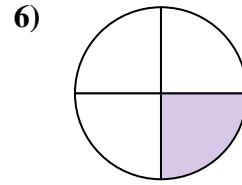
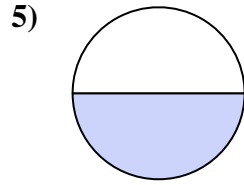
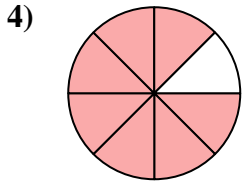
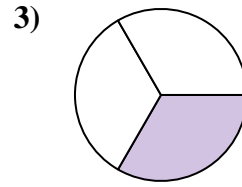
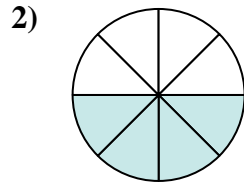
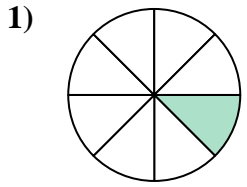
Respuestas



1. _____
2. _____
3. _____
4. _____
5. _____
6. _____
7. _____
8. _____
9. _____
10. _____
11. _____
12. _____
13. _____
14. _____
15. _____



Encuentra el ángulo (en grados) de la parte sombreada del círculo.



Respuestas

1. 45

2. 180

3. 120

4. 315

5. 180

6. 90

7. 180

8. 300

9. 240

10. 270

11. 216

12. 72

13. 135

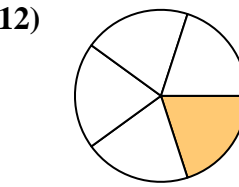
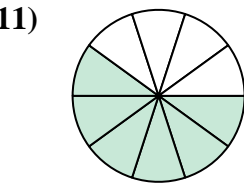
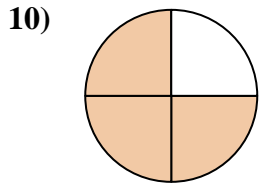
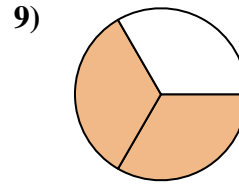
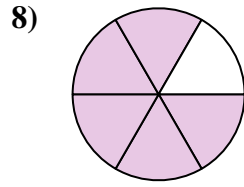
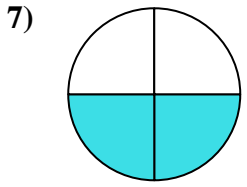
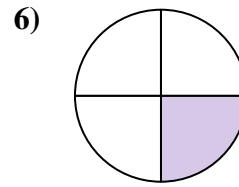
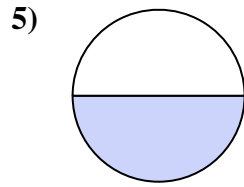
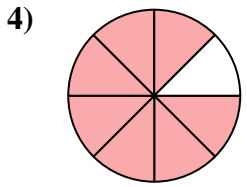
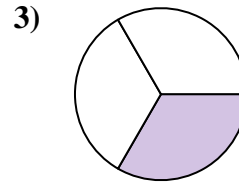
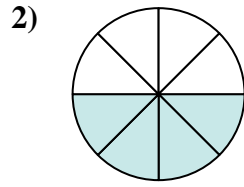
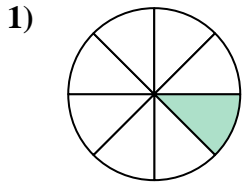
14. 40

15. 280



Encuentra el ángulo (en grados) de la parte sombreada del círculo.

90	216	45	180	180
300	240	270	120	315
180	72			



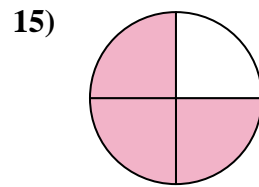
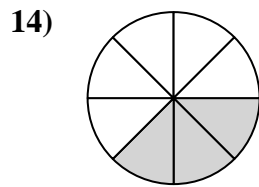
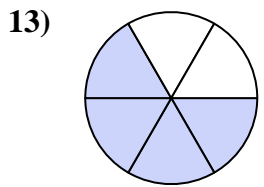
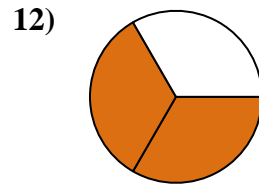
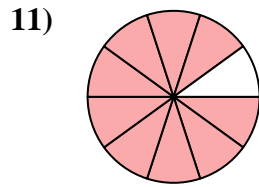
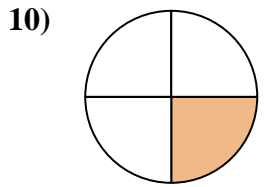
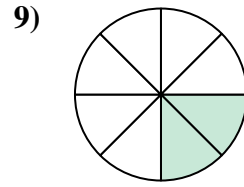
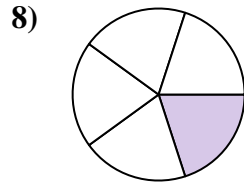
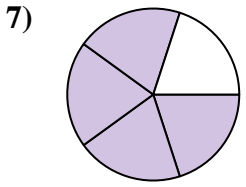
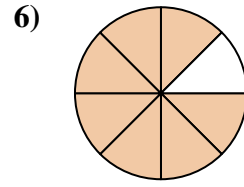
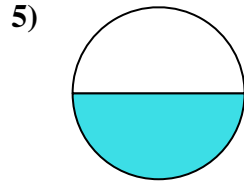
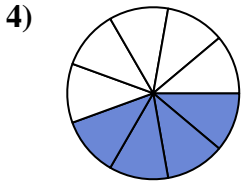
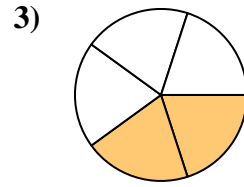
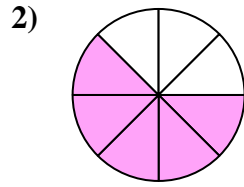
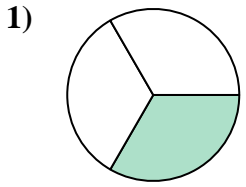
Respuestas

1. _____
2. _____
3. _____
4. _____
5. _____
6. _____
7. _____
8. _____
9. _____
10. _____
11. _____
12. _____



Encuentra el ángulo (en grados) de la parte sombreada del círculo.

Respuestas



1. _____

2. _____

3. _____

4. _____

5. _____

6. _____

7. _____

8. _____

9. _____

10. _____

11. _____

12. _____

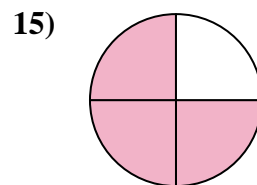
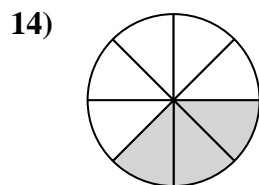
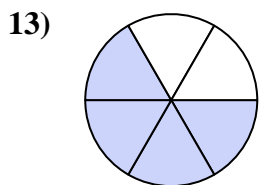
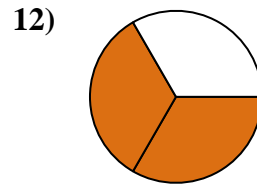
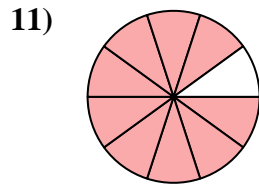
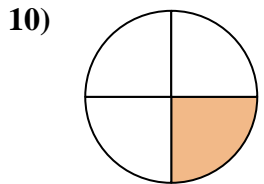
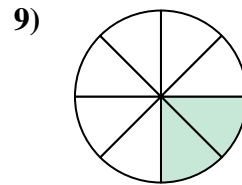
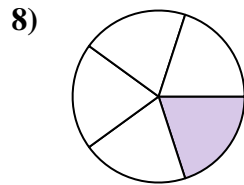
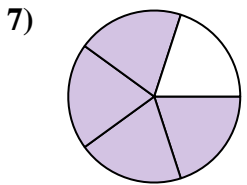
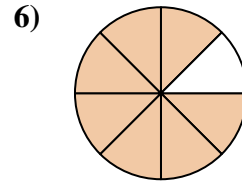
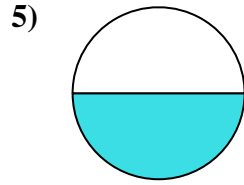
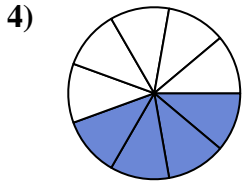
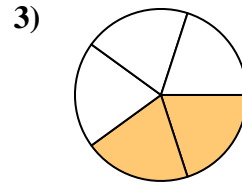
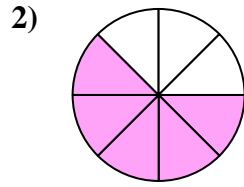
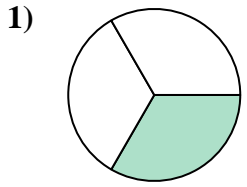
13. _____

14. _____

15. _____



Encuentra el ángulo (en grados) de la parte sombreada del círculo.



Respuestas

1. 120

2. 225

3. 144

4. 160

5. 180

6. 315

7. 288

8. 72

9. 90

10. 90

11. 324

12. 240

13. 240

14. 135

15. 270



Encuentra el ángulo (en grados) de la parte sombreada del círculo.

315

120

240

72

90

225

324

160

180

288

90

144

Respuestas

1. _____

2. _____

3. _____

4. _____

5. _____

6. _____

7. _____

8. _____

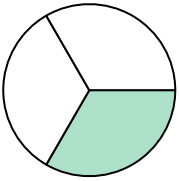
9. _____

10. _____

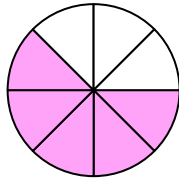
11. _____

12. _____

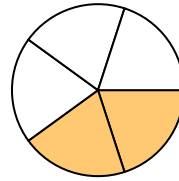
1)



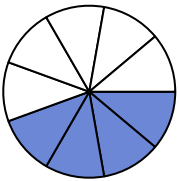
2)



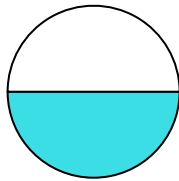
3)



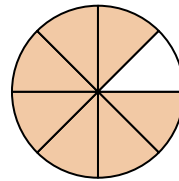
4)



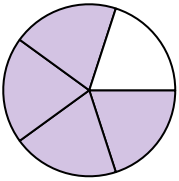
5)



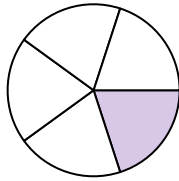
6)



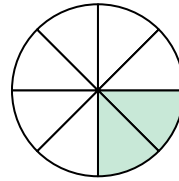
7)



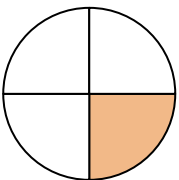
8)



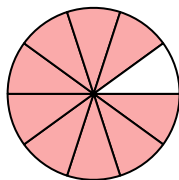
9)



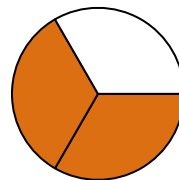
10)



11)



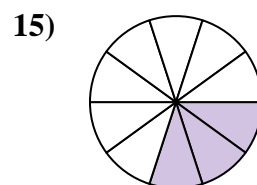
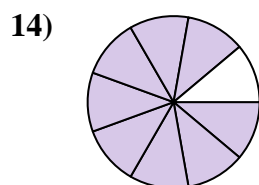
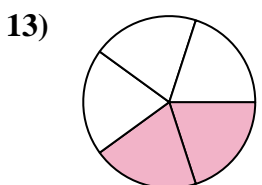
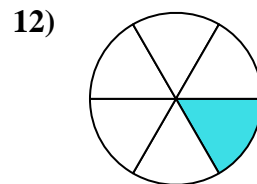
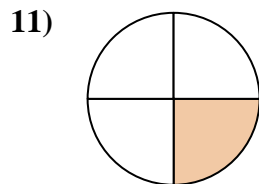
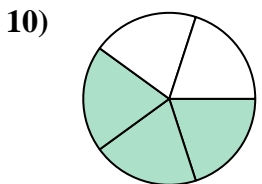
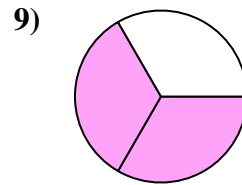
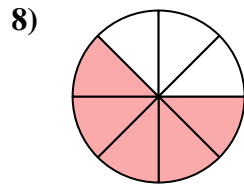
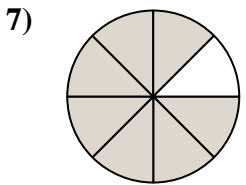
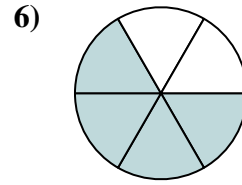
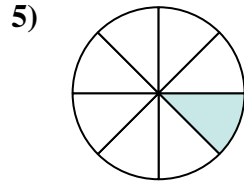
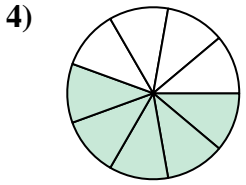
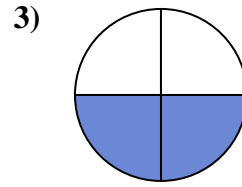
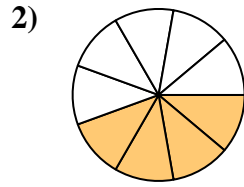
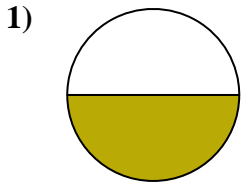
12)





Encuentra el ángulo (en grados) de la parte sombreada del círculo.

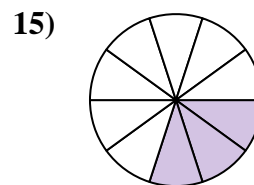
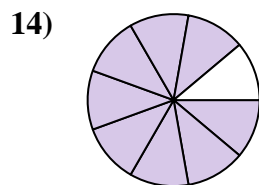
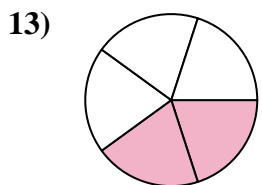
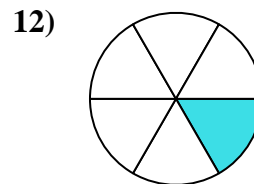
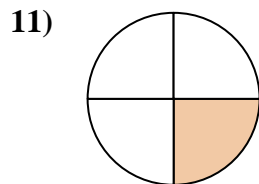
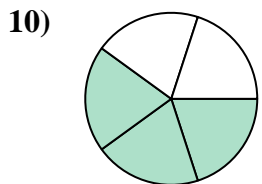
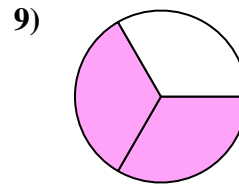
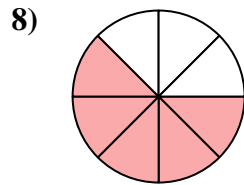
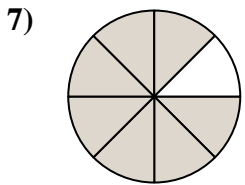
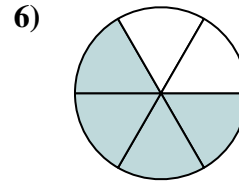
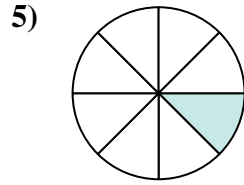
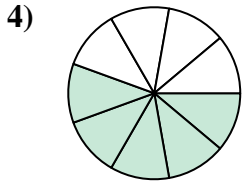
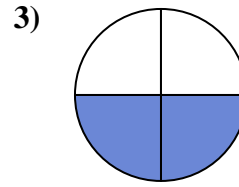
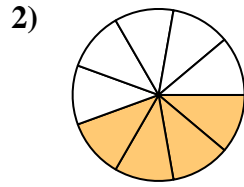
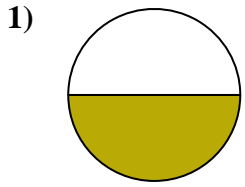
Respuestas



1. _____
2. _____
3. _____
4. _____
5. _____
6. _____
7. _____
8. _____
9. _____
10. _____
11. _____
12. _____
13. _____
14. _____
15. _____



Encuentra el ángulo (en grados) de la parte sombreada del círculo.



Respuestas

1. 180

2. 160

3. 180

4. 200

5. 45

6. 240

7. 315

8. 225

9. 240

10. 216

11. 90

12. 60

13. 144

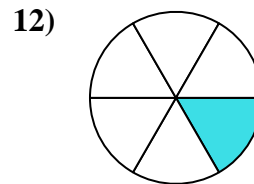
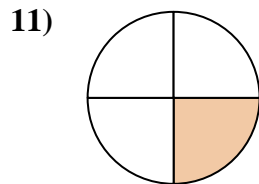
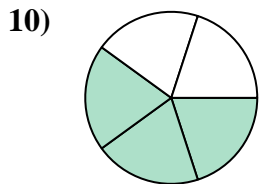
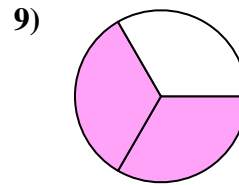
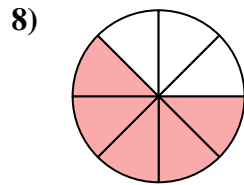
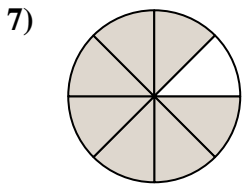
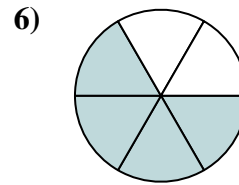
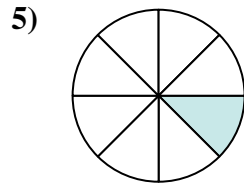
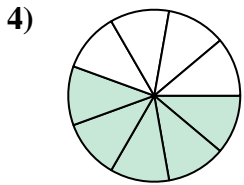
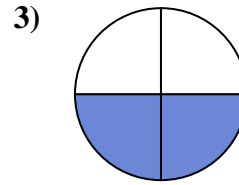
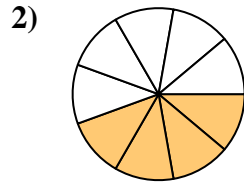
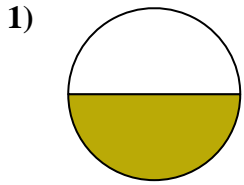
14. 320

15. 108



Encuentra el ángulo (en grados) de la parte sombreada del círculo.

90	200	240	60	160
216	315	180	45	225
240	180			



Respuestas

1. _____
2. _____
3. _____
4. _____
5. _____
6. _____
7. _____
8. _____
9. _____
10. _____
11. _____
12. _____