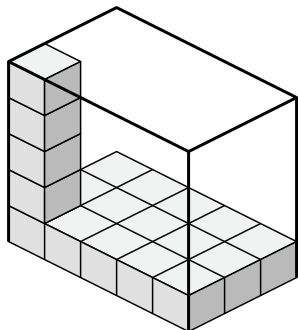




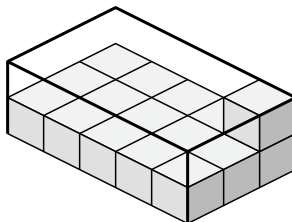
Cree una expresión para determinar el volumen de cada caja.

Respuestas

1)



2)



1. _____

2. _____

3. _____

4. _____

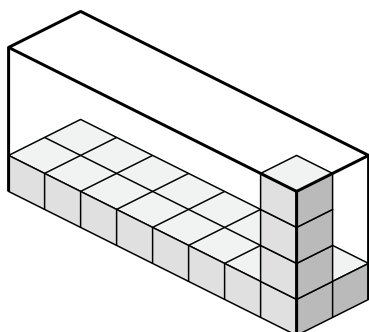
5. _____

6. _____

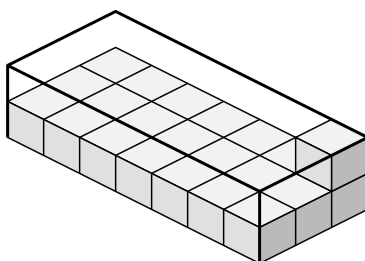
7. _____

8. _____

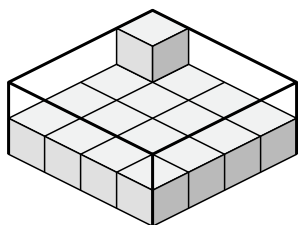
3)



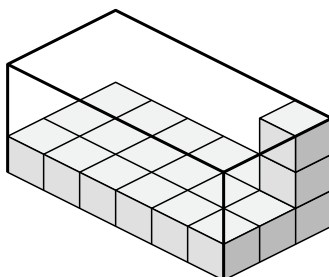
4)



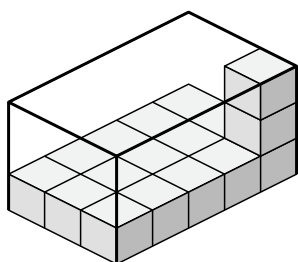
5)



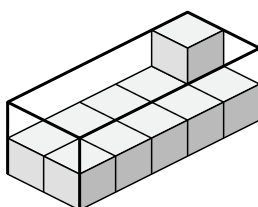
6)



7)



8)

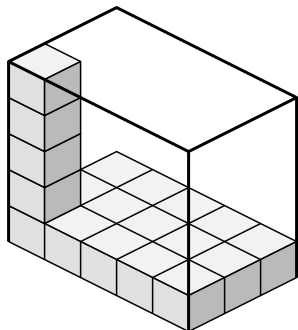




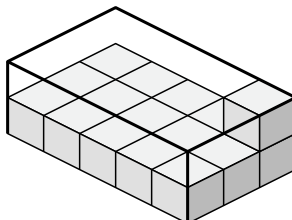
Cree una expresión para determinar el volumen de cada caja.

Respuestas

1)



2)



1. $5 \times 3 \times 5$

2. $5 \times 3 \times 2$

3. $8 \times 2 \times 4$

4. $7 \times 3 \times 2$

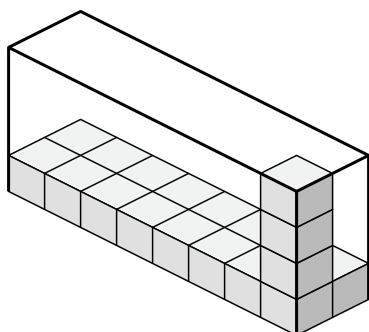
5. $4 \times 4 \times 2$

6. $6 \times 3 \times 3$

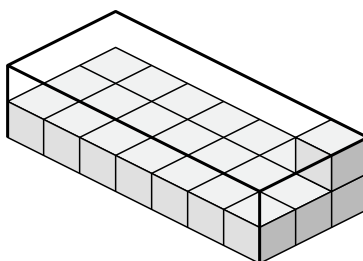
7. $3 \times 5 \times 3$

8. $2 \times 5 \times 2$

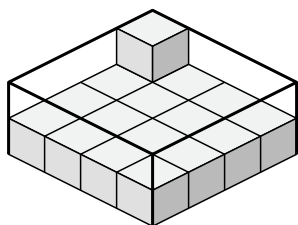
3)



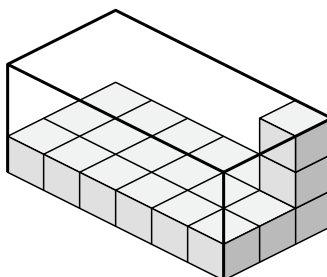
4)



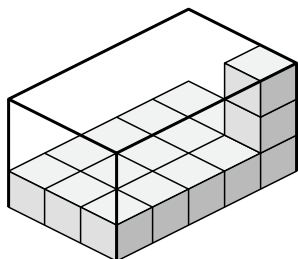
5)



6)



7)



8)

