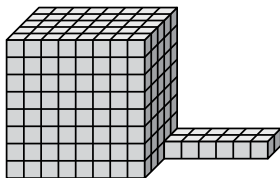




Encuentra el volumen total de cada figura. La medida es en cm (no a escala).

Respuestas

1)



1. _____

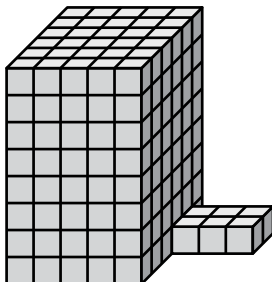
2. _____

3. _____

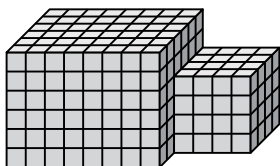
4. _____

5. _____

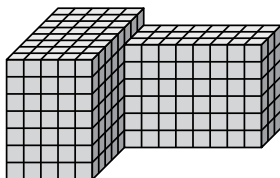
2)



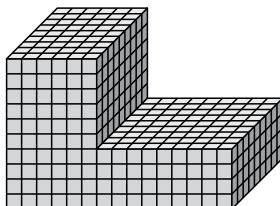
3)



4)



5)

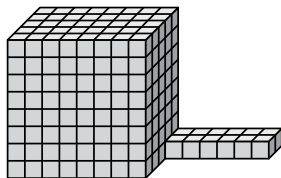




Encuentra el volumen total de cada figura. La medida es en cm (no a escala).

Respuestas

1)



$$8 \times 5 \times 8 = 320$$
$$6 \times 2 \times 1 = 12$$

1. **332 cm^3**

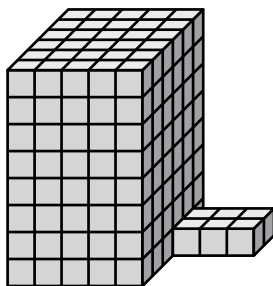
2. **246 cm^3**

3. **352 cm^3**

4. **424 cm^3**

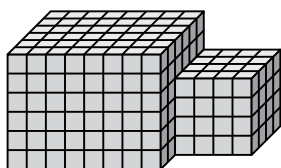
5. **864 cm^3**

2)



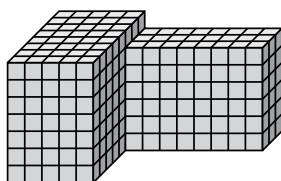
$$5 \times 6 \times 8 = 240$$
$$3 \times 2 \times 1 = 6$$

3)



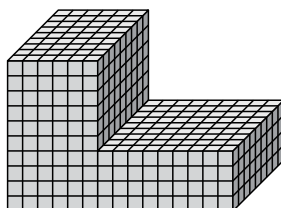
$$8 \times 6 \times 6 = 288$$
$$4 \times 4 \times 4 = 64$$

4)



$$5 \times 8 \times 7 = 280$$
$$8 \times 3 \times 6 = 144$$

5)



$$6 \times 9 \times 10 = 540$$
$$9 \times 9 \times 4 = 324$$