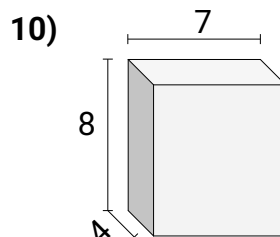
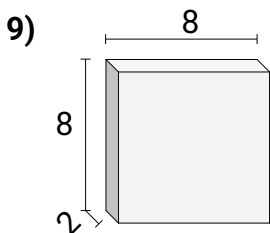
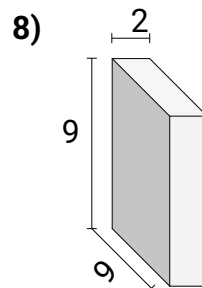
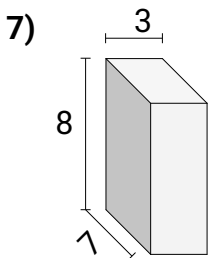
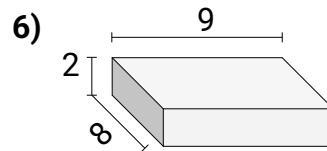
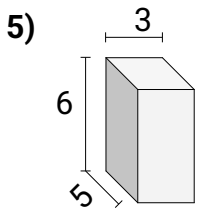
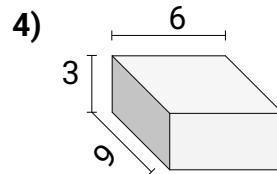
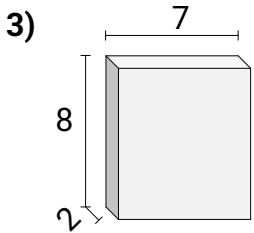
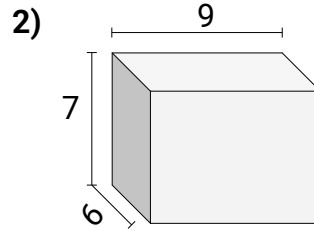
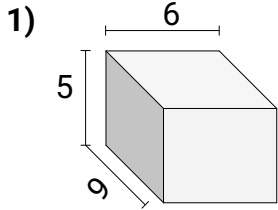




Encontrando el volumen de prismas Rectangulares Nombre:

Encuentra el volumen de cada prisma rectangular. Mide en cm (no estan en escala).

Respuestas

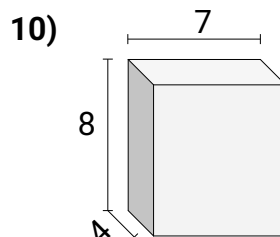
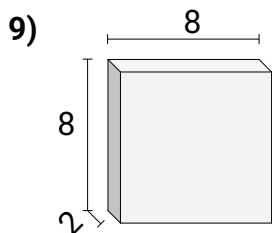
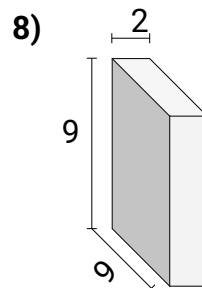
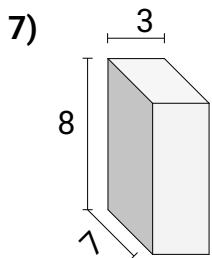
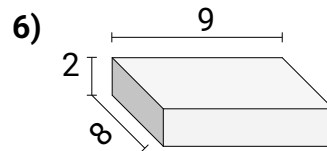
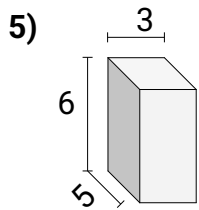
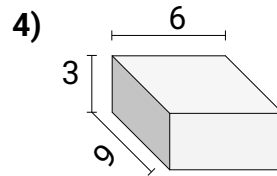
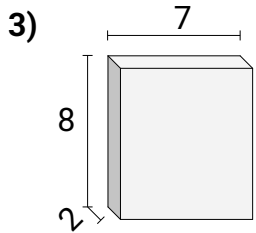
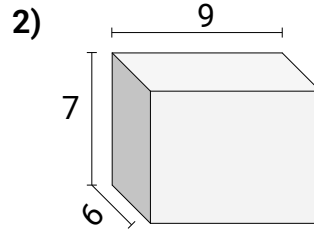
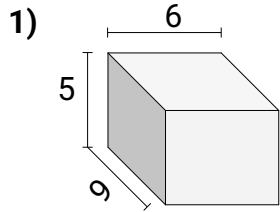


1. _____
2. _____
3. _____
4. _____
5. _____
6. _____
7. _____
8. _____
9. _____
10. _____



Encuentra el volumen de cada prisma rectangular. Mide en cm (no estan en escala).

Respuestas



- | | |
|-----|------------|
| 1. | 270 |
| 2. | 378 |
| 3. | 112 |
| 4. | 162 |
| 5. | 90 |
| 6. | 144 |
| 7. | 168 |
| 8. | 162 |
| 9. | 128 |
| 10. | 224 |