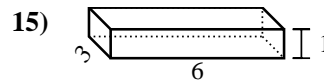
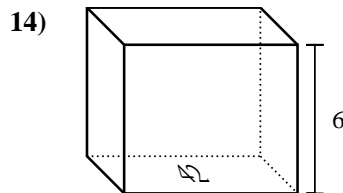
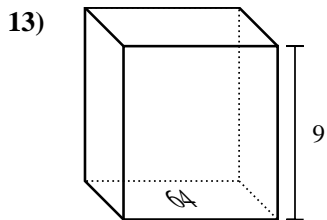
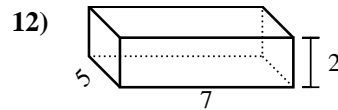
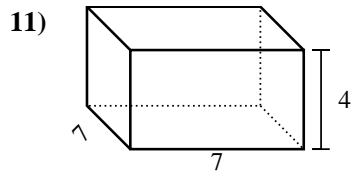
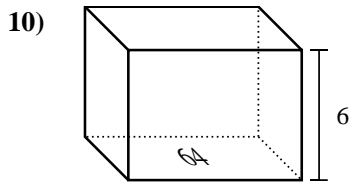
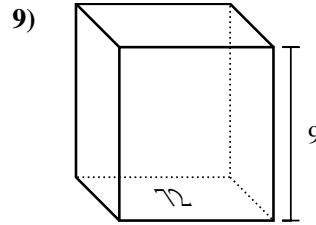
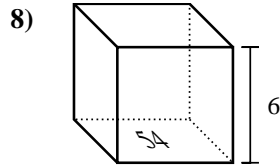
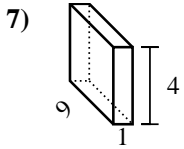
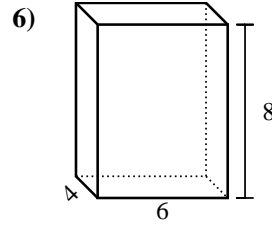
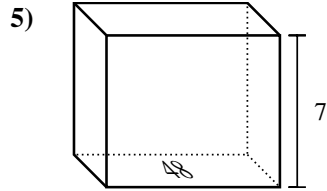
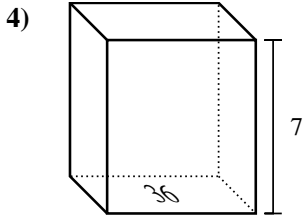
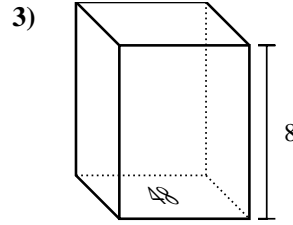
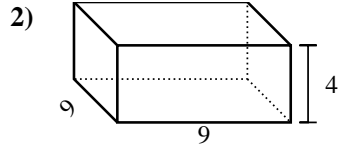
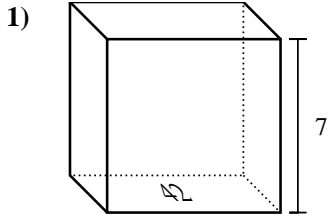




Encontrar el volumen de cada prisma rectangular. Recuerda $V = \text{Base} \times \text{Altura}$ y $V = \text{Largo} \times \text{ancho} \times \text{alto}$.

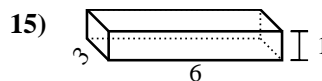
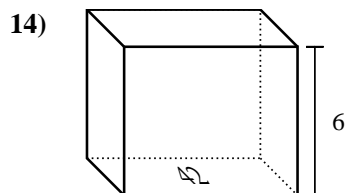
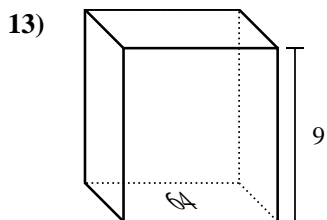
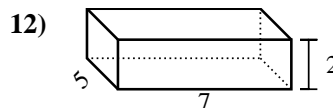
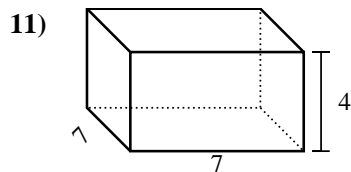
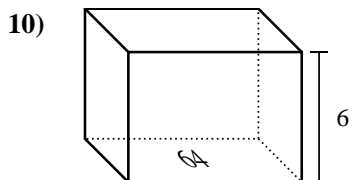
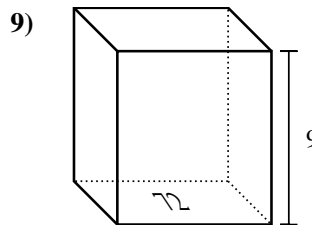
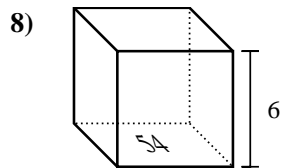
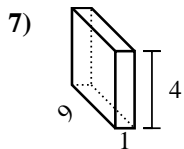
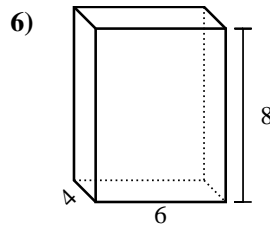
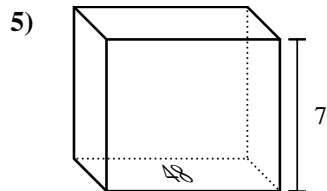
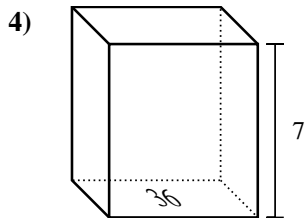
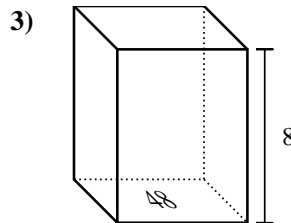
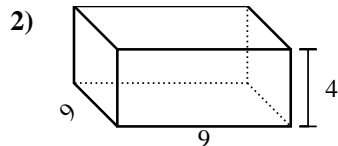
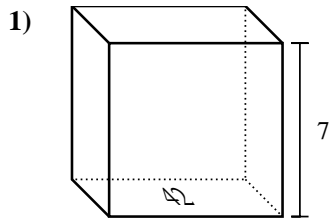
Respuestas



1. _____
2. _____
3. _____
4. _____
5. _____
6. _____
7. _____
8. _____
9. _____
10. _____
11. _____
12. _____
13. _____
14. _____
15. _____



Encontrar el volumen de cada prisma rectangular. Recuerda $V = \text{Base} \times \text{Altura}$ y $V = \text{Largo} \times \text{ancho} \times \text{alto}$.



Respuestas

1. 294 cm³
2. 324 cm³
3. 384 cm³
4. 252 cm³
5. 336 cm³
6. 192 cm³
7. 36 cm³
8. 324 cm³
9. 648 cm³
10. 384 cm³
11. 196 cm³
12. 70 cm³
13. 576 cm³
14. 252 cm³
15. 18 cm³