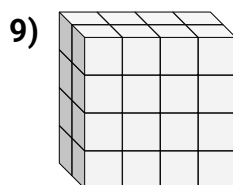
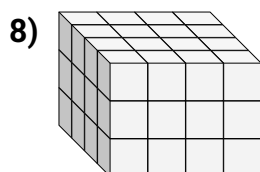
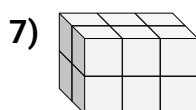
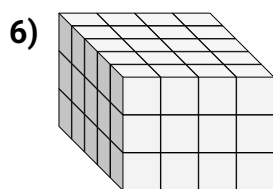
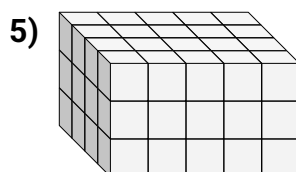
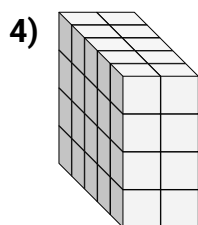
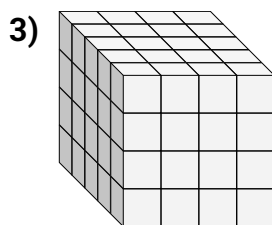
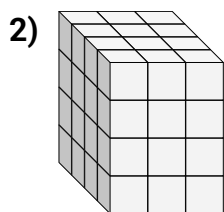
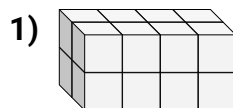
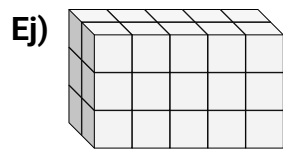




Encuentra el largo, ancho y alto del prisma rectangular. Después encuentra el volumen.



Respuestas

Ej. 2 5 3 30

1. _____

2. _____

3. _____

4. _____

5. _____

6. _____

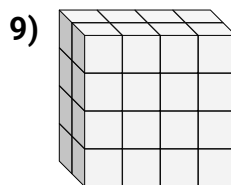
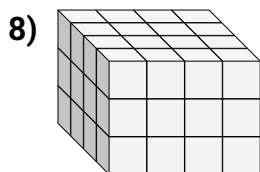
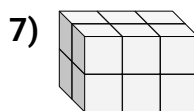
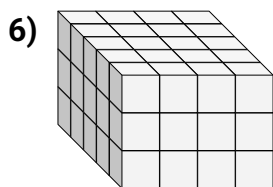
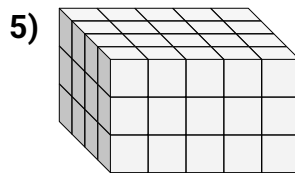
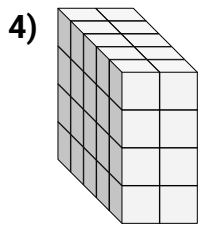
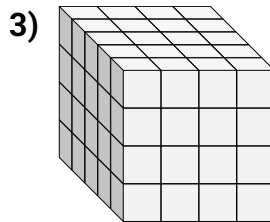
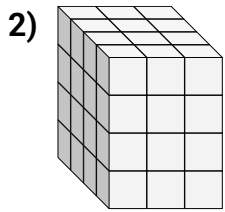
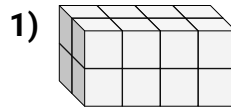
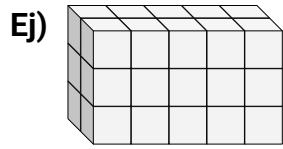
7. _____

8. _____

9. _____



Encuentra el largo, ancho y alto del prisma rectangular. Después encuentra el volumen.

**Respuestas**

Ej. 2 5 3 30

1. 2 4 2 16

2. 4 3 4 48

3. 5 4 4 80

4. 5 2 4 40

5. 4 5 3 60

6. 5 4 3 60

7. 2 3 2 12

8. 4 4 3 48

9. 2 4 4 32