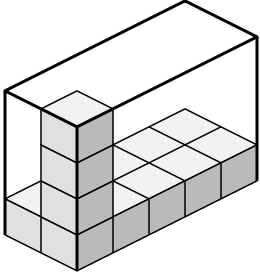


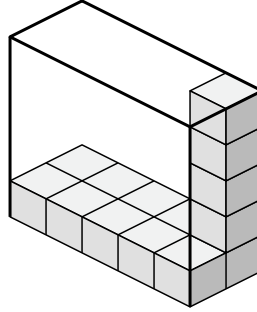


Determina el volumen de cada caja. Cada bloque es de una unidad cúbica ( $u^3$ ).

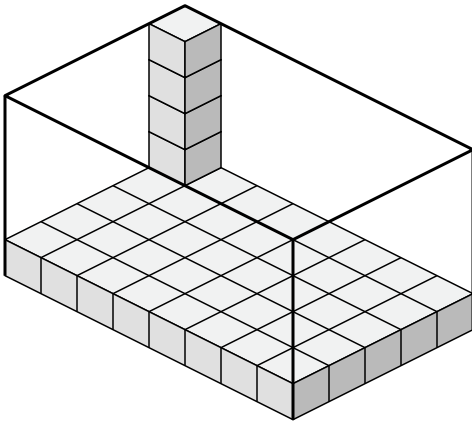
1)



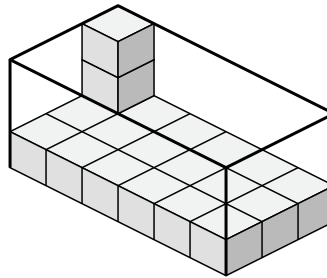
2)



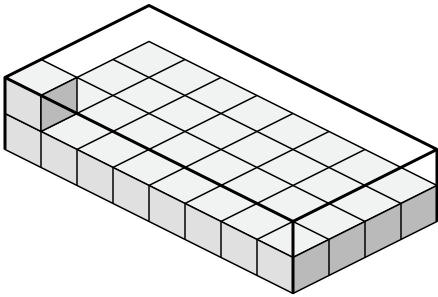
3)



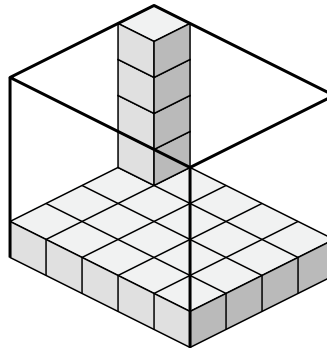
4)



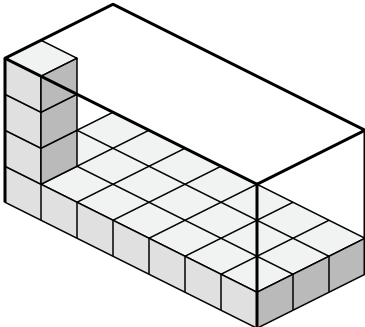
5)



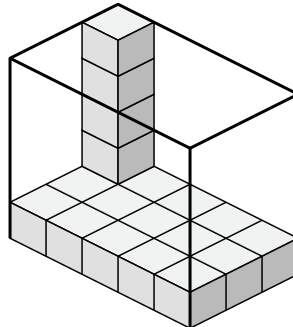
6)



7)



8)



**Respuestas**

1. \_\_\_\_\_

2. \_\_\_\_\_

3. \_\_\_\_\_

4. \_\_\_\_\_

5. \_\_\_\_\_

6. \_\_\_\_\_

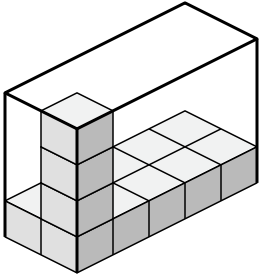
7. \_\_\_\_\_

8. \_\_\_\_\_

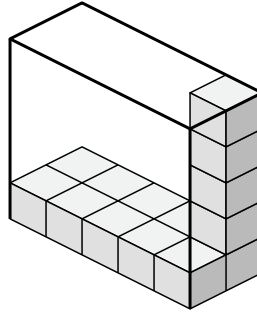


Determina el volumen de cada caja. Cada bloque es de una unidad cúbica ( $u^3$ ).

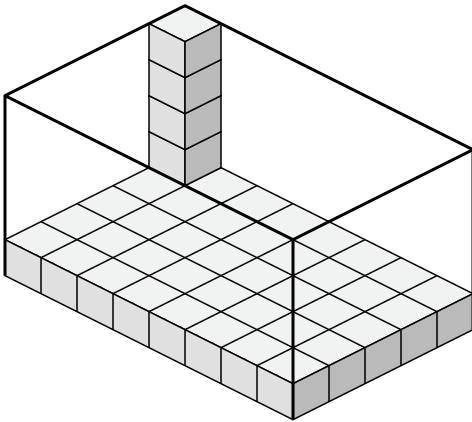
1)



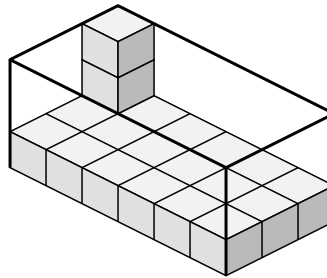
2)



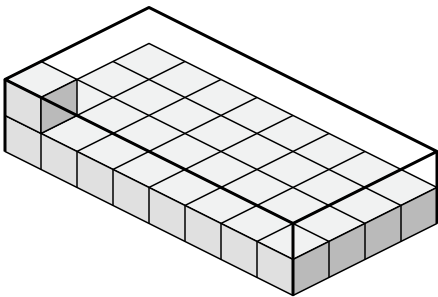
3)



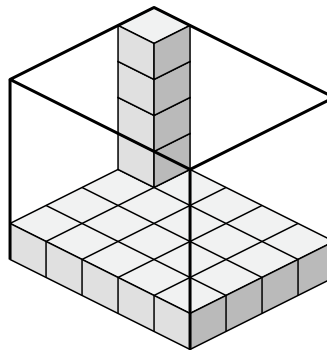
4)



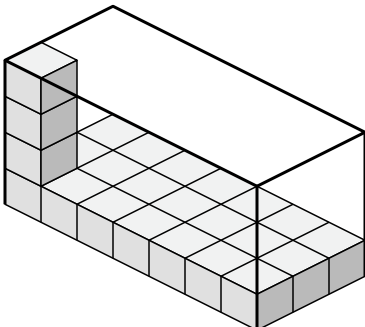
5)



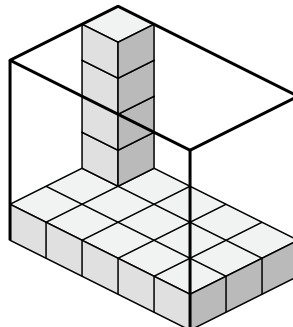
6)



7)



8)



**Respuestas**

1. 40  $u^3$

2. 50  $u^3$

3. 200  $u^3$

4. 54  $u^3$

5. 64  $u^3$

6. 100  $u^3$

7. 84  $u^3$

8. 75  $u^3$