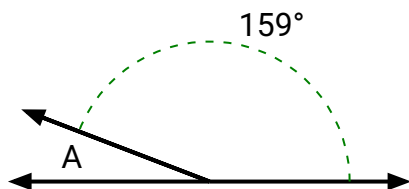




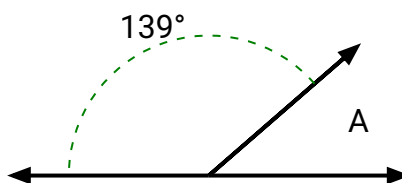
Encuentra el valor de 'A' en el conjunto de ángulos suplementarios.

**Respuestas**

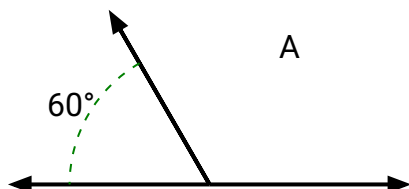
1)



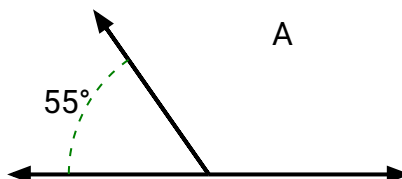
2)



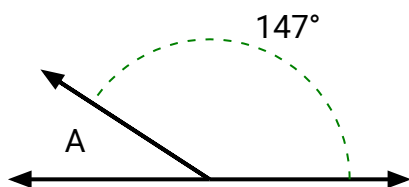
3)



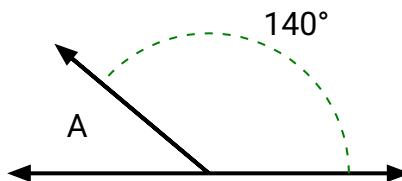
4)



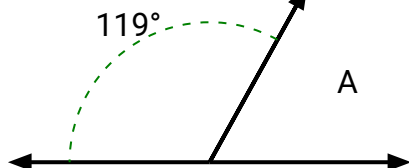
5)



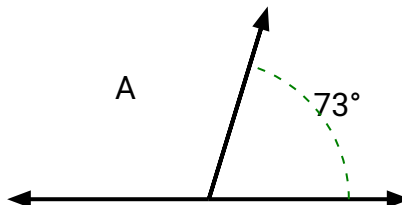
6)



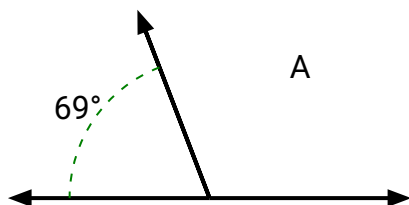
7)



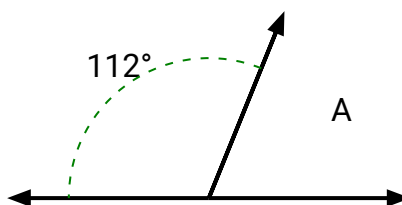
8)



9)



10)



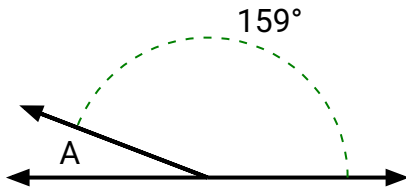
1. \_\_\_\_\_
2. \_\_\_\_\_
3. \_\_\_\_\_
4. \_\_\_\_\_
5. \_\_\_\_\_
6. \_\_\_\_\_
7. \_\_\_\_\_
8. \_\_\_\_\_
9. \_\_\_\_\_
10. \_\_\_\_\_



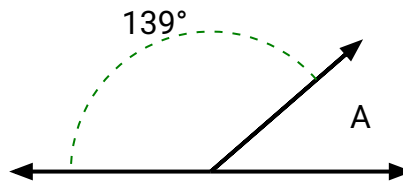
Encuentra el valor de 'A' en el conjunto de ángulos suplementarios.

**Respuestas**

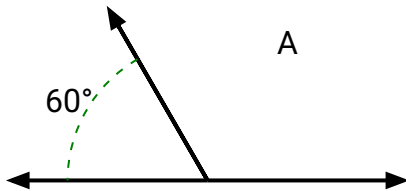
1)



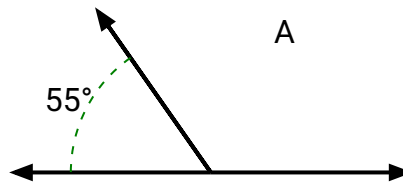
2)



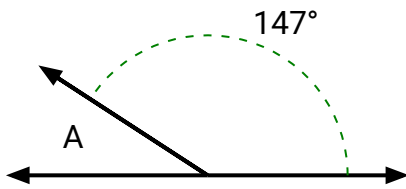
3)



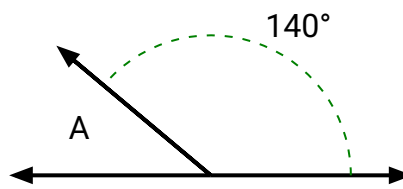
4)



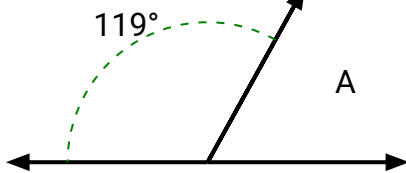
5)



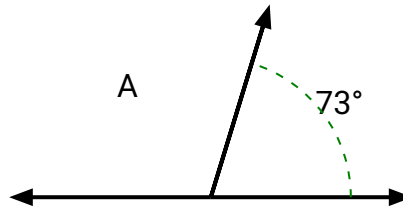
6)



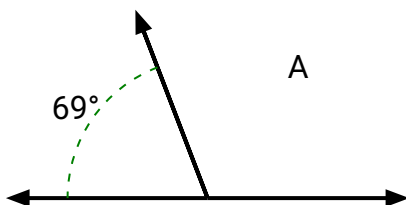
7)



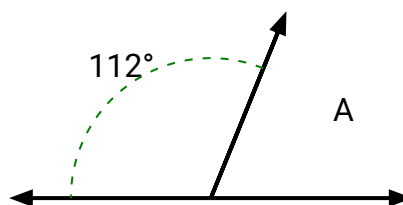
8)



9)



10)



1. **21**
2. **41**
3. **120**
4. **125**
5. **33**
6. **40**
7. **61**
8. **107**
9. **111**
10. **68**