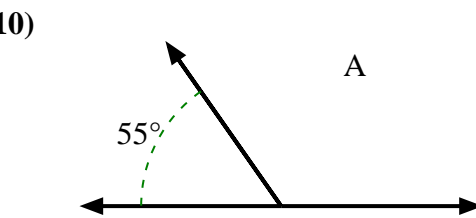
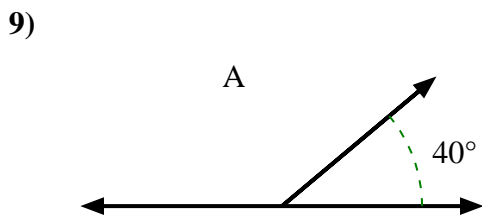
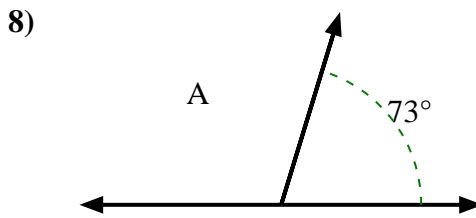
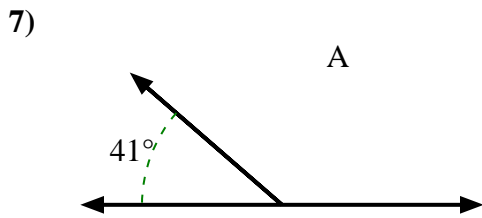
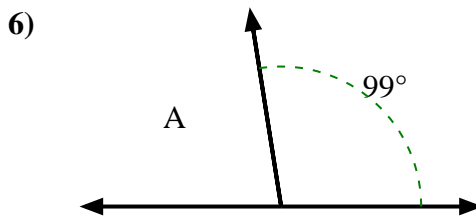
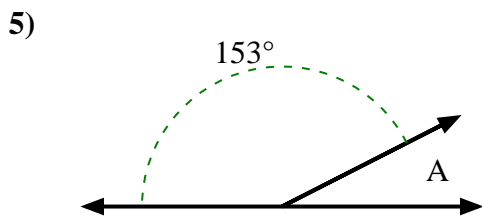
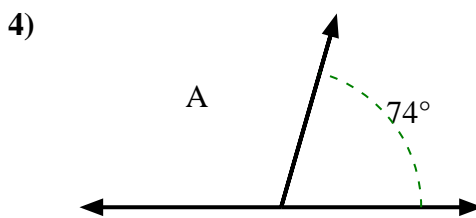
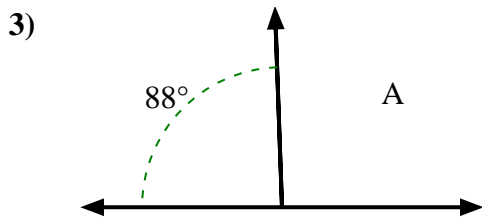
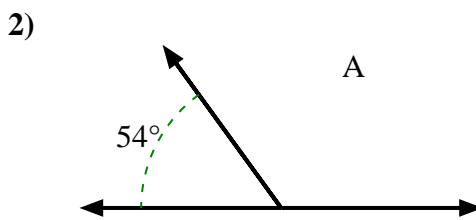
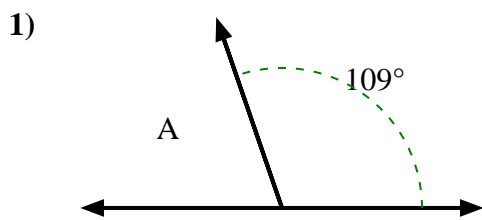




Encuentra el valor de 'A' en el conjunto de ángulos suplementarios.



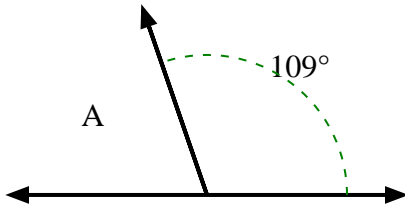
**Respuestas**

- 1. \_\_\_\_\_
- 2. \_\_\_\_\_
- 3. \_\_\_\_\_
- 4. \_\_\_\_\_
- 5. \_\_\_\_\_
- 6. \_\_\_\_\_
- 7. \_\_\_\_\_
- 8. \_\_\_\_\_
- 9. \_\_\_\_\_
- 10. \_\_\_\_\_

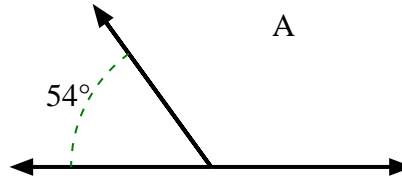


Encuentra el valor de 'A' en el conjunto de ángulos suplementarios.

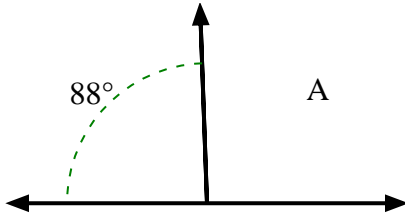
1)



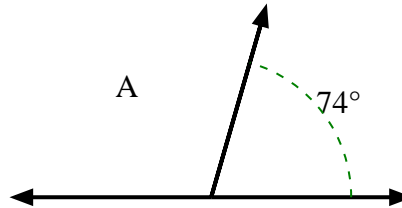
2)



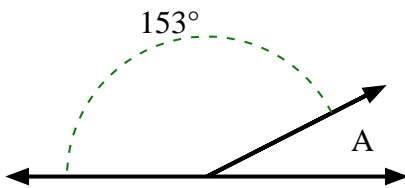
3)



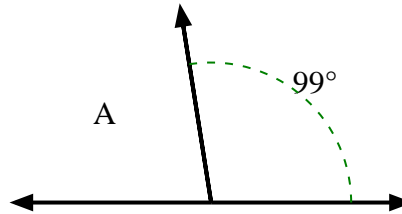
4)



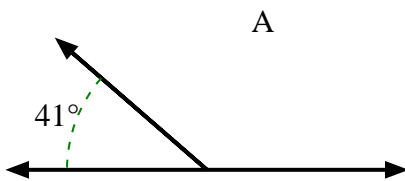
5)



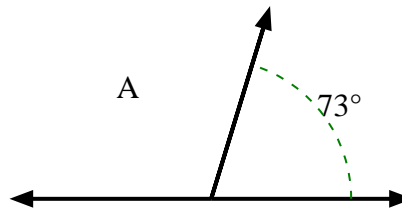
6)



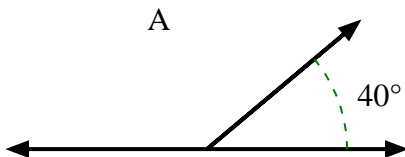
7)



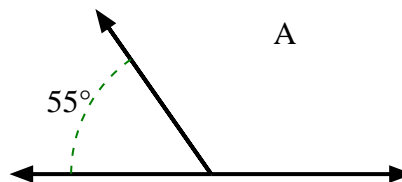
8)



9)



10)

**Respuestas**1. **71°**2. **126°**3. **92°**4. **106°**5. **27°**6. **81°**7. **139°**8. **107°**9. **140°**10. **125°**