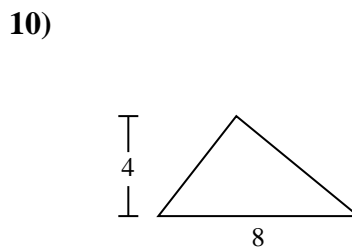
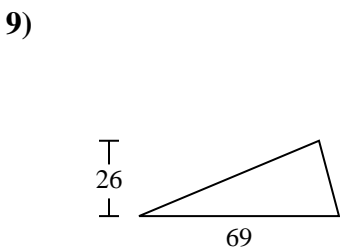
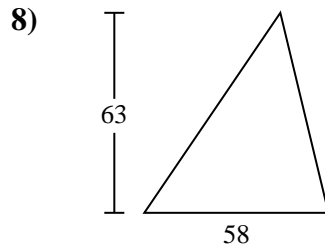
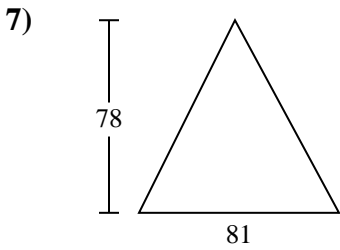
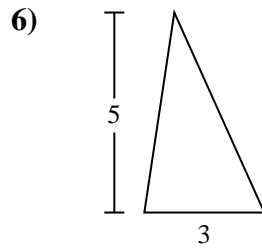
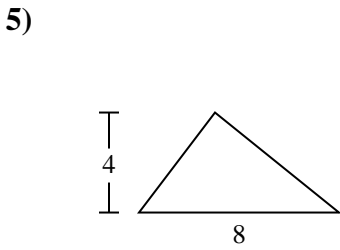
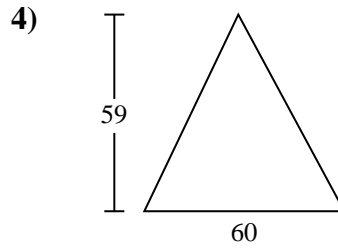
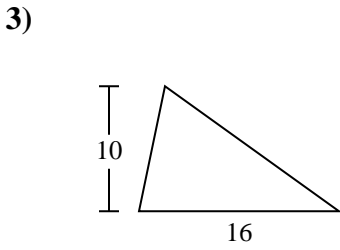
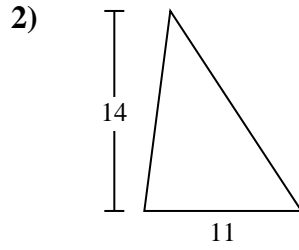
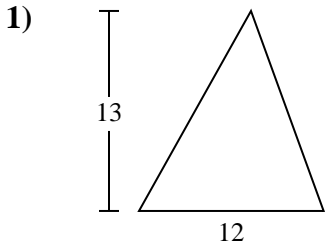




Encuentra el área de cada triángulo. Redondea tu respuesta a la décima más cercana.

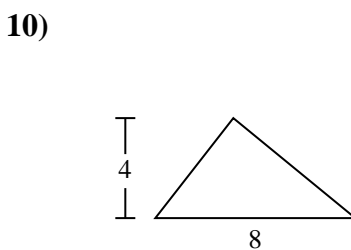
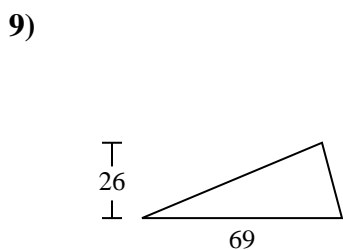
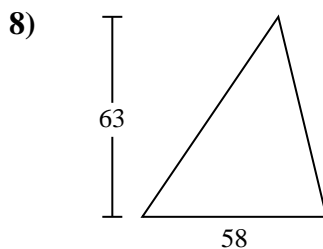
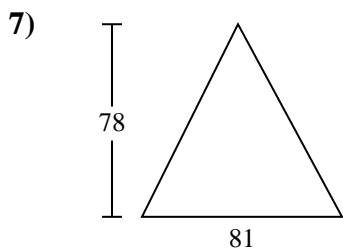
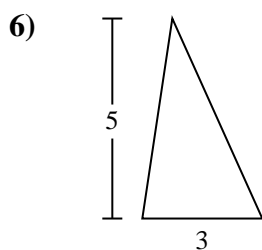
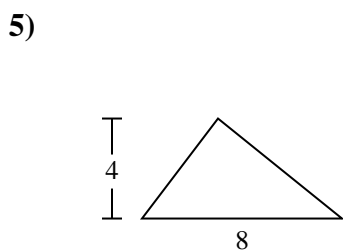
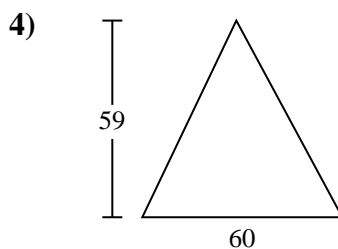
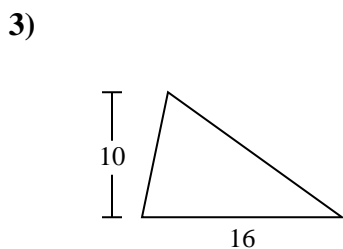
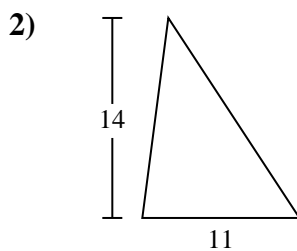
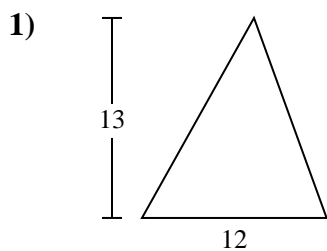
**Respuestas**



- 1. \_\_\_\_\_
- 2. \_\_\_\_\_
- 3. \_\_\_\_\_
- 4. \_\_\_\_\_
- 5. \_\_\_\_\_
- 6. \_\_\_\_\_
- 7. \_\_\_\_\_
- 8. \_\_\_\_\_
- 9. \_\_\_\_\_
- 10. \_\_\_\_\_



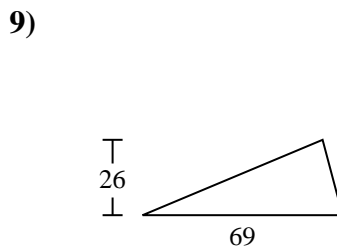
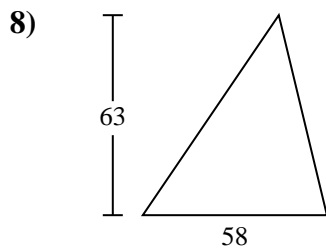
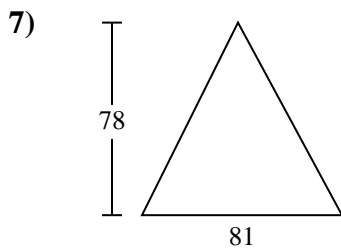
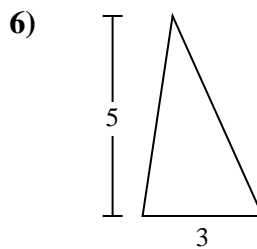
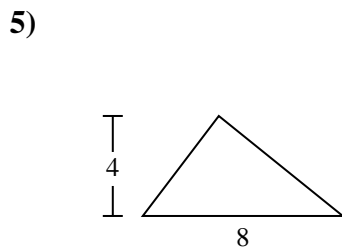
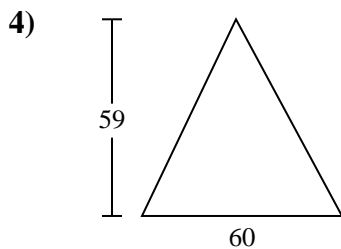
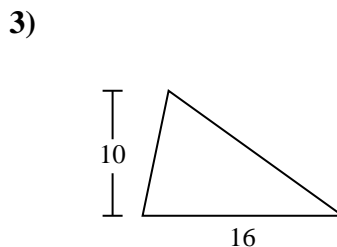
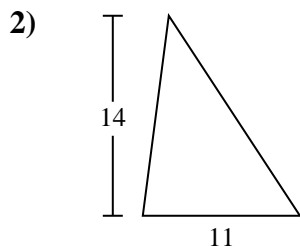
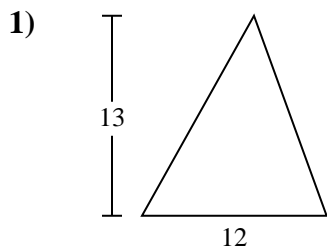
Encuentra el área de cada triángulo. Redondea tu respuesta a la décima más cercana.

Respuestas1. 782. 773. 804. 1,7705. 166. 7.57. 3,1598. 1,8279. 89710. 16



Encuentra el área de cada triángulo. Redondea tu respuesta a la décima más cercana.

1,827	1,770	7.5	78	3,159
80	77	897	16	



**Respuestas**

1. \_\_\_\_\_
2. \_\_\_\_\_
3. \_\_\_\_\_
4. \_\_\_\_\_
5. \_\_\_\_\_
6. \_\_\_\_\_
7. \_\_\_\_\_
8. \_\_\_\_\_
9. \_\_\_\_\_