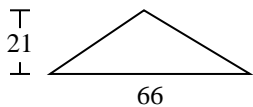


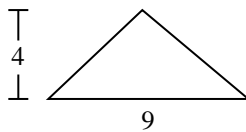


Encuentra el área de cada triángulo. Redondea tu respuesta a la décima más cercana.

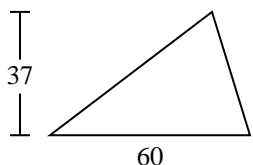
1)



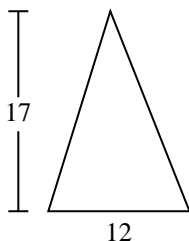
2)



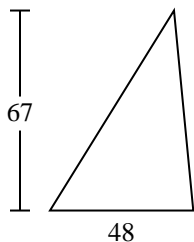
3)



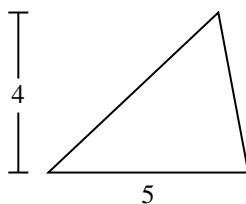
4)



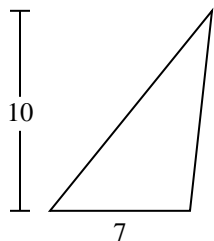
5)



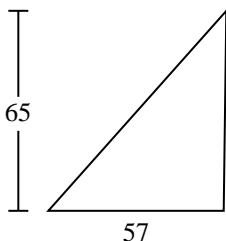
6)



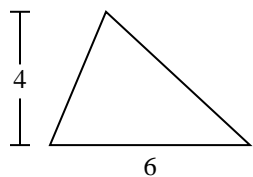
7)



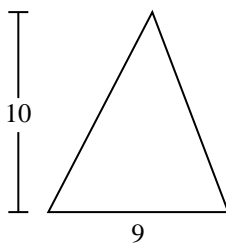
8)



9)



10)



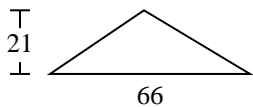
Respuestas

1. _____
2. _____
3. _____
4. _____
5. _____
6. _____
7. _____
8. _____
9. _____
10. _____

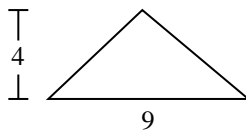


Encuentra el área de cada triángulo. Redondea tu respuesta a la décima más cercana.

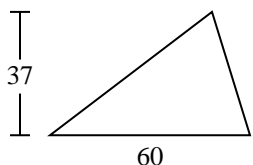
1)



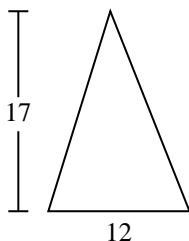
2)



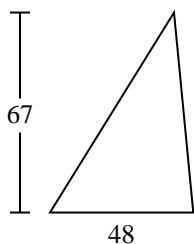
3)



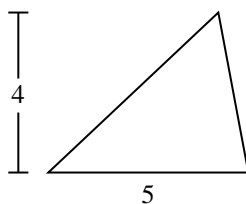
4)



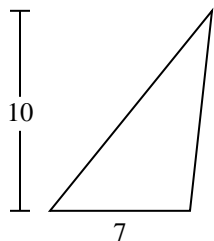
5)



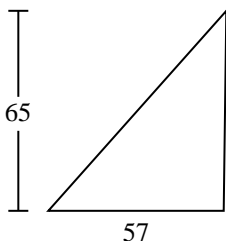
6)



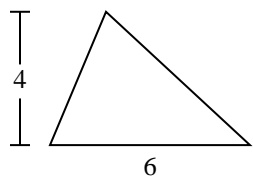
7)



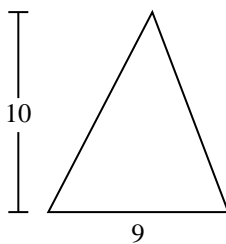
8)



9)



10)



Respuestas

1. **693**

2. **18**

3. **1,110**

4. **102**

5. **1,608**

6. **10**

7. **35**

8. **1,852.5**

9. **12**

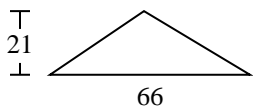
10. **45**



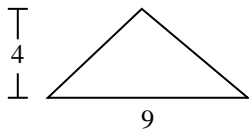
Encuentra el área de cada triángulo. Redondea tu respuesta a la décima más cercana.

1,110	693	102	1,852.5	10
18	12	1,608	35	

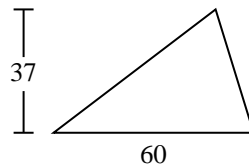
1)



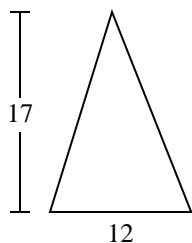
2)



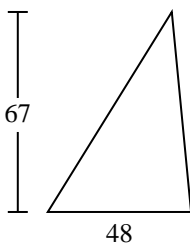
3)



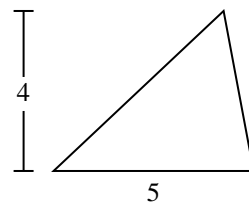
4)



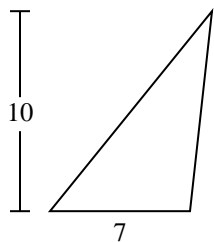
5)



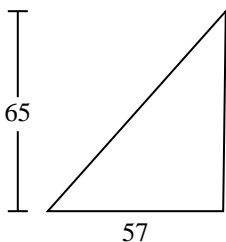
6)



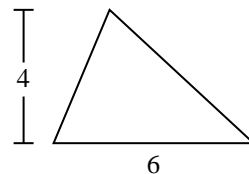
7)



8)



9)



Respuestas

1. _____
2. _____
3. _____
4. _____
5. _____
6. _____
7. _____
8. _____
9. _____