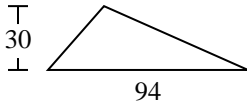


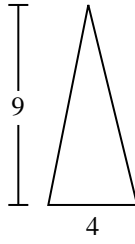


Encuentra el área de cada triángulo. Redondea tu respuesta a la décima más cercana.

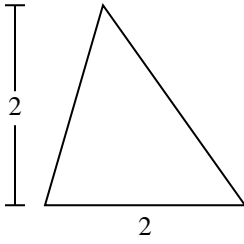
1)



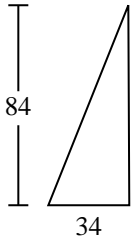
2)



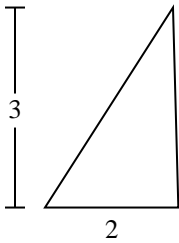
3)



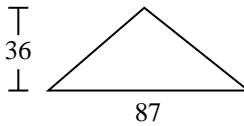
4)



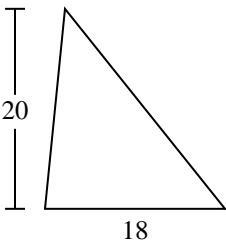
5)



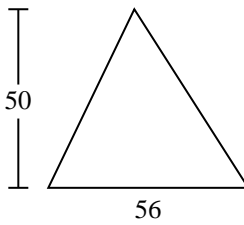
6)



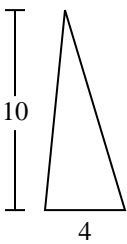
7)



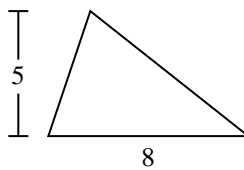
8)



9)



10)



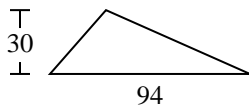
Respuestas

1. _____
2. _____
3. _____
4. _____
5. _____
6. _____
7. _____
8. _____
9. _____
10. _____

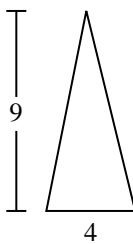


Encuentra el área de cada triángulo. Redondea tu respuesta a la décima más cercana.

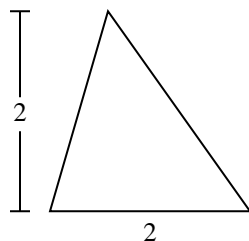
1)



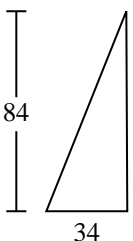
2)



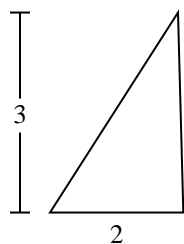
3)



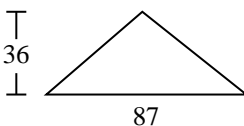
4)



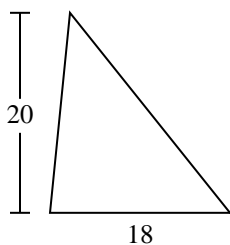
5)



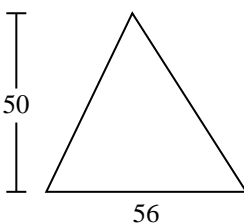
6)



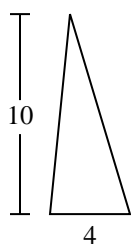
7)



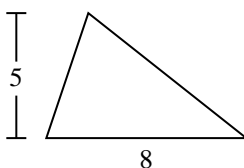
8)



9)



10)

**Respuestas**1. 1,4102. 183. 24. 1,4285. 36. 1,5667. 1808. 1,4009. 2010. 20



Encuentra el área de cada triángulo. Redondea tu respuesta a la décima más cercana.

180
3

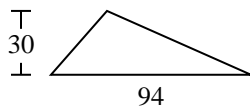
1,428
2

18
20

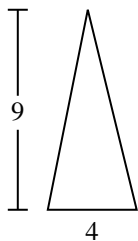
1,566
1,410

1,400

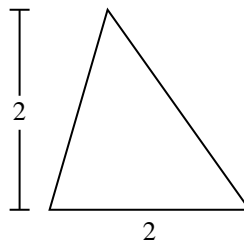
1)



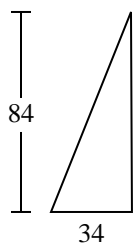
2)



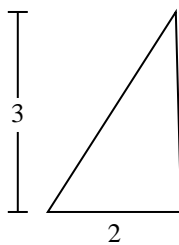
3)



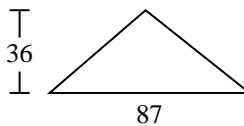
4)



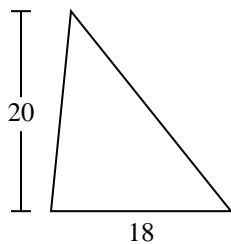
5)



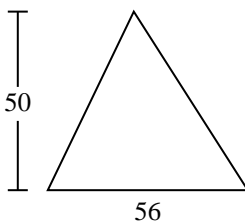
6)



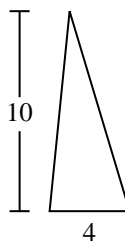
7)



8)



9)



Respuestas

1. _____
2. _____
3. _____
4. _____
5. _____
6. _____
7. _____
8. _____
9. _____