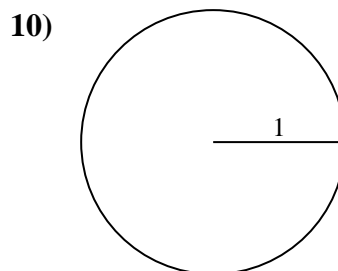
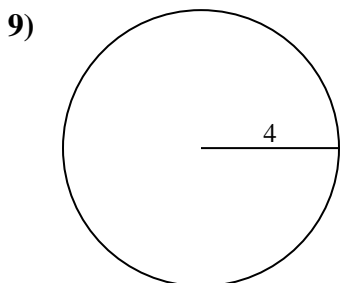
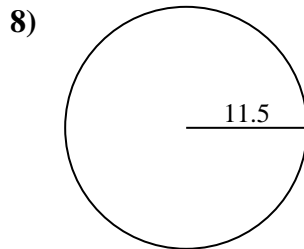
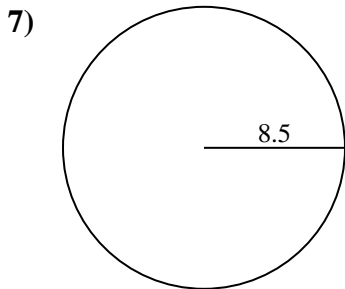
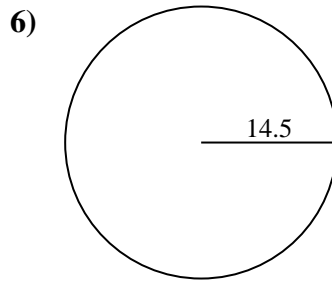
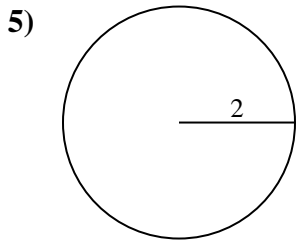
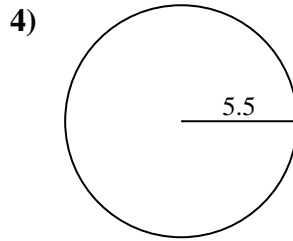
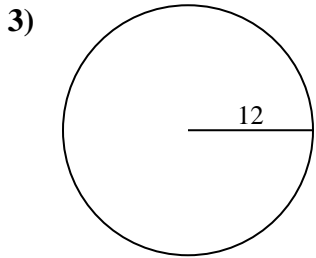
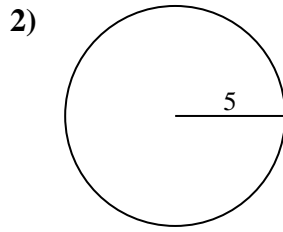
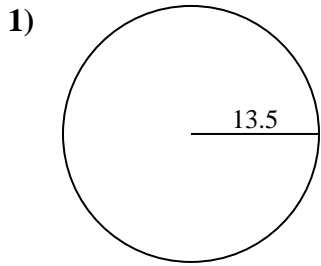




Encuentra la circunferencia de cada círculo. Los círculos no están a escala.

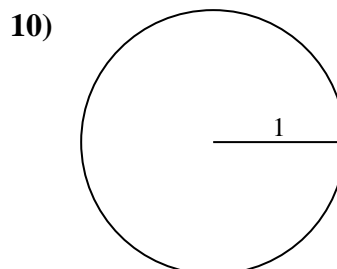
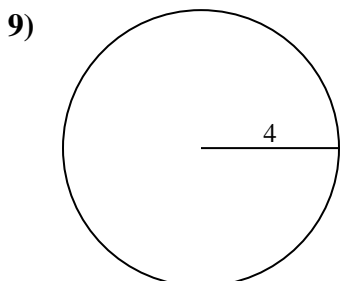
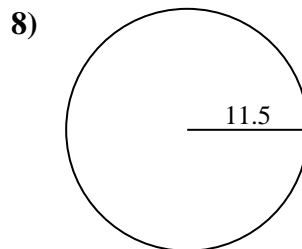
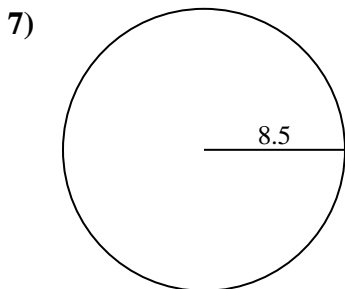
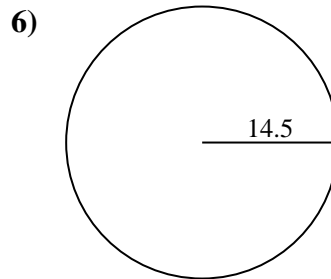
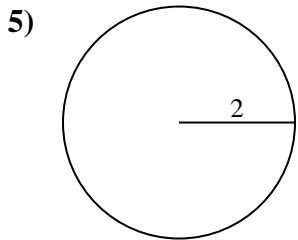
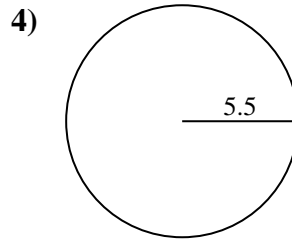
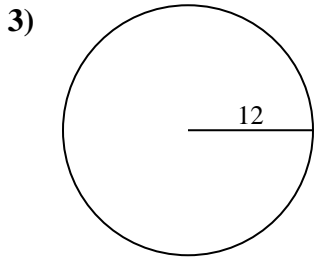
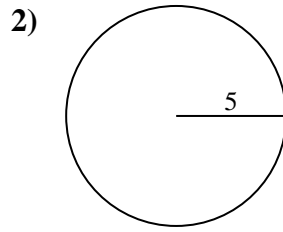
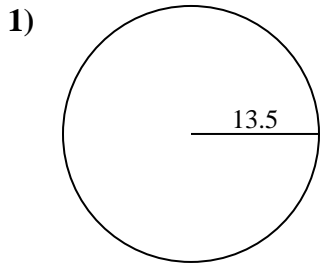


Respuestas

- 1. _____
- 2. _____
- 3. _____
- 4. _____
- 5. _____
- 6. _____
- 7. _____
- 8. _____
- 9. _____
- 10. _____



Encuentra la circunferencia de cada círculo. Los círculos no están a escala.



Respuestas

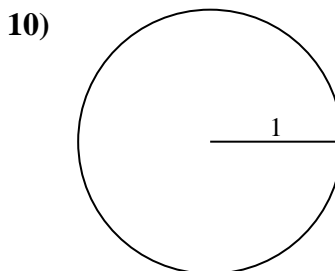
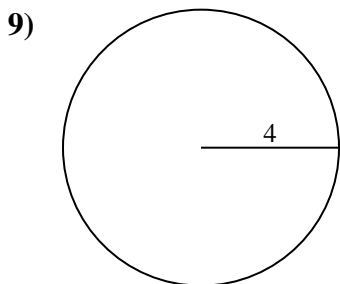
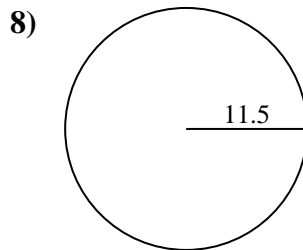
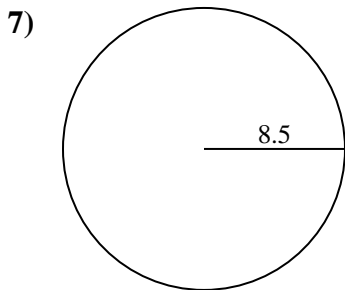
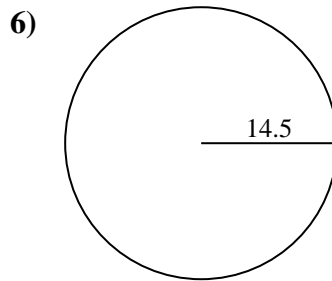
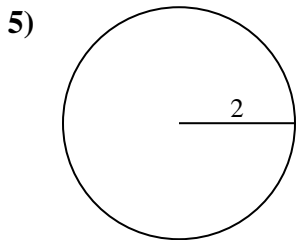
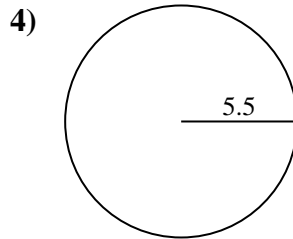
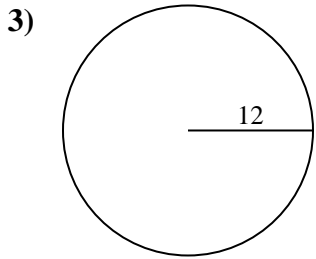
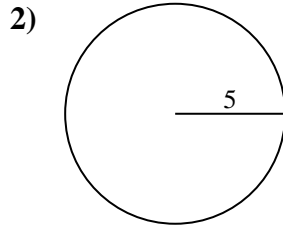
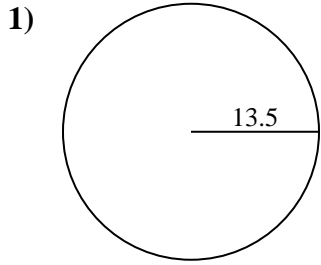
1. 84.82 cm
2. 31.42 cm
3. 75.4 cm
4. 34.56 cm
5. 12.57 cm
6. 91.11 cm
7. 53.41 cm
8. 72.26 cm
9. 25.13 cm
10. 6.28 cm



Encuentra la circunferencia de cada círculo. Los círculos no están a escala.

53.41 cm	84.82 cm	31.42 cm	72.26 cm	34.56 cm
12.57 cm	75.4 cm	91.11 cm	6.28 cm	25.13 cm

Respuestas



- 1. _____
- 2. _____
- 3. _____
- 4. _____
- 5. _____
- 6. _____
- 7. _____
- 8. _____
- 9. _____
- 10. _____