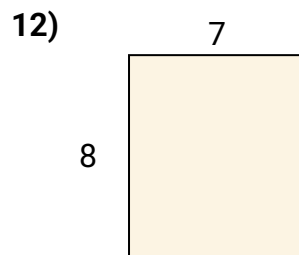
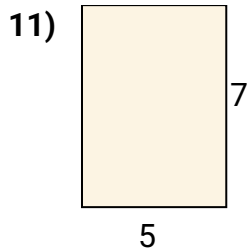
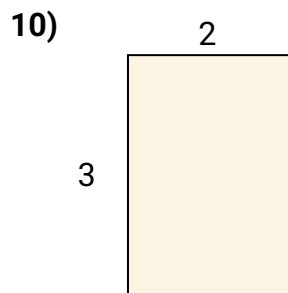
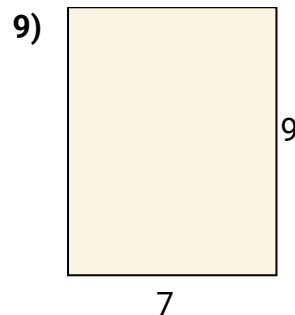
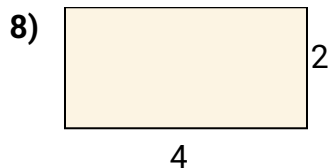
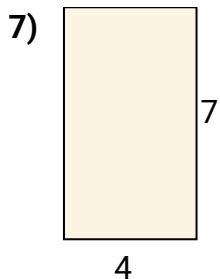

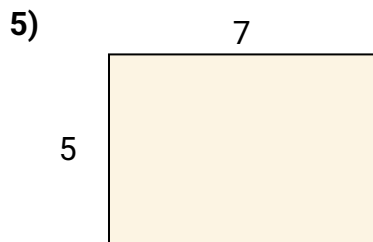
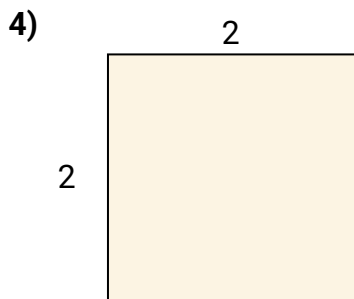
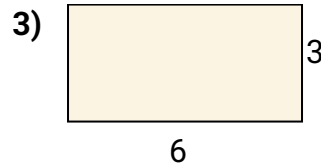
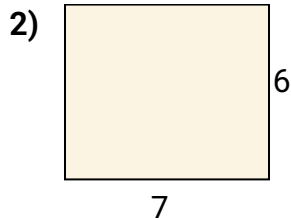
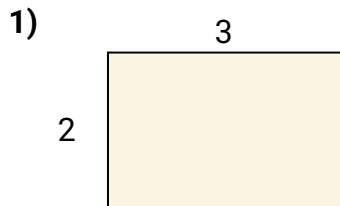




Encuentra el área (en cm) de los rectángulos mostrados.

**Respuestas**

1. \_\_\_\_\_

2. \_\_\_\_\_

3. \_\_\_\_\_

4. \_\_\_\_\_

5. \_\_\_\_\_

6. \_\_\_\_\_

7. \_\_\_\_\_

8. \_\_\_\_\_

9. \_\_\_\_\_

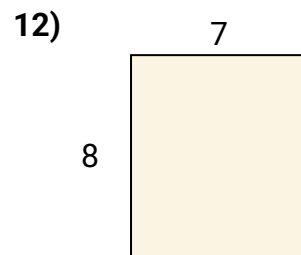
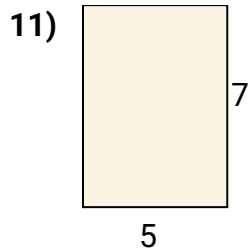
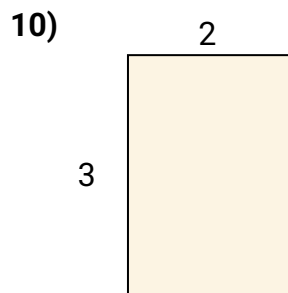
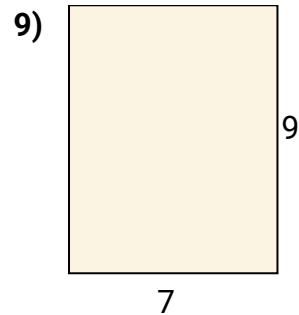
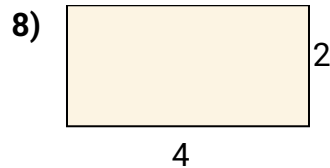
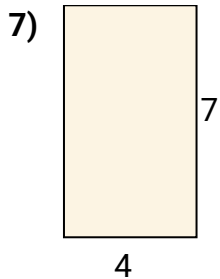

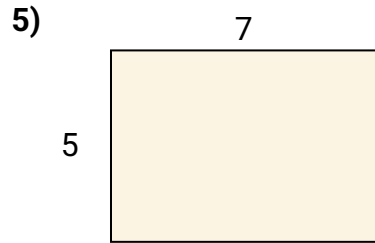
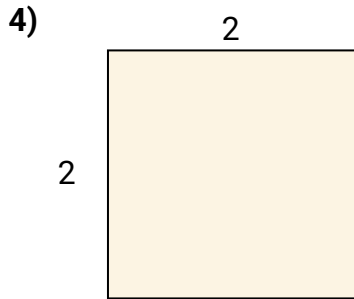
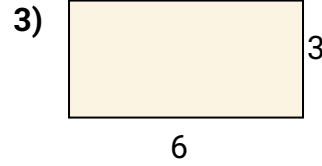
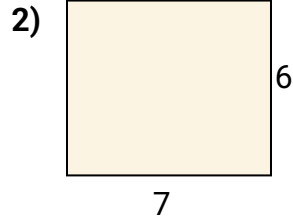
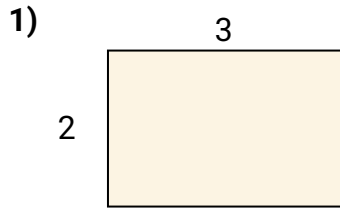
10. \_\_\_\_\_

11. \_\_\_\_\_

12. \_\_\_\_\_



Encuentra el área (en cm) de los rectángulos mostrados.

**Respuestas**1.  **$6\text{cm}^2$** 2.  **$42\text{cm}^2$** 3.  **$18\text{cm}^2$** 4.  **$4\text{cm}^2$** 5.  **$35\text{cm}^2$** 6.  **$16\text{cm}^2$** 7.  **$28\text{cm}^2$** 8.  **$8\text{cm}^2$** 9.  **$63\text{cm}^2$** 10.  **$6\text{cm}^2$** 11.  **$35\text{cm}^2$** 12.  **$56\text{cm}^2$**