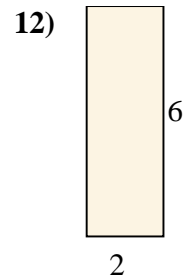
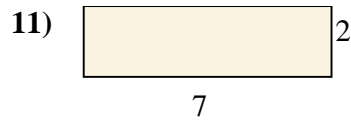
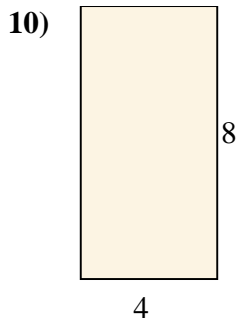


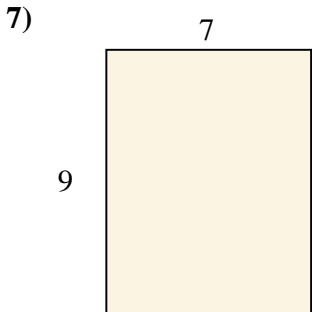
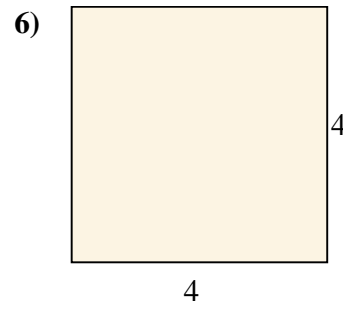
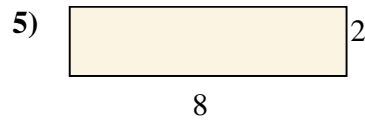
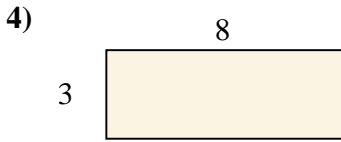
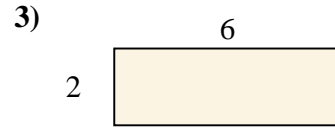
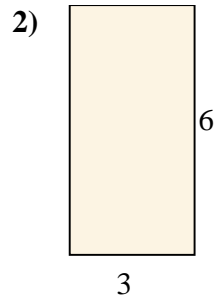
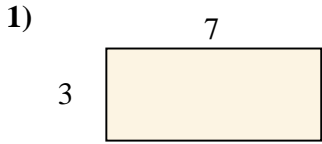




Encuentra el área (en cm) de los rectángulos mostrados.

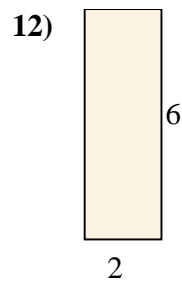
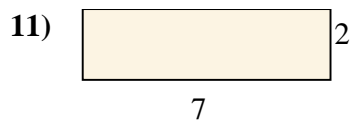
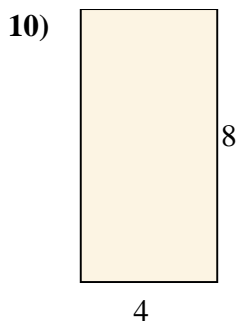
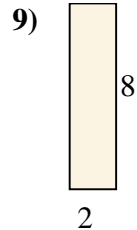
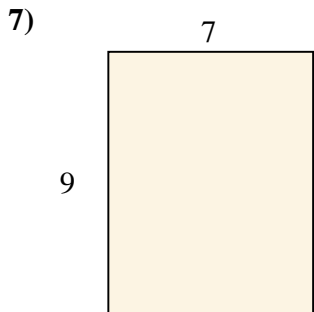
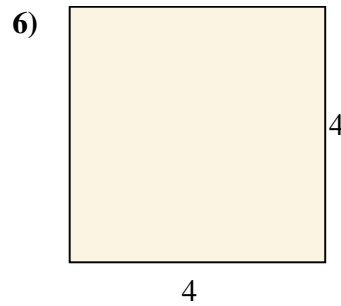
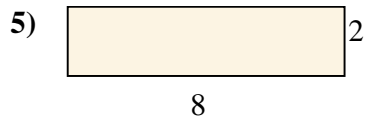
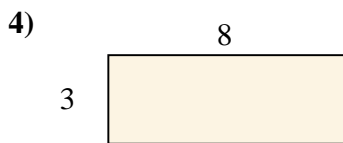
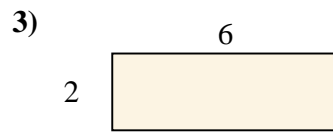
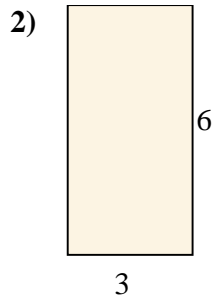
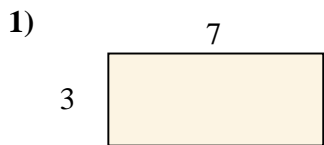


**Respuestas**

- 1. \_\_\_\_\_
- 2. \_\_\_\_\_
- 3. \_\_\_\_\_
- 4. \_\_\_\_\_
- 5. \_\_\_\_\_
- 6. \_\_\_\_\_
- 7. \_\_\_\_\_
- 8. \_\_\_\_\_
- 9. \_\_\_\_\_
- 10. \_\_\_\_\_
- 11. \_\_\_\_\_
- 12. \_\_\_\_\_



Encuentra el área (en cm) de los rectángulos mostrados.



**Respuestas**

1. 21

2. 18

3. 12

4. 24

5. 16

6. 16

7. 63

8. 27

9. 16

10. 32

11. 14

12. 12