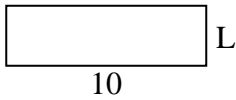




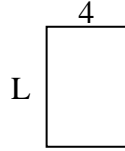
Determina el valor de 'L'. Las longitudes están en cm (no a escala).

Respuestas

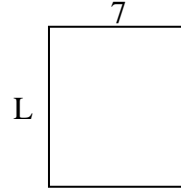
1) perímetro = 26



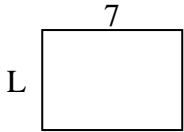
2) perímetro = 20



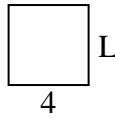
3) perímetro = 30



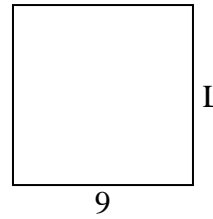
4) perímetro = 24



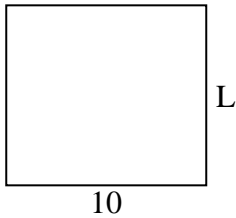
5) perímetro = 16



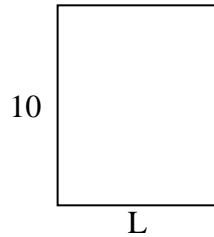
6) perímetro = 36



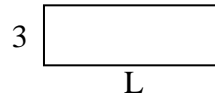
7) perímetro = 38




8) perímetro = 36



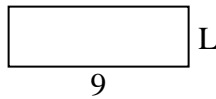
9) perímetro = 24



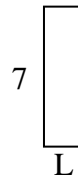
10) perímetro = 24



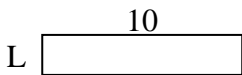
11) perímetro = 24



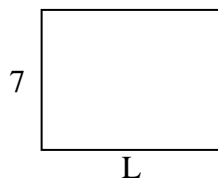
12) perímetro = 18



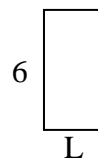
13) perímetro = 24



14) perímetro = 32



15) perímetro = 18



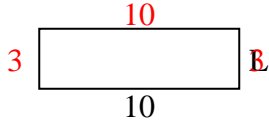
1. _____
2. _____
3. _____
4. _____
5. _____
6. _____
7. _____
8. _____
9. _____
10. _____
11. _____
12. _____
13. _____
14. _____
15. _____



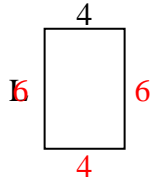
Determina el valor de 'L'. Las longitudes están en cm (no a escala).

Respuestas

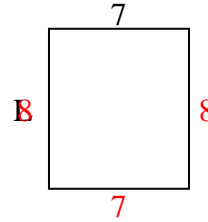
1) perímetro = 26



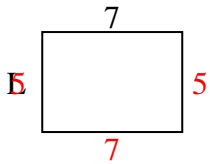
2) perímetro = 20



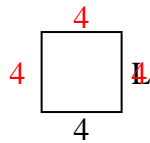
3) perímetro = 30



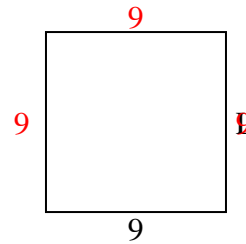
4) perímetro = 24



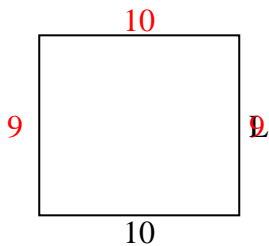
5) perímetro = 16



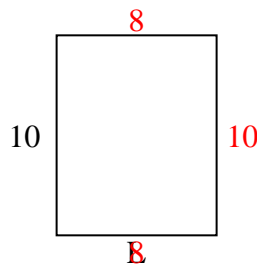
6) perímetro = 36



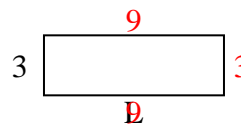
7) perímetro = 38



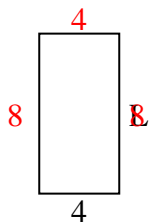
8) perímetro = 36



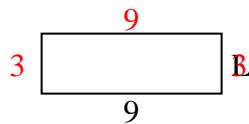
9) perímetro = 24



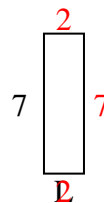
10) perímetro = 24



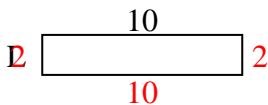
11) perímetro = 24



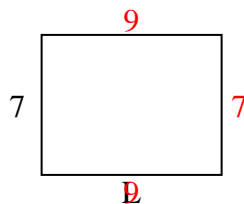
12) perímetro = 18



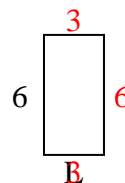
13) perímetro = 24



14) perímetro = 32



15) perímetro = 18

1. **3 cm**2. **6 cm**3. **8 cm**4. **5 cm**5. **4 cm**6. **9 cm**7. **9 cm**8. **8 cm**9. **9 cm**10. **8 cm**11. **3 cm**12. **2 cm**13. **2 cm**14. **9 cm**15. **3 cm**