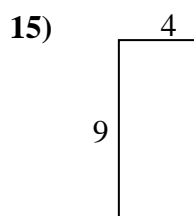
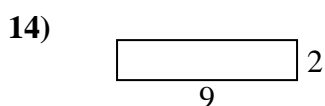
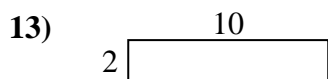
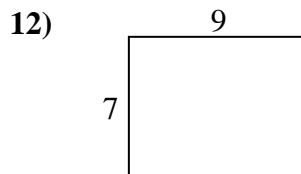
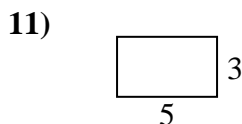
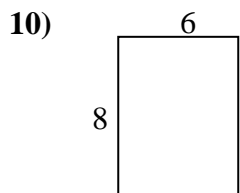
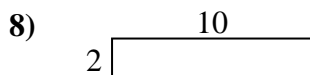
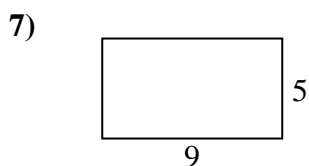
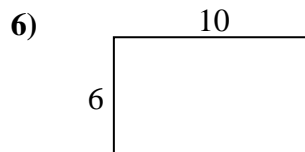
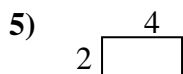
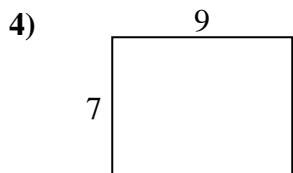
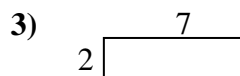
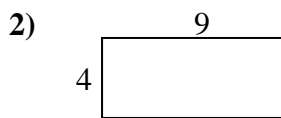
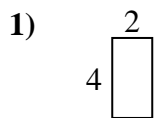




Encuentra el perímetro de cada figura. Cada figura está en pulgadas. No a escala.

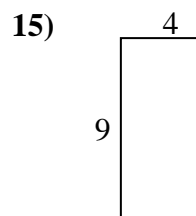
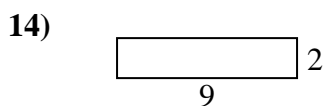
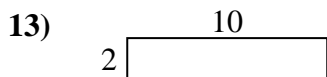
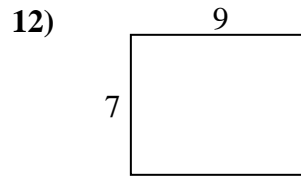
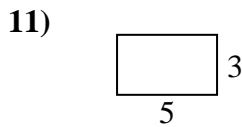
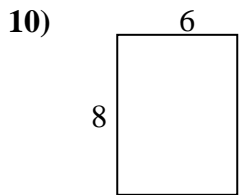
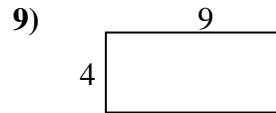

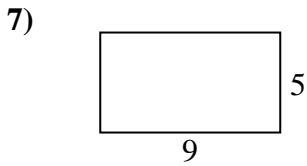
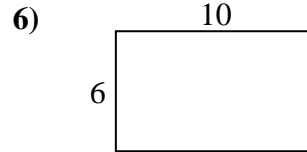
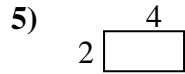
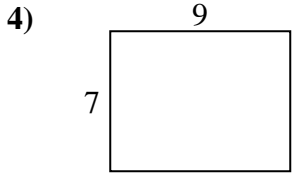
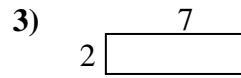
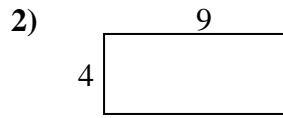
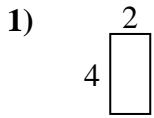


Respuestas

1. _____
2. _____
3. _____
4. _____
5. _____
6. _____
7. _____
8. _____
9. _____
10. _____
11. _____
12. _____
13. _____
14. _____
15. _____



Encuentra el perímetro de cada figura. Cada figura está en pulgadas. No a escala.



Respuestas

1. 12 8

2. 26 36

3. 18 14

4. 32 63

5. 12 8

6. 32 60

7. 28 45

8. 24 20

9. 26 36

10. 28 48

11. 16 15

12. 32 63

13. 24 20

14. 22 18

15. 26 36