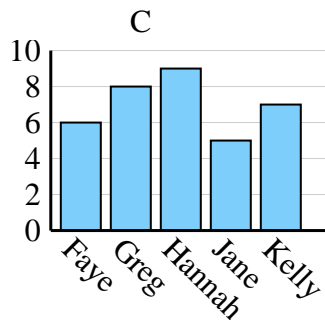
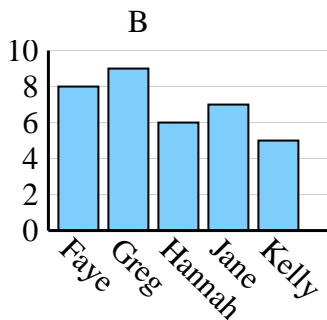
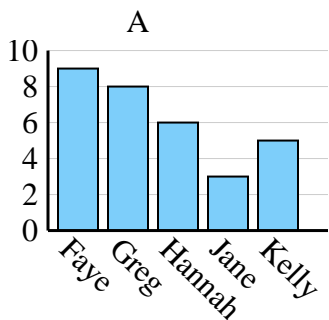




Determina cuál gráfica (A,B o C) representa mejor la información en la tabla.

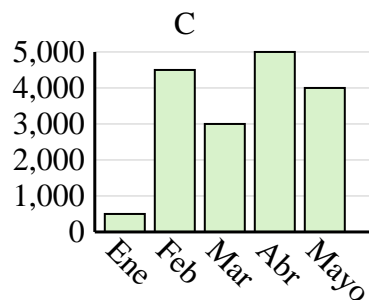
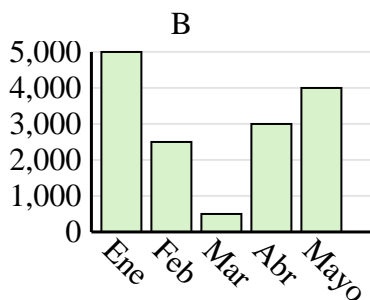
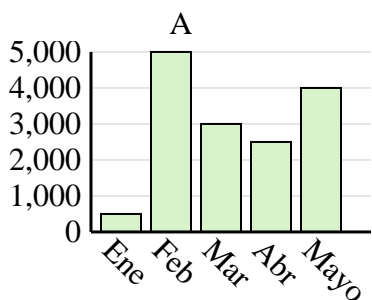
Respuestas

| Nombre | Faye | Greg | Hannah | Jane | Kelly |
|--------------------------|------|------|--------|------|-------|
| Estados en que ha vivido | 6 | 8 | 9 | 5 | 7 |

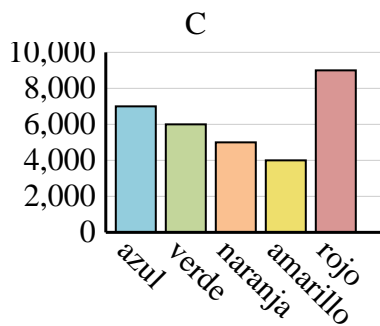
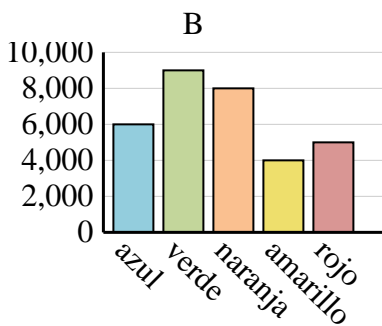
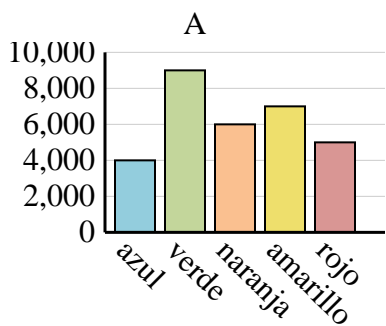


1. _____
2. _____
3. _____
4. _____

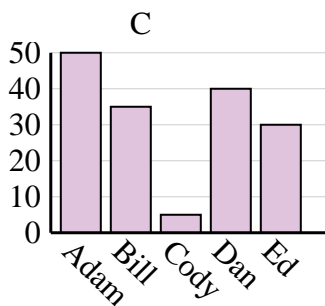
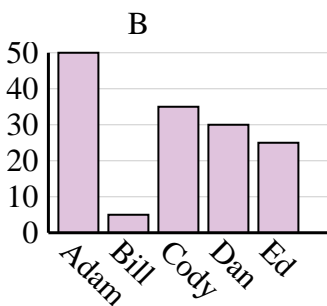
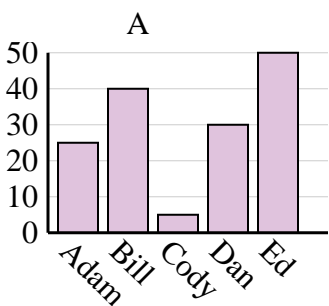
| Ventas | Ene | Feb | Mar | Abr | Mayo |
|--------|-----|-------|-------|-------|-------|
| Mes | 500 | 4,500 | 3,000 | 5,000 | 4,000 |



| Color favorito | azul | verde | naranja | amarillo | rojo |
|----------------|-------|-------|---------|----------|-------|
| Personas | 4,000 | 9,000 | 6,000 | 7,000 | 5,000 |



| Nombre | Adam | Bill | Cody | Dan | Ed |
|--------|------|------|------|-----|----|
| Puntos | 50 | 35 | 5 | 40 | 30 |

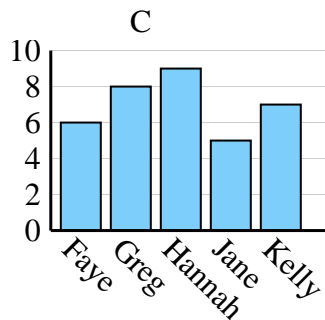
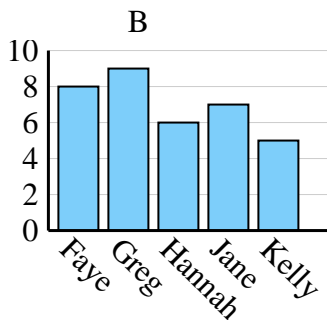
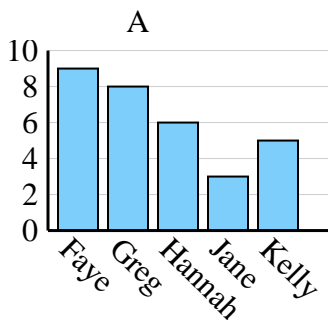




Determina cuál gráfica (A,B o C) representa mejor la información en la tabla.

Respuestas

| Nombre | Faye | Greg | Hannah | Jane | Kelly |
|--------------------------|------|------|--------|------|-------|
| Estados en que ha vivido | 6 | 8 | 9 | 5 | 7 |



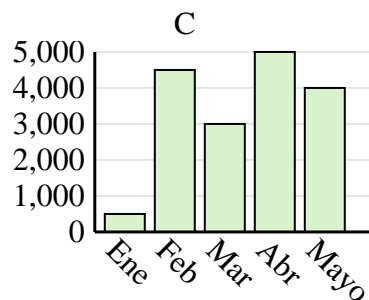
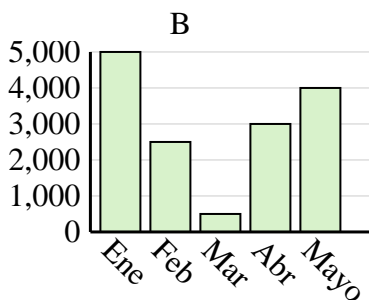
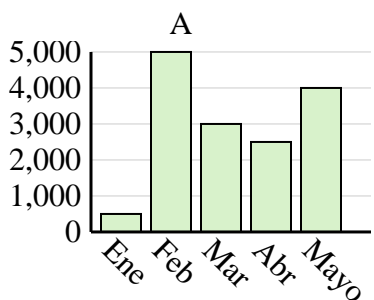
1. **C**

2. **C**

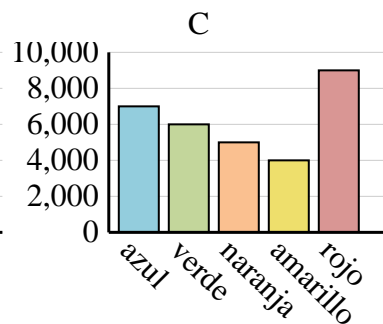
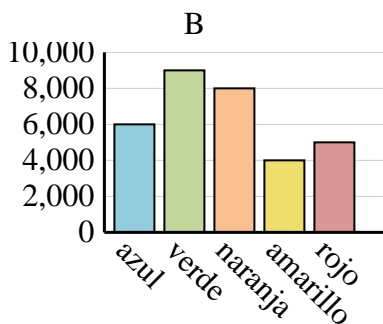
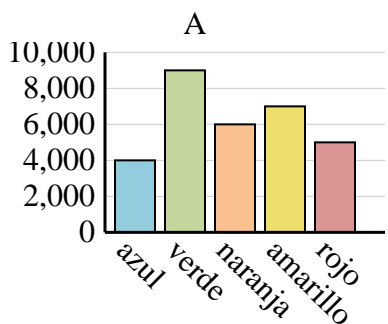
3. **A**

4. **C**

| Ventas | Ene | Feb | Mar | Abr | Mayo |
|--------|-----|-------|-------|-------|-------|
| Mes | 500 | 4,500 | 3,000 | 5,000 | 4,000 |



| Color favorito | azul | verde | naranja | amarillo | rojo |
|----------------|-------|-------|---------|----------|-------|
| Personas | 4,000 | 9,000 | 6,000 | 7,000 | 5,000 |



| Nombre | Adam | Bill | Cody | Dan | Ed |
|--------|------|------|------|-----|----|
| Puntos | 50 | 35 | 5 | 40 | 30 |

