



Determina cual gráfica pertenece a la tabla.

Respuestas

1)

Gente
7,000
10,000
9,000
5,000
1,000

2)

Gente
10,000
7,000
5,000
9,000
1,000

3)

Gente
9,000
10,000
5,000
1,000
7,000

4)

Gente
10,000
9,000
5,000
1,000
7,000

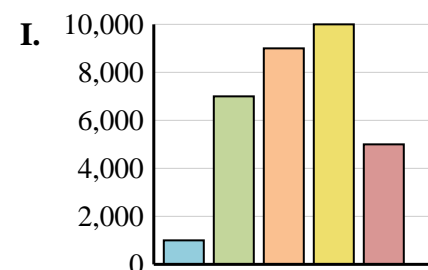
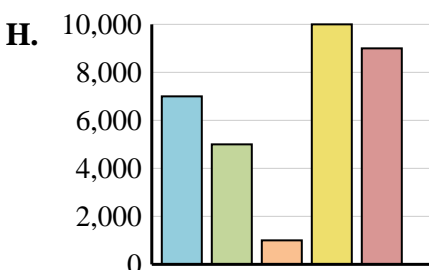
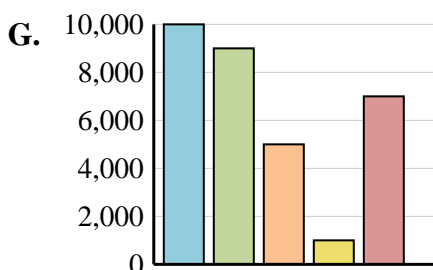
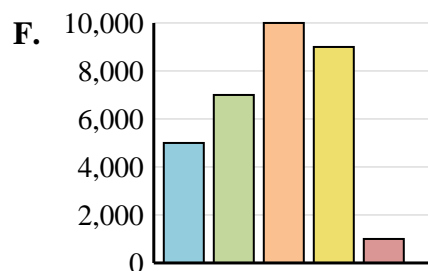
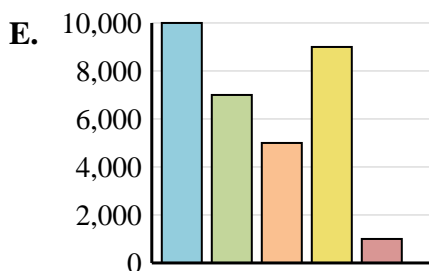
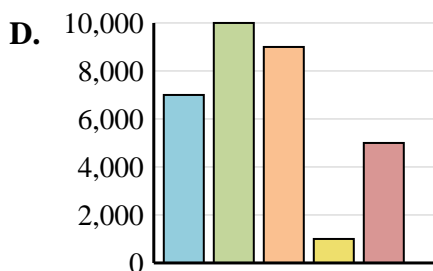
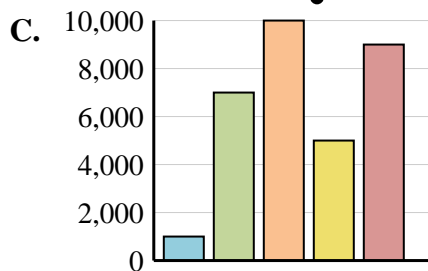
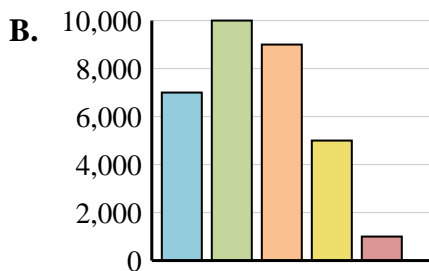
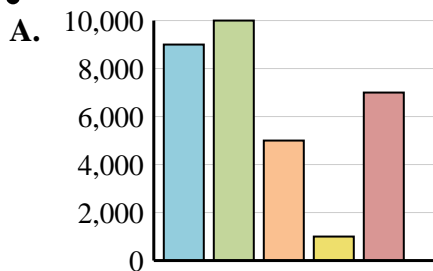
5)

Gente
7,000
10,000
9,000
1,000
5,000

6)

Gente
7,000
5,000
1,000
10,000
9,000

1. \_\_\_\_\_
2. \_\_\_\_\_
3. \_\_\_\_\_
4. \_\_\_\_\_
5. \_\_\_\_\_
6. \_\_\_\_\_





Determina cual gráfica pertenece a la tabla.

Respuestas

1)

	Gente
	7,000
	10,000
	9,000
	5,000
	1,000

2)

	Gente
	10,000
	7,000
	5,000
	9,000
	1,000

3)

	Gente
	9,000
	10,000
	5,000
	1,000
	7,000

4)

	Gente
	10,000
	9,000
	5,000
	1,000
	7,000

5)

	Gente
	7,000
	10,000
	9,000
	1,000
	7,000

6)

	Gente
	7,000
	5,000
	1,000
	10,000
	9,000

1.     **B**
2.     **E**
3.     **A**
4.     **G**
5.     **D**
6.     **H**

