


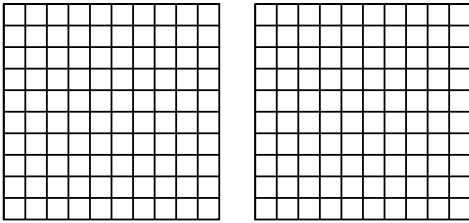


Usa el modelo visual para resolver cada problema.

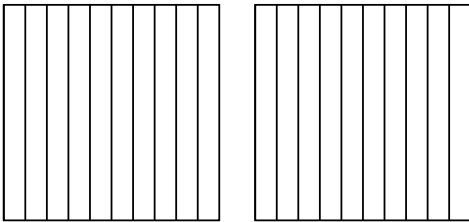
1) $3 \times 0.18 =$



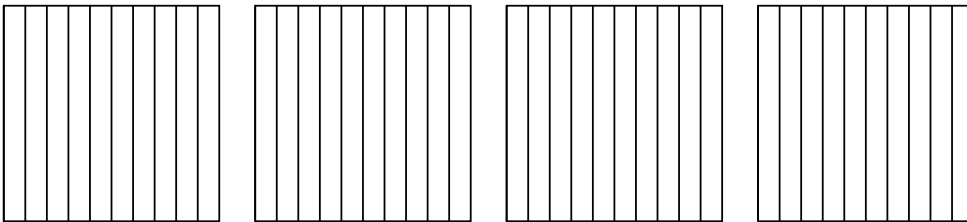
2) $2 \times 0.53 =$



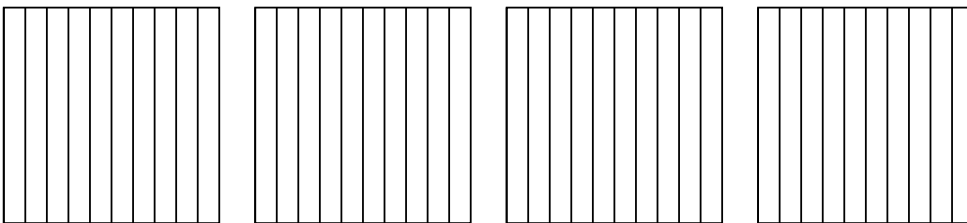
3) $2 \times 0.4 =$



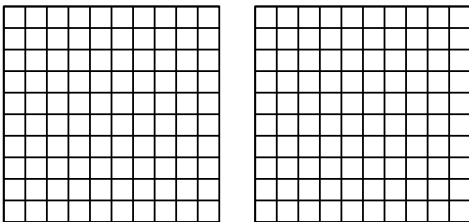
4) $4 \times 0.7 =$



5) $4 \times 0.8 =$



6) $2 \times 0.38 =$



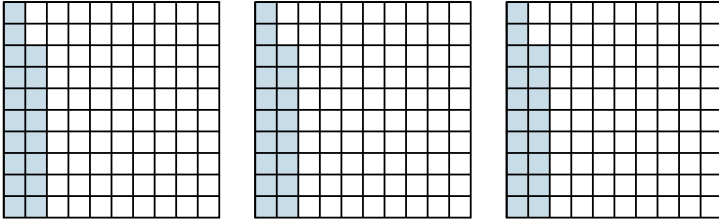
Respuestas

- 1. _____
- 2. _____
- 3. _____
- 4. _____
- 5. _____
- 6. _____

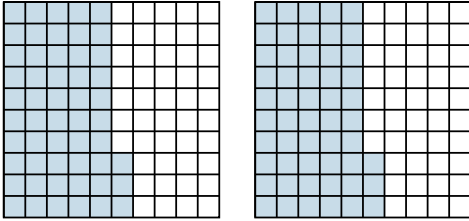


Usa el modelo visual para resolver cada problema.

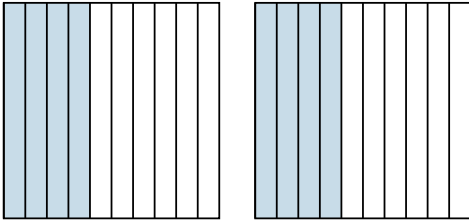
1) $3 \times 0.18 =$



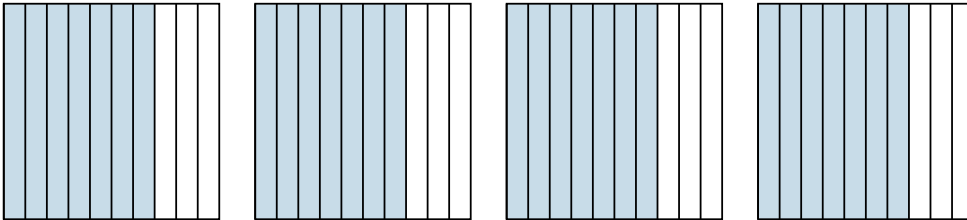
2) $2 \times 0.53 =$



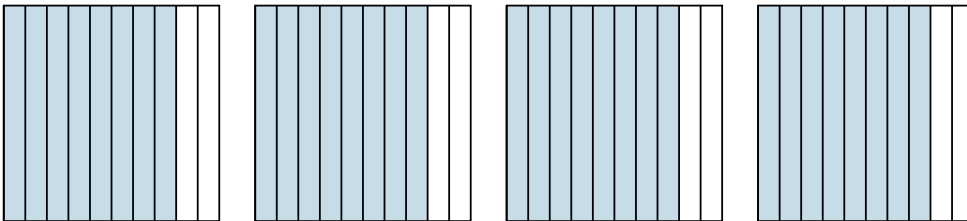
3) $2 \times 0.4 =$



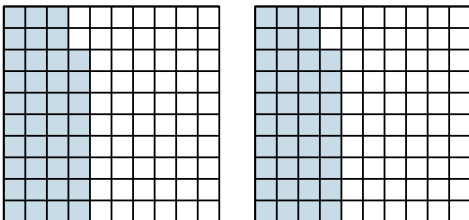
4) $4 \times 0.7 =$



5) $4 \times 0.8 =$



6) $2 \times 0.38 =$



Respuestas

1. $\frac{54}{100} = 0.54$

2. $\frac{106}{100} = 1.06$

3. $\frac{8}{10} = 0.8$

4. $\frac{28}{10} = 2.8$

5. $\frac{32}{10} = 3.2$

6. $\frac{76}{100} = 0.76$