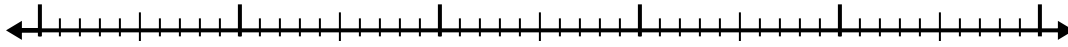


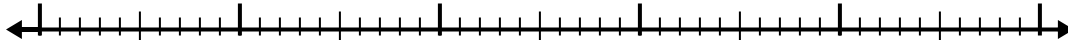


Usa la recta numérica para resolver cada problema.

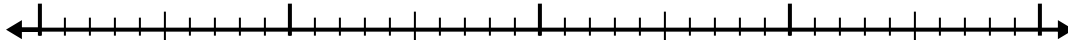
1) $8.6 - 3.8 =$



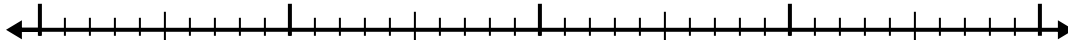
2) $8.8 - 2.7 =$



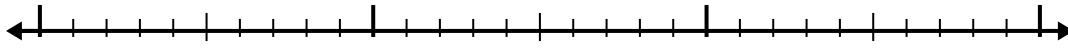
3) $6.8 - 1.3 =$



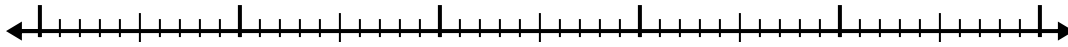
4) $5.2 - 2.4 =$



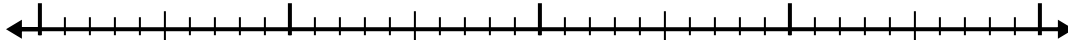
5) $2.7 - 1.3 =$




6) $7 - 2.4 =$



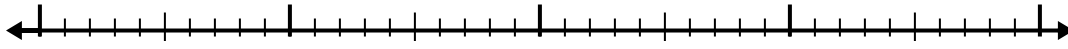
7) $10.5 - 2.5 =$



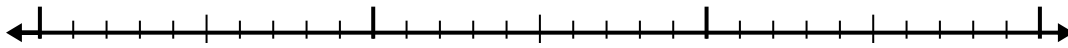
8) $12.3 - 3.8 =$



9) $4.2 - 2.7 =$



10) $3 - 1.3 =$



Respuestas

1. _____

2. _____

3. _____

4. _____

5. _____

6. _____

7. _____

8. _____

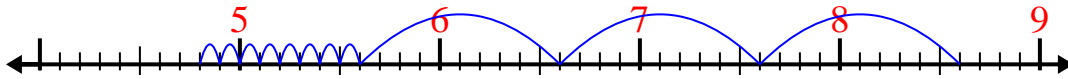
9. _____

10. _____

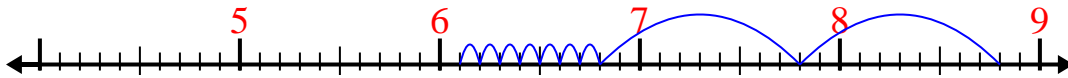


Usa la recta numérica para resolver cada problema.

1) $8.6 - 3.8 =$



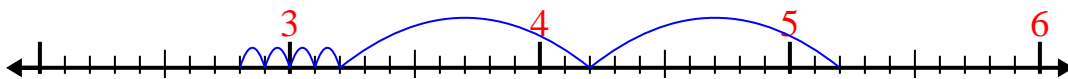
2) $8.8 - 2.7 =$



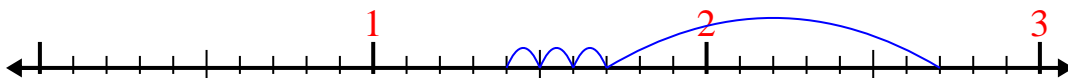
3) $6.8 - 1.3 =$



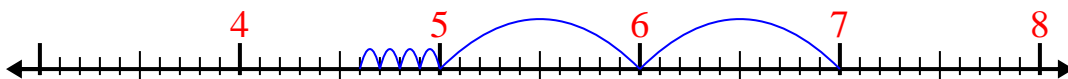
4) $5.2 - 2.4 =$



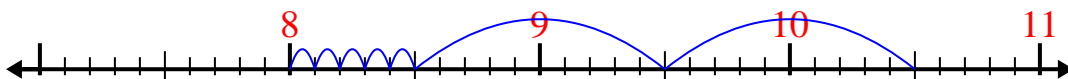
5) $2.7 - 1.3 =$



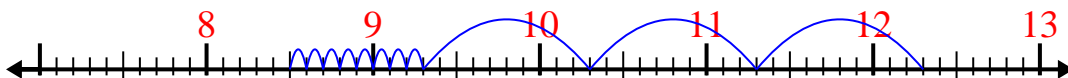
6) $7 - 2.4 =$



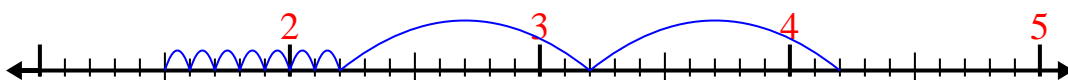
7) $10.5 - 2.5 =$



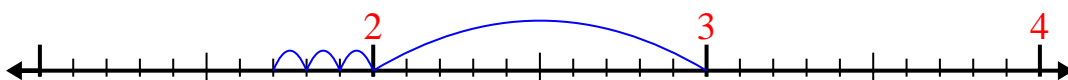
8) $12.3 - 3.8 =$



9) $4.2 - 2.7 =$



10) $3 - 1.3 =$



Respuestas

1. 4.8
2. 6.1
3. 5.5
4. 2.8
5. 1.4
6. 4.6
7. 8
8. 8.5
9. 1.5
10. 1.7