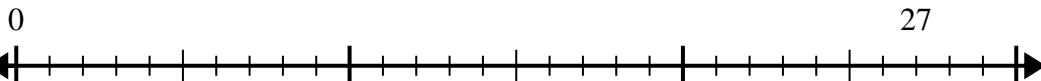




Usa la recta numérica para resolver el problema de división.

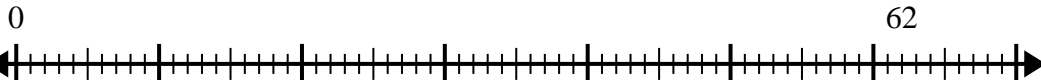
Respuestas

1) $27 \div 4 =$



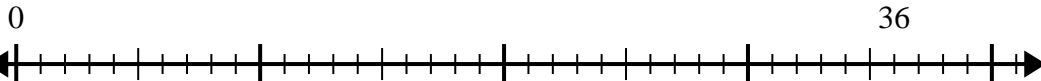
1. _____

2) $62 \div 8 =$



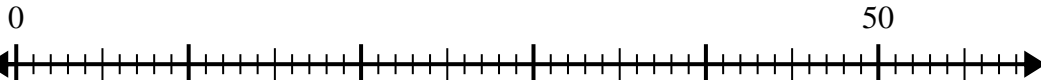
2. _____

3) $36 \div 5 =$



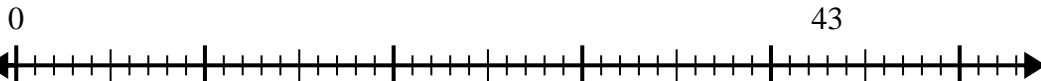
3. _____

4) $50 \div 8 =$



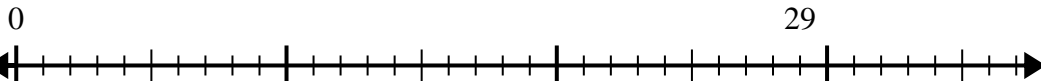
4. _____

5) $43 \div 6 =$



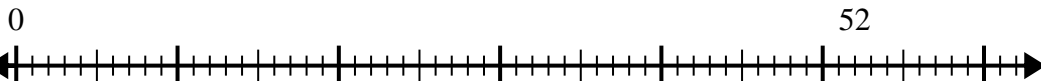
5. _____

6) $29 \div 6 =$



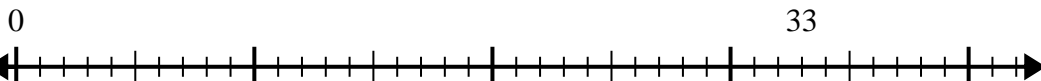
6. _____

7) $52 \div 6 =$



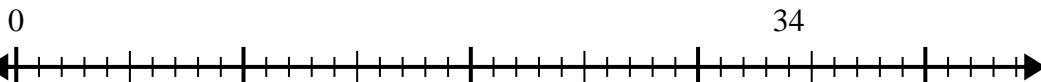
7. _____

8) $33 \div 5 =$



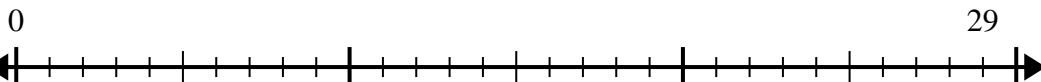
8. _____

9) $34 \div 7 =$



9. _____

10) $29 \div 4 =$

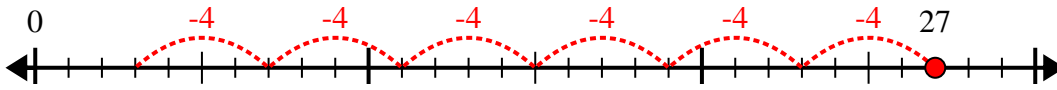


10. _____

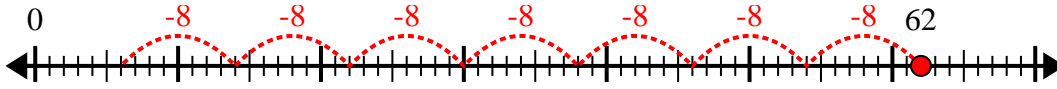


Usa la recta numérica para resolver el problema de división.

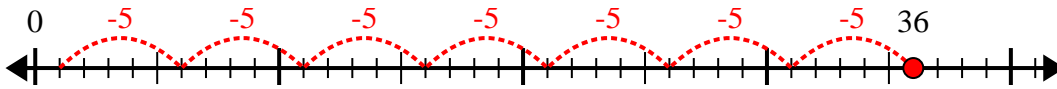
1) $27 \div 4 =$



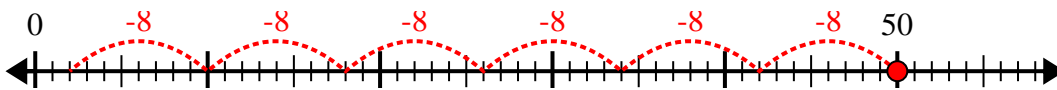
2) $62 \div 8 =$



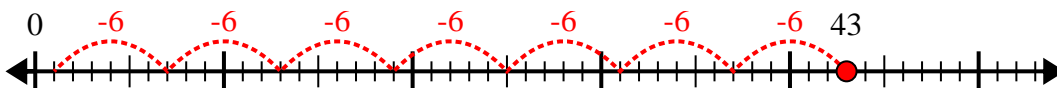
3) $36 \div 5 =$



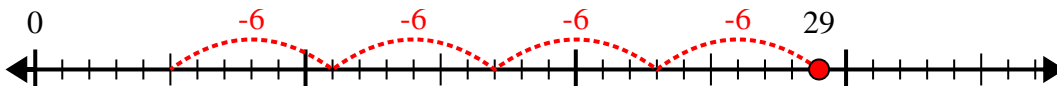
4) $50 \div 8 =$



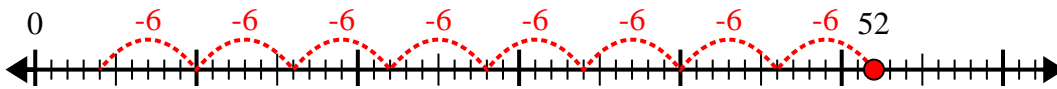
5) $43 \div 6 =$



6) $29 \div 6 =$



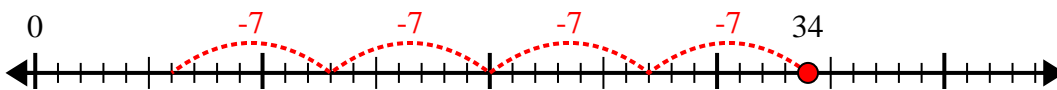
7) $52 \div 6 =$



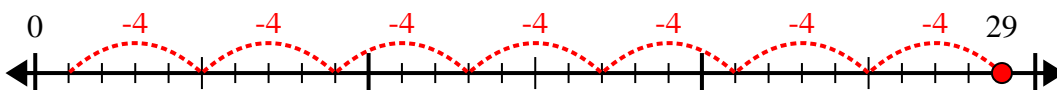
8) $33 \div 5 =$



9) $34 \div 7 =$



10) $29 \div 4 =$



Respuestas

1. 6r3

2. 7r6

3. 7r1

4. 6r2

5. 7r1

6. 4r5

7. 8r4

8. 6r3

9. 4r6

10. 7r1