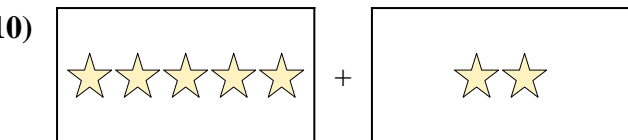
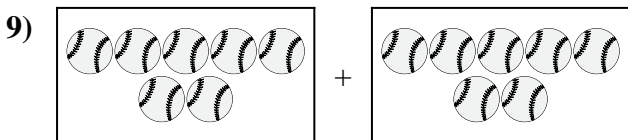
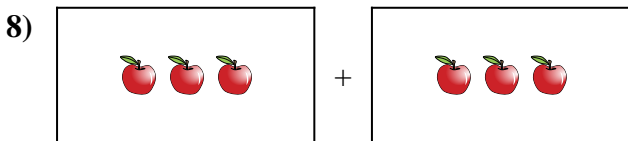
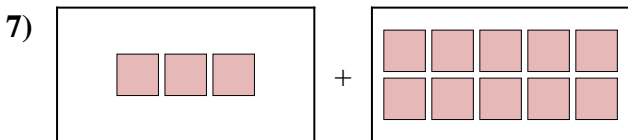
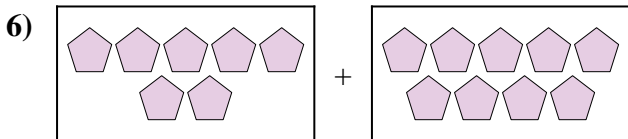
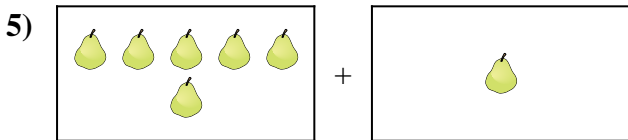
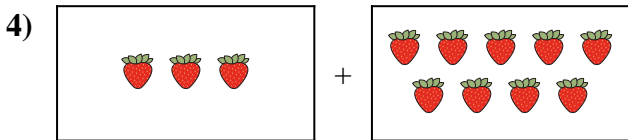
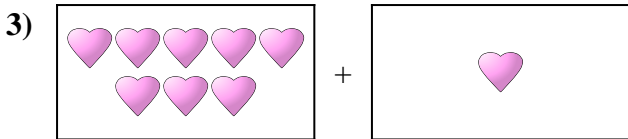
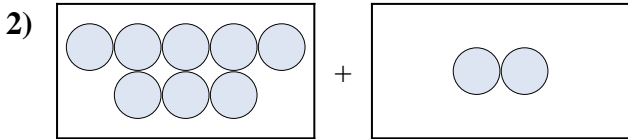





Expresar el problema visual como una ecuación con respuesta.

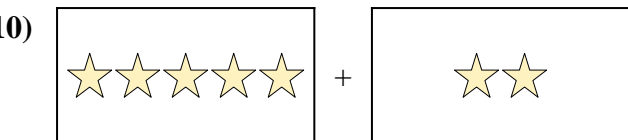
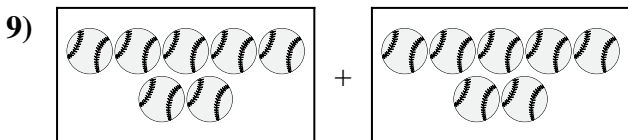
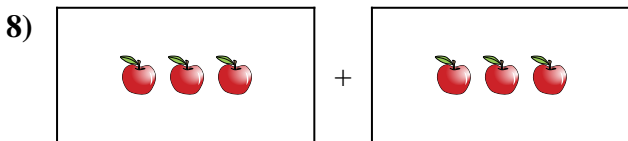
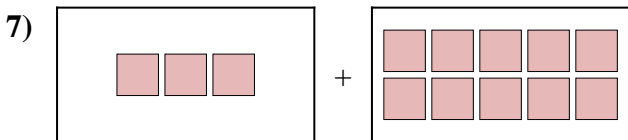
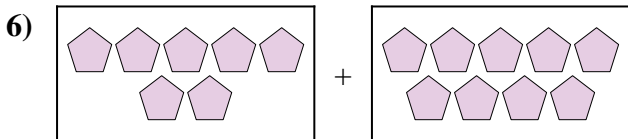
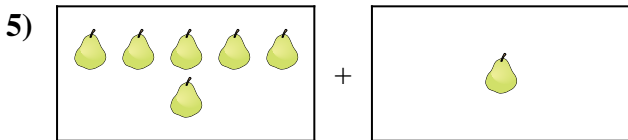
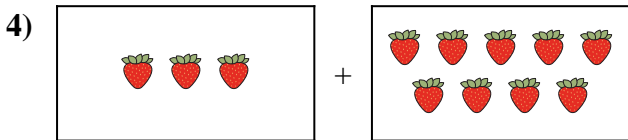
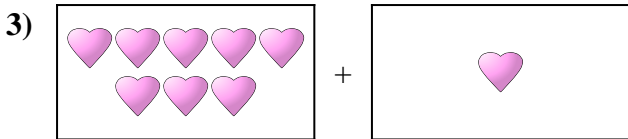
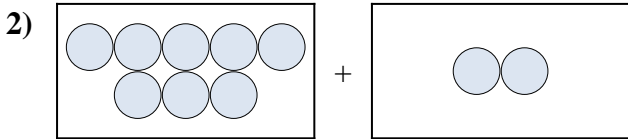

**Respuestas**



1. \_\_\_\_\_
2. \_\_\_\_\_
3. \_\_\_\_\_
4. \_\_\_\_\_
5. \_\_\_\_\_
6. \_\_\_\_\_
7. \_\_\_\_\_
8. \_\_\_\_\_
9. \_\_\_\_\_
10. \_\_\_\_\_



Expresar el problema visual como una ecuación con respuesta.



**Respuestas**

1. **9 + 1 = 10**

2. **8 + 2 = 10**

3. **8 + 1 = 9**

4. **3 + 9 = 12**

5. **6 + 1 = 7**

6. **7 + 9 = 16**

7. **3 + 10 = 13**

8. **3 + 3 = 6**

9. **7 + 7 = 14**

10. **5 + 2 = 7**