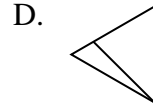
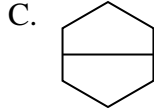
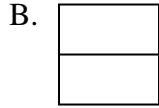




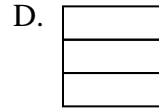
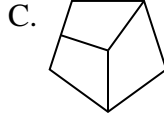
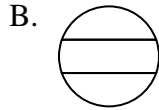
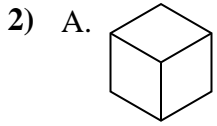
Determina cuál opción(es) muestran la forma dividida para que cada pieza tenga un área igual. Si ninguna, escriba 'ninguna'.

**Respuestas**



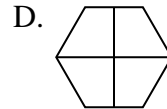
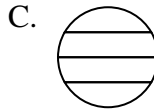

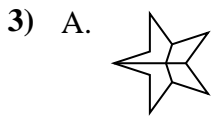
1. \_\_\_\_\_

2. \_\_\_\_\_



3. \_\_\_\_\_

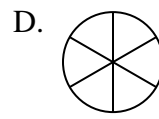
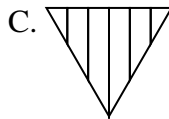
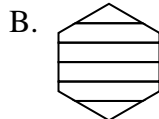
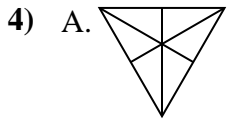
4. \_\_\_\_\_



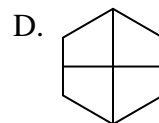
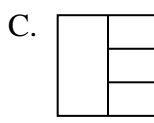
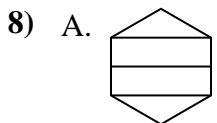
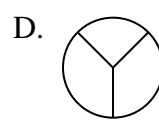
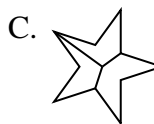
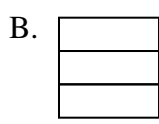
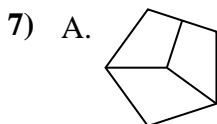
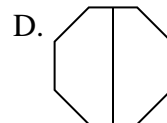
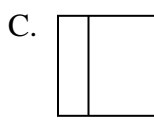
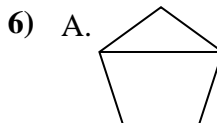
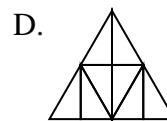
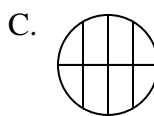
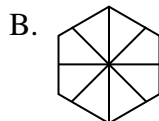
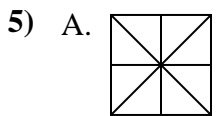
5. \_\_\_\_\_

6. \_\_\_\_\_

7. \_\_\_\_\_

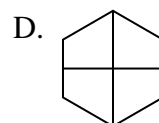
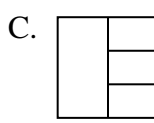
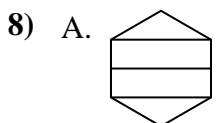
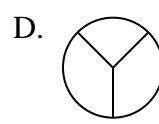
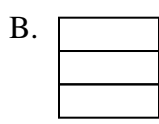
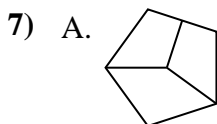
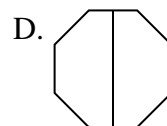
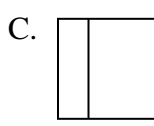

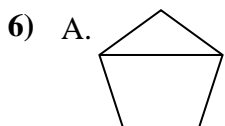
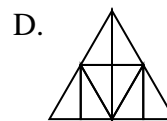
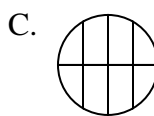
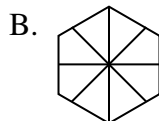
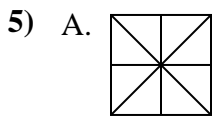
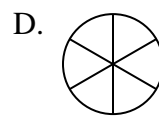
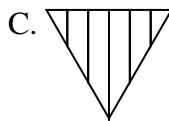
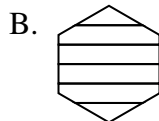
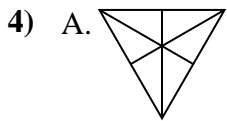
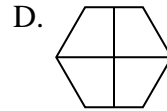
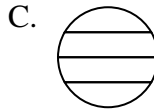
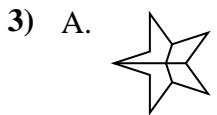
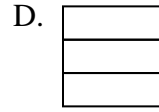
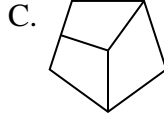
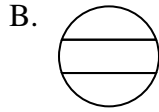
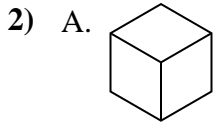
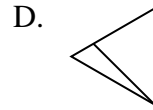
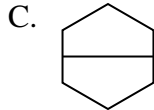
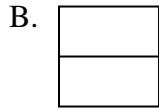


8. \_\_\_\_\_





Determina cuál opción(es) muestran la forma dividida para que cada pieza tenga un área igual. Si ninguna, escriba 'ninguna'.



**Respuestas**

1. **B,C**

2. **A,D**

3. **B,D**

4. **A,D**

5. **A,D**

6. **B,D**

7. **B**

8. **D**