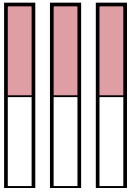




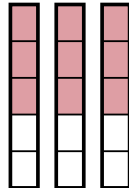


Usa los modelos visuales para resolver.

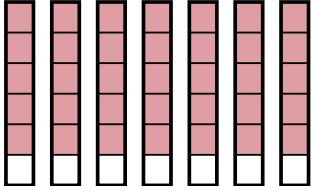
1)  $\frac{1}{2} \times 3 =$



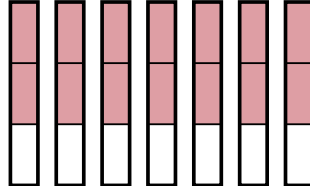
2)  $\frac{3}{5} \times 3 =$



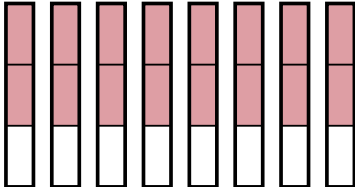
3)  $\frac{5}{6} \times 7 =$



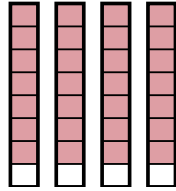
4)  $\frac{2}{3} \times 7 =$



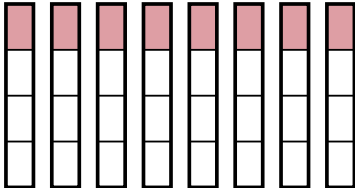
5)  $\frac{2}{3} \times 8 =$



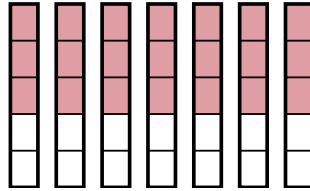
6)  $\frac{7}{8} \times 4 =$



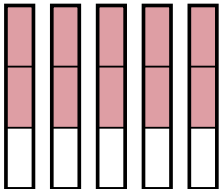
7)  $\frac{1}{4} \times 8 =$



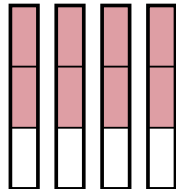
8)  $\frac{3}{5} \times 7 =$



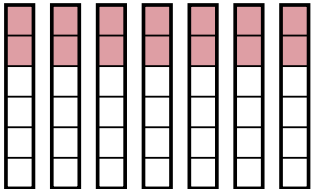
9)  $\frac{2}{3} \times 5 =$



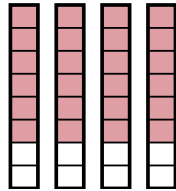
10)  $\frac{2}{3} \times 4 =$



11)  $\frac{2}{6} \times 7 =$



12)  $\frac{6}{8} \times 4 =$



**Respuestas**

1.  $\frac{3}{2}$

2.  $\frac{9}{5}$

3.  $\frac{35}{6}$

4.  $\frac{14}{3}$

5.  $\frac{16}{3}$

6.  $\frac{28}{8}$

7.  $\frac{8}{4}$

8.  $\frac{21}{5}$

9.  $\frac{10}{3}$

10.  $\frac{8}{3}$

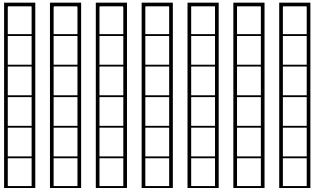
11.  $\frac{14}{6}$

12.  $\frac{24}{8}$

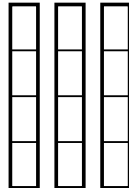


Usa los modelos visuales para resolver.

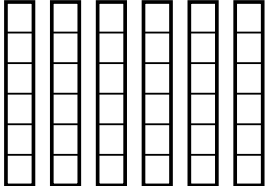
1)  $\frac{4}{6} \times 7 =$



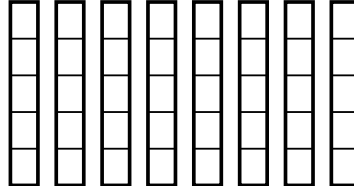
2)  $\frac{1}{4} \times 3 =$



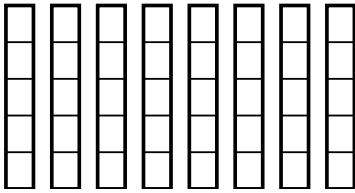
3)  $\frac{4}{6} \times 6 =$



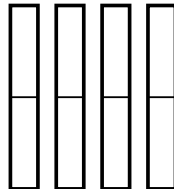
4)  $\frac{1}{5} \times 8 =$



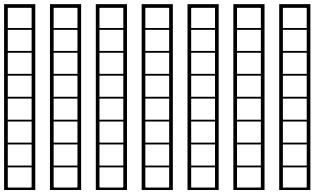
5)  $\frac{4}{5} \times 8 =$



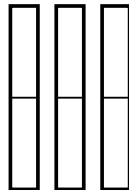
6)  $\frac{1}{2} \times 4 =$



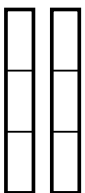
7)  $\frac{1}{8} \times 7 =$



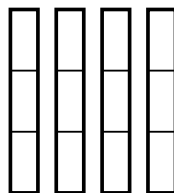
8)  $\frac{1}{2} \times 3 =$



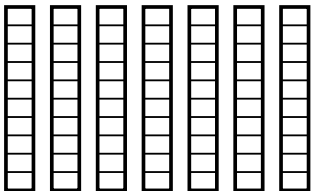
9)  $\frac{1}{3} \times 2 =$



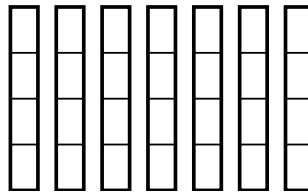
10)  $\frac{2}{3} \times 4 =$



11)  $\frac{3}{10} \times 7 =$



12)  $\frac{2}{4} \times 7 =$



**Respuestas**

1. \_\_\_\_\_

2. \_\_\_\_\_

3. \_\_\_\_\_

4. \_\_\_\_\_

5. \_\_\_\_\_

6. \_\_\_\_\_

7. \_\_\_\_\_

8. \_\_\_\_\_

9. \_\_\_\_\_

10. \_\_\_\_\_

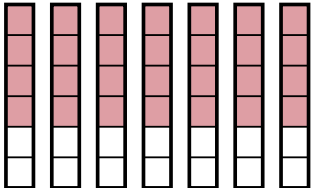
11. \_\_\_\_\_

12. \_\_\_\_\_

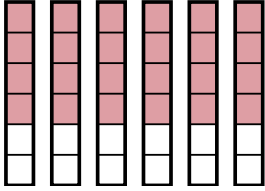


Usa los modelos visuales para resolver.

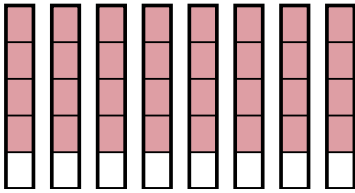
1)  $\frac{4}{6} \times 7 =$



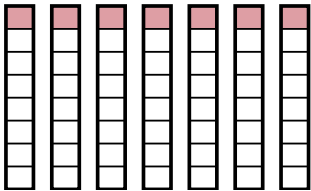
3)  $\frac{4}{6} \times 6 =$



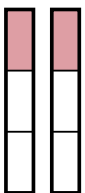
5)  $\frac{4}{5} \times 8 =$



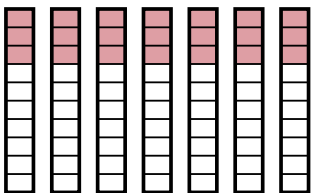
7)  $\frac{1}{8} \times 7 =$



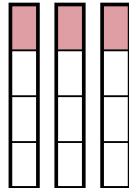
9)  $\frac{1}{3} \times 2 =$



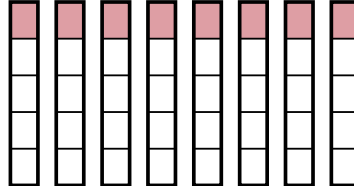
11)  $\frac{3}{10} \times 7 =$



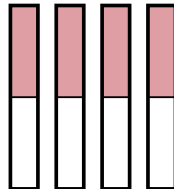
2)  $\frac{1}{4} \times 3 =$



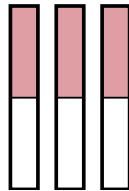
4)  $\frac{1}{5} \times 8 =$



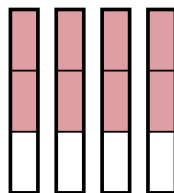
6)  $\frac{1}{2} \times 4 =$



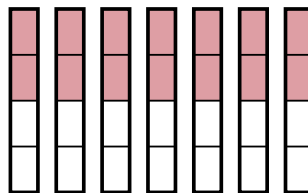
8)  $\frac{1}{2} \times 3 =$



10)  $\frac{2}{3} \times 4 =$



12)  $\frac{2}{4} \times 7 =$



**Respuestas**

1.  $\frac{28}{6}$

2.  $\frac{3}{4}$

3.  $\frac{24}{6}$

4.  $\frac{8}{5}$

5.  $\frac{32}{5}$

6.  $\frac{4}{2}$

7.  $\frac{7}{8}$

8.  $\frac{3}{2}$

9.  $\frac{2}{3}$

10.  $\frac{8}{3}$

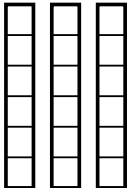
11.  $\frac{21}{10}$

12.  $\frac{14}{4}$

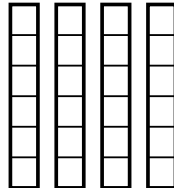


Usa los modelos visuales para resolver.

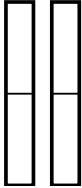
1)  $\frac{5}{6} \times 3 =$



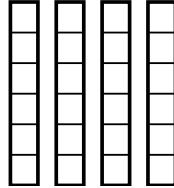
2)  $\frac{5}{6} \times 4 =$



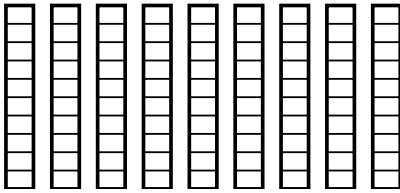
3)  $\frac{1}{2} \times 2 =$



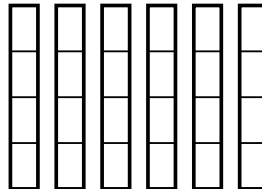
4)  $\frac{4}{6} \times 4 =$



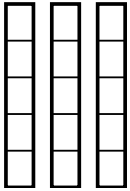
5)  $\frac{7}{10} \times 9 =$



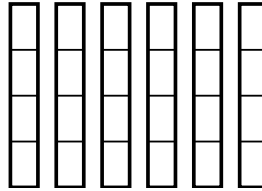
6)  $\frac{2}{4} \times 6 =$



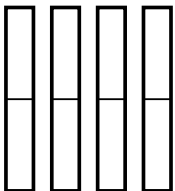
7)  $\frac{2}{5} \times 3 =$



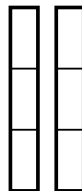
8)  $\frac{3}{4} \times 6 =$



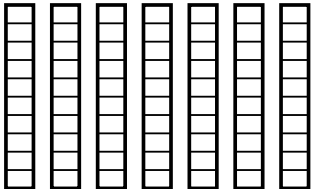
9)  $\frac{1}{2} \times 4 =$



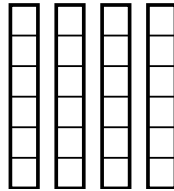
10)  $\frac{2}{3} \times 2 =$



11)  $\frac{8}{10} \times 7 =$



12)  $\frac{3}{6} \times 4 =$



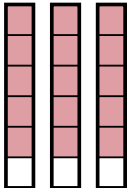
**Respuestas**

1. \_\_\_\_\_
2. \_\_\_\_\_
3. \_\_\_\_\_
4. \_\_\_\_\_
5. \_\_\_\_\_
6. \_\_\_\_\_
7. \_\_\_\_\_
8. \_\_\_\_\_
9. \_\_\_\_\_
10. \_\_\_\_\_
11. \_\_\_\_\_
12. \_\_\_\_\_

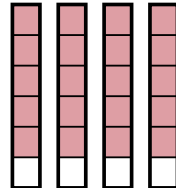


Usa los modelos visuales para resolver.

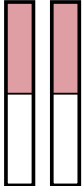
1)  $\frac{5}{6} \times 3 =$



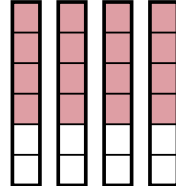
2)  $\frac{5}{6} \times 4 =$



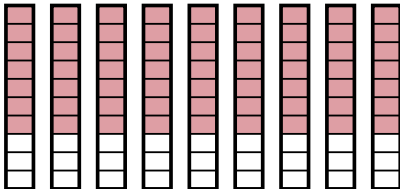
3)  $\frac{1}{2} \times 2 =$



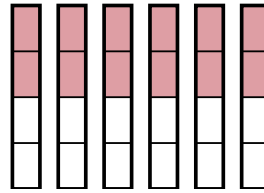
4)  $\frac{4}{6} \times 4 =$



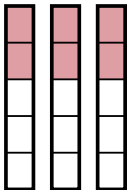
5)  $\frac{7}{10} \times 9 =$



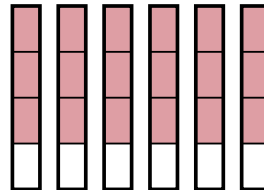
6)  $\frac{2}{4} \times 6 =$



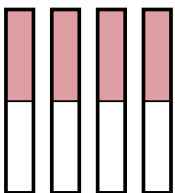
7)  $\frac{2}{5} \times 3 =$



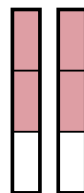
8)  $\frac{3}{4} \times 6 =$



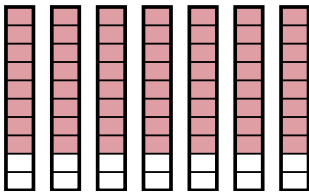
9)  $\frac{1}{2} \times 4 =$



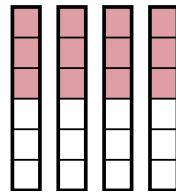
10)  $\frac{2}{3} \times 2 =$



11)  $\frac{8}{10} \times 7 =$



12)  $\frac{3}{6} \times 4 =$



**Respuestas**

1.  $\frac{15}{6}$

2.  $\frac{20}{6}$

3.  $\frac{2}{2}$

4.  $\frac{16}{6}$

5.  $\frac{63}{10}$

6.  $\frac{12}{4}$

7.  $\frac{6}{5}$

8.  $\frac{18}{4}$

9.  $\frac{4}{2}$

10.  $\frac{4}{3}$

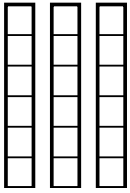
11.  $\frac{56}{10}$

12.  $\frac{12}{6}$

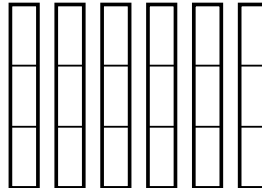


Usa los modelos visuales para resolver.

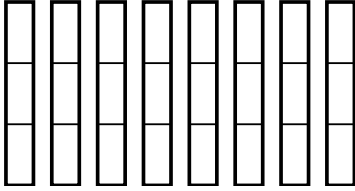
1)  $\frac{5}{6} \times 3 =$



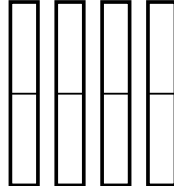
2)  $\frac{1}{3} \times 6 =$



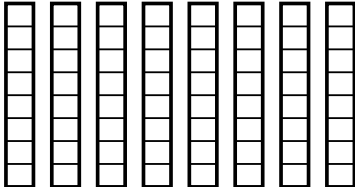
3)  $\frac{2}{3} \times 8 =$



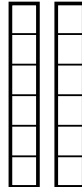
4)  $\frac{1}{2} \times 4 =$



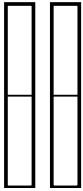
5)  $\frac{4}{8} \times 8 =$



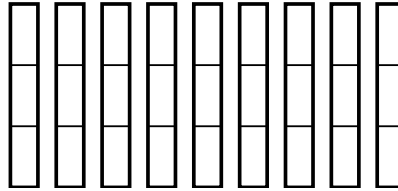
6)  $\frac{5}{6} \times 2 =$



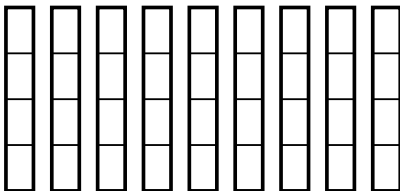
7)  $\frac{1}{2} \times 2 =$



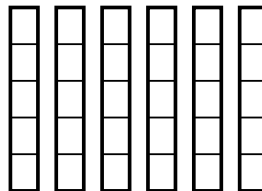
8)  $\frac{2}{3} \times 9 =$



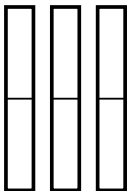
9)  $\frac{1}{4} \times 9 =$



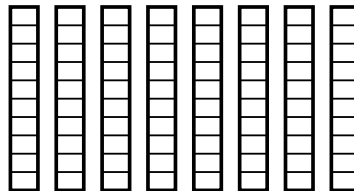
10)  $\frac{4}{5} \times 6 =$



11)  $\frac{1}{2} \times 3 =$



12)  $\frac{3}{10} \times 8 =$



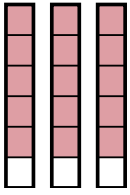
**Respuestas**

1. \_\_\_\_\_
2. \_\_\_\_\_
3. \_\_\_\_\_
4. \_\_\_\_\_
5. \_\_\_\_\_
6. \_\_\_\_\_
7. \_\_\_\_\_
8. \_\_\_\_\_
9. \_\_\_\_\_
10. \_\_\_\_\_
11. \_\_\_\_\_
12. \_\_\_\_\_

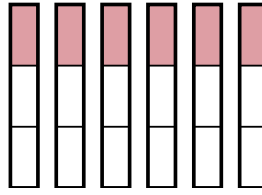


Usa los modelos visuales para resolver.

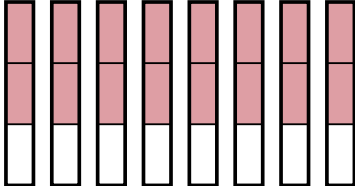
1)  $\frac{5}{6} \times 3 =$



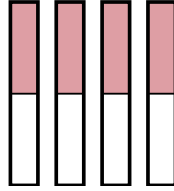
2)  $\frac{1}{3} \times 6 =$



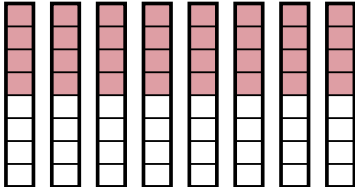
3)  $\frac{2}{3} \times 8 =$



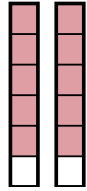
4)  $\frac{1}{2} \times 4 =$



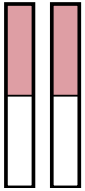
5)  $\frac{4}{8} \times 8 =$



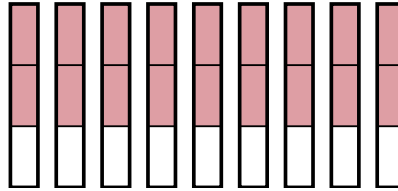
6)  $\frac{5}{6} \times 2 =$



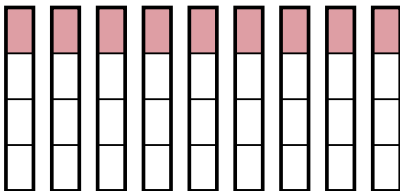
7)  $\frac{1}{2} \times 2 =$



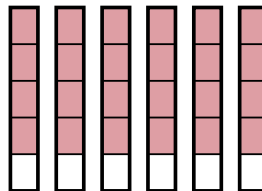
8)  $\frac{2}{3} \times 9 =$



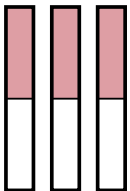
9)  $\frac{1}{4} \times 9 =$



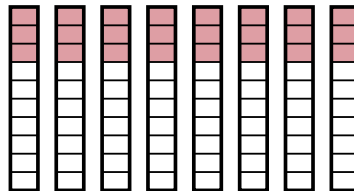
10)  $\frac{4}{5} \times 6 =$



11)  $\frac{1}{2} \times 3 =$



12)  $\frac{3}{10} \times 8 =$



**Respuestas**

1.  $\frac{15}{6}$

2.  $\frac{6}{3}$

3.  $\frac{16}{3}$

4.  $\frac{4}{2}$

5.  $\frac{32}{8}$

6.  $\frac{10}{6}$

7.  $\frac{2}{2}$

8.  $\frac{18}{3}$

9.  $\frac{9}{4}$

10.  $\frac{24}{5}$

11.  $\frac{3}{2}$

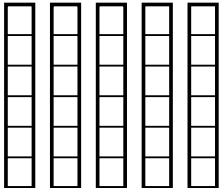
12.  $\frac{24}{10}$



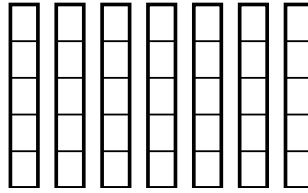


Usa los modelos visuales para resolver.

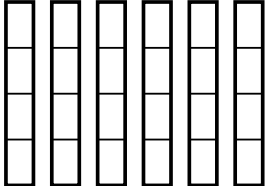
1)  $\frac{2}{6} \times 5 =$



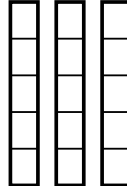
2)  $\frac{3}{5} \times 7 =$



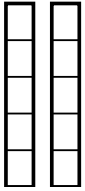
3)  $\frac{1}{4} \times 6 =$



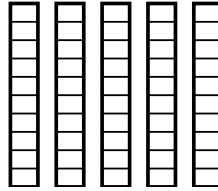
4)  $\frac{3}{5} \times 3 =$



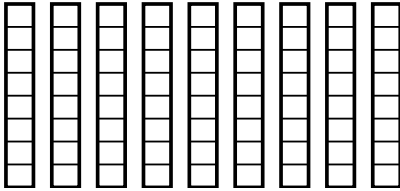
5)  $\frac{2}{5} \times 2 =$



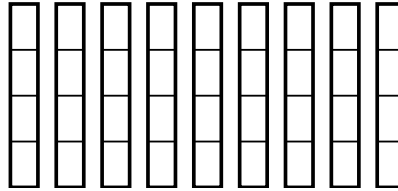
6)  $\frac{3}{10} \times 5 =$



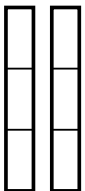
7)  $\frac{2}{8} \times 9 =$



8)  $\frac{3}{4} \times 9 =$



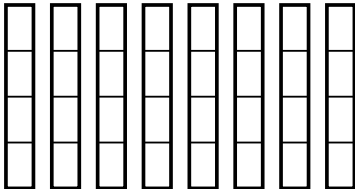
9)  $\frac{2}{3} \times 2 =$



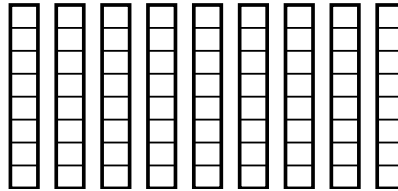
10)  $\frac{1}{4} \times 2 =$



11)  $\frac{1}{4} \times 8 =$



12)  $\frac{6}{8} \times 9 =$



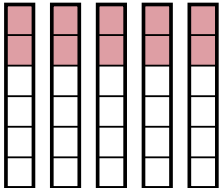
**Respuestas**

1. \_\_\_\_\_
2. \_\_\_\_\_
3. \_\_\_\_\_
4. \_\_\_\_\_
5. \_\_\_\_\_
6. \_\_\_\_\_
7. \_\_\_\_\_
8. \_\_\_\_\_
9. \_\_\_\_\_
10. \_\_\_\_\_
11. \_\_\_\_\_
12. \_\_\_\_\_

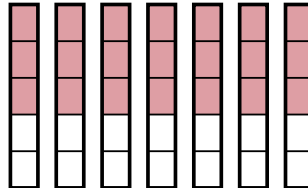


Usa los modelos visuales para resolver.

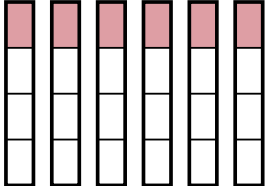
1)  $\frac{2}{6} \times 5 =$



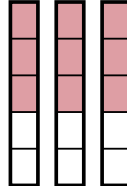
2)  $\frac{3}{5} \times 7 =$



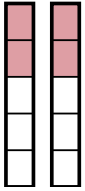
3)  $\frac{1}{4} \times 6 =$



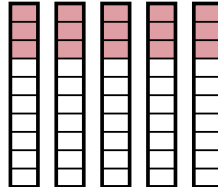
4)  $\frac{3}{5} \times 3 =$



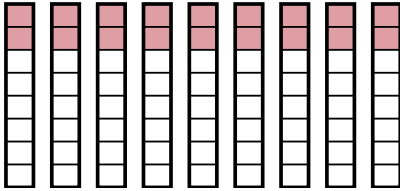
5)  $\frac{2}{5} \times 2 =$



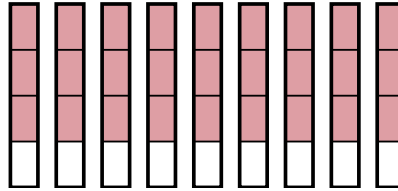
6)  $\frac{3}{10} \times 5 =$



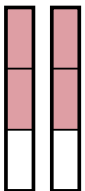
7)  $\frac{2}{8} \times 9 =$



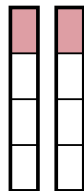
8)  $\frac{3}{4} \times 9 =$



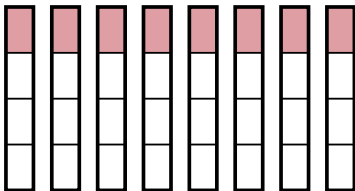
9)  $\frac{2}{3} \times 2 =$



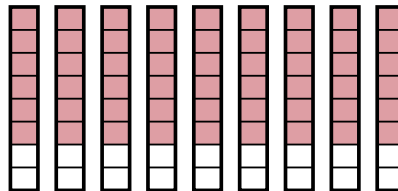
10)  $\frac{1}{4} \times 2 =$



11)  $\frac{1}{4} \times 8 =$



12)  $\frac{6}{8} \times 9 =$



**Respuestas**

1.  $\frac{10}{6}$

2.  $\frac{21}{5}$

3.  $\frac{6}{4}$

4.  $\frac{9}{5}$

5.  $\frac{4}{5}$

6.  $\frac{15}{10}$

7.  $\frac{18}{8}$

8.  $\frac{27}{4}$

9.  $\frac{4}{3}$

10.  $\frac{2}{4}$

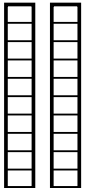
11.  $\frac{8}{4}$

12.  $\frac{54}{8}$

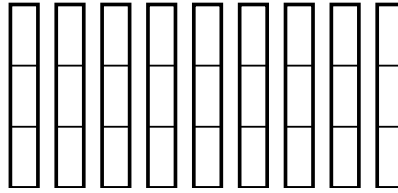


Usa los modelos visuales para resolver.

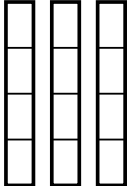
1)  $\frac{7}{10} \times 2 =$



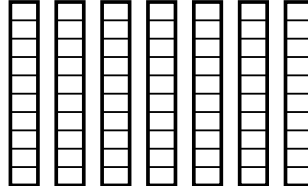
2)  $\frac{2}{3} \times 9 =$



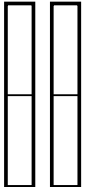
3)  $\frac{2}{4} \times 3 =$



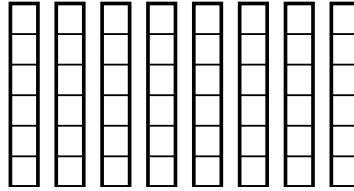
4)  $\frac{7}{10} \times 7 =$



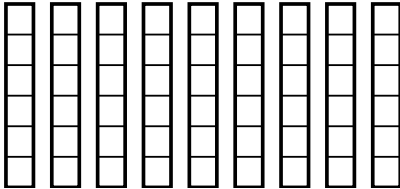
5)  $\frac{1}{2} \times 2 =$



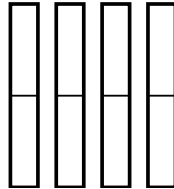
6)  $\frac{2}{6} \times 8 =$



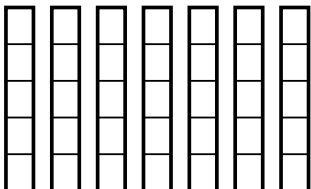
7)  $\frac{3}{6} \times 9 =$



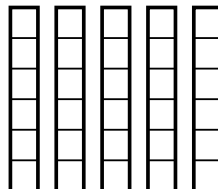
8)  $\frac{1}{2} \times 4 =$



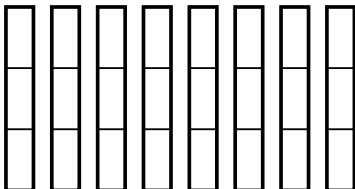
9)  $\frac{1}{5} \times 7 =$



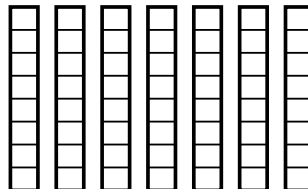
10)  $\frac{3}{6} \times 5 =$



11)  $\frac{2}{3} \times 8 =$



12)  $\frac{6}{8} \times 7 =$



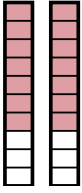
**Respuestas**

1. \_\_\_\_\_
2. \_\_\_\_\_
3. \_\_\_\_\_
4. \_\_\_\_\_
5. \_\_\_\_\_
6. \_\_\_\_\_
7. \_\_\_\_\_
8. \_\_\_\_\_
9. \_\_\_\_\_
10. \_\_\_\_\_
11. \_\_\_\_\_
12. \_\_\_\_\_

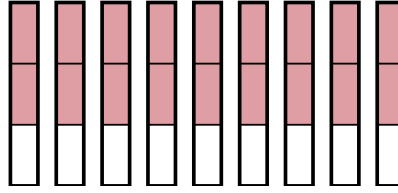


Usa los modelos visuales para resolver.

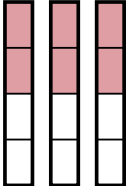
1)  $\frac{7}{10} \times 2 =$



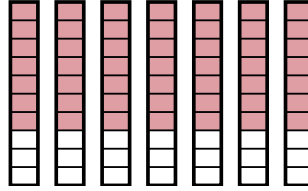
2)  $\frac{2}{3} \times 9 =$



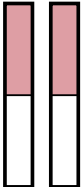
3)  $\frac{2}{4} \times 3 =$



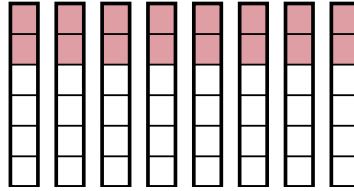
4)  $\frac{7}{10} \times 7 =$



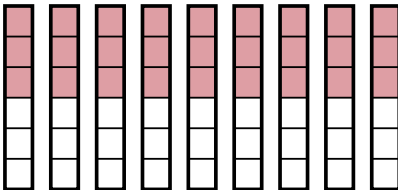
5)  $\frac{1}{2} \times 2 =$



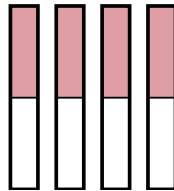
6)  $\frac{2}{6} \times 8 =$



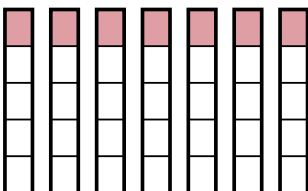
7)  $\frac{3}{6} \times 9 =$



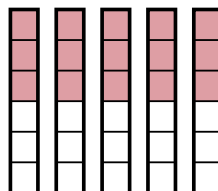
8)  $\frac{1}{2} \times 4 =$



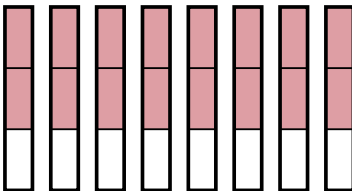
9)  $\frac{1}{5} \times 7 =$



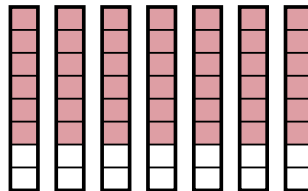
10)  $\frac{3}{6} \times 5 =$



11)  $\frac{2}{3} \times 8 =$



12)  $\frac{6}{8} \times 7 =$



**Respuestas**

1.  $\frac{14}{10}$

2.  $\frac{18}{3}$

3.  $\frac{6}{4}$

4.  $\frac{49}{10}$

5.  $\frac{2}{2}$

6.  $\frac{16}{6}$

7.  $\frac{27}{6}$

8.  $\frac{4}{2}$

9.  $\frac{7}{5}$

10.  $\frac{15}{6}$

11.  $\frac{16}{3}$

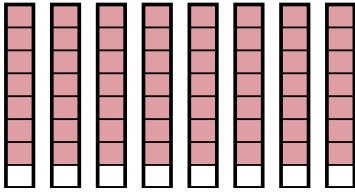
12.  $\frac{42}{8}$



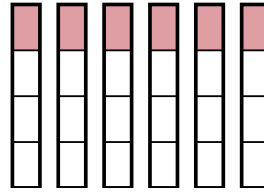


Usa los modelos visuales para resolver.

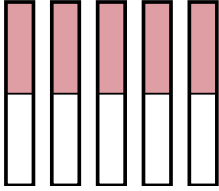
1)  $\frac{7}{8} \times 8 =$



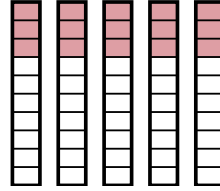
2)  $\frac{1}{4} \times 6 =$



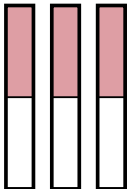
3)  $\frac{1}{2} \times 5 =$



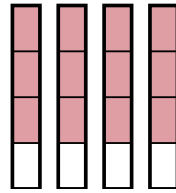
4)  $\frac{3}{10} \times 5 =$



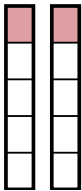
5)  $\frac{1}{2} \times 3 =$



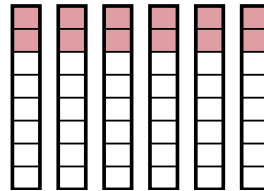
6)  $\frac{3}{4} \times 4 =$



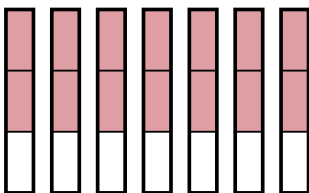
7)  $\frac{1}{5} \times 2 =$



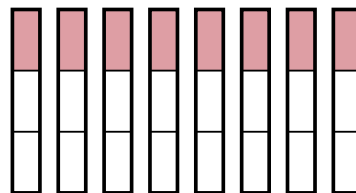
8)  $\frac{2}{8} \times 6 =$



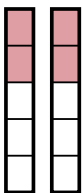
9)  $\frac{2}{3} \times 7 =$



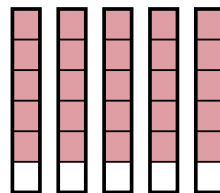
10)  $\frac{1}{3} \times 8 =$



11)  $\frac{2}{5} \times 2 =$



12)  $\frac{5}{6} \times 5 =$



**Respuestas**

1.  $\frac{56}{8}$

2.  $\frac{6}{4}$

3.  $\frac{5}{2}$

4.  $\frac{15}{10}$

5.  $\frac{3}{2}$

6.  $\frac{12}{4}$

7.  $\frac{2}{5}$

8.  $\frac{12}{8}$

9.  $\frac{14}{3}$

10.  $\frac{8}{3}$

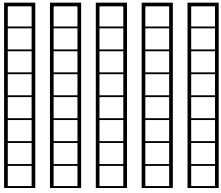
11.  $\frac{4}{5}$

12.  $\frac{25}{6}$

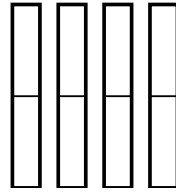


Usa los modelos visuales para resolver.

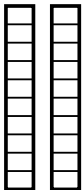
1)  $\frac{1}{8} \times 5 =$



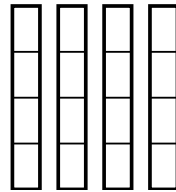
2)  $\frac{1}{2} \times 4 =$



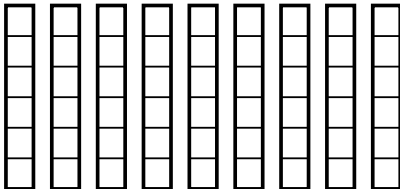
3)  $\frac{1}{10} \times 2 =$



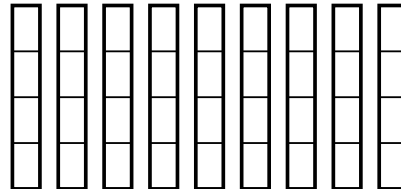
4)  $\frac{3}{4} \times 4 =$



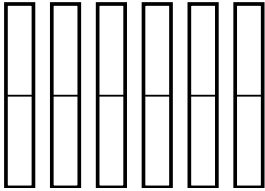
5)  $\frac{1}{6} \times 9 =$



6)  $\frac{1}{4} \times 9 =$



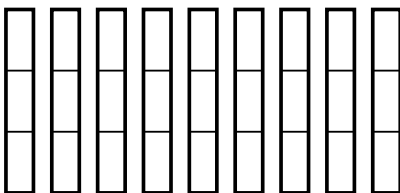
7)  $\frac{1}{2} \times 6 =$



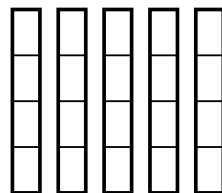
8)  $\frac{1}{2} \times 2 =$



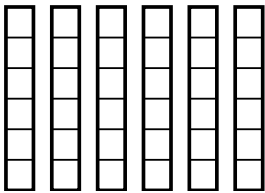
9)  $\frac{2}{3} \times 9 =$



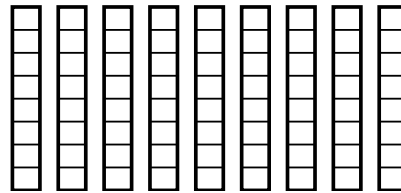
10)  $\frac{3}{4} \times 5 =$



11)  $\frac{1}{6} \times 6 =$



12)  $\frac{2}{8} \times 9 =$



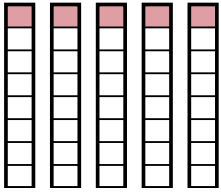
**Respuestas**

1. \_\_\_\_\_
2. \_\_\_\_\_
3. \_\_\_\_\_
4. \_\_\_\_\_
5. \_\_\_\_\_
6. \_\_\_\_\_
7. \_\_\_\_\_
8. \_\_\_\_\_
9. \_\_\_\_\_
10. \_\_\_\_\_
11. \_\_\_\_\_
12. \_\_\_\_\_

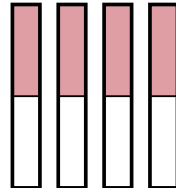


Usa los modelos visuales para resolver.

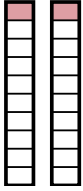
1)  $\frac{1}{8} \times 5 =$



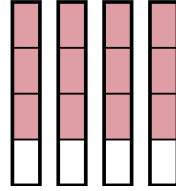
2)  $\frac{1}{2} \times 4 =$



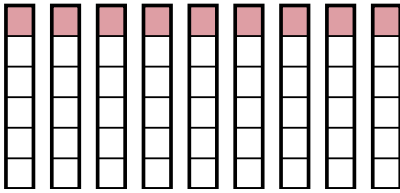
3)  $\frac{1}{10} \times 2 =$



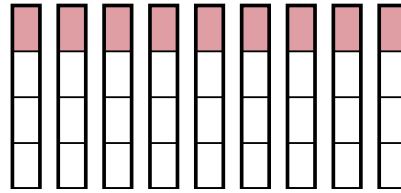
4)  $\frac{3}{4} \times 4 =$




5)  $\frac{1}{6} \times 9 =$



6)  $\frac{1}{4} \times 9 =$



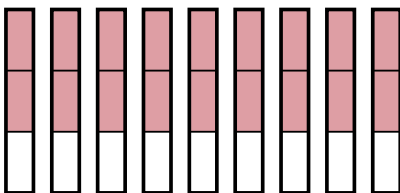
7)  $\frac{1}{2} \times 6 =$



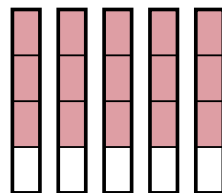
8)  $\frac{1}{2} \times 2 =$



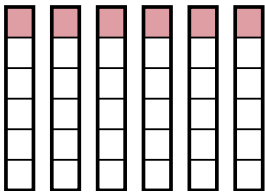
9)  $\frac{2}{3} \times 9 =$



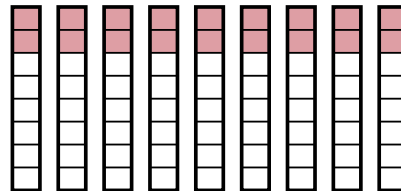
10)  $\frac{3}{4} \times 5 =$



11)  $\frac{1}{6} \times 6 =$



12)  $\frac{2}{8} \times 9 =$



**Respuestas**

1.  $\frac{5}{8}$

2.  $\frac{4}{2}$

3.  $\frac{2}{10}$

4.  $\frac{12}{4}$

5.  $\frac{9}{6}$

6.  $\frac{9}{4}$

7.  $\frac{6}{2}$

8.  $\frac{2}{2}$

9.  $\frac{18}{3}$

10.  $\frac{15}{4}$

11.  $\frac{6}{6}$

12.  $\frac{18}{8}$

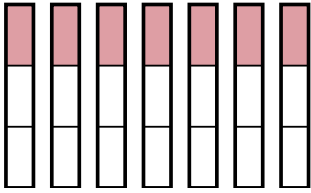




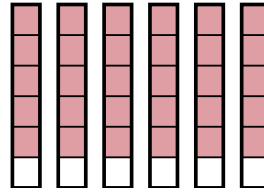


Usa los modelos visuales para resolver.

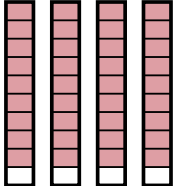
1)  $\frac{1}{3} \times 7 =$



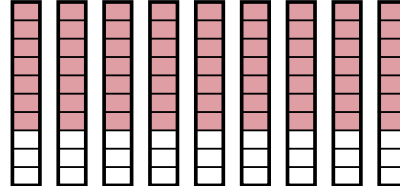
2)  $\frac{5}{6} \times 6 =$



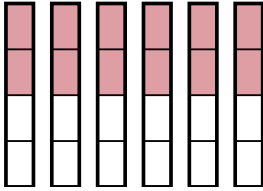
3)  $\frac{9}{10} \times 4 =$



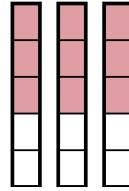
4)  $\frac{7}{10} \times 9 =$



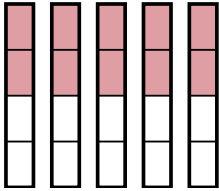
5)  $\frac{2}{4} \times 6 =$



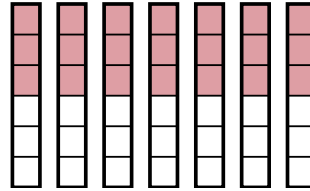
6)  $\frac{3}{5} \times 3 =$



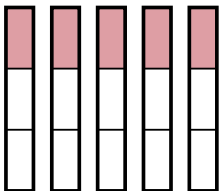
7)  $\frac{2}{4} \times 5 =$



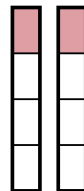
8)  $\frac{3}{6} \times 7 =$



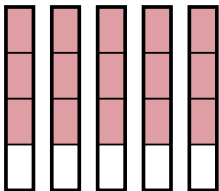
9)  $\frac{1}{3} \times 5 =$



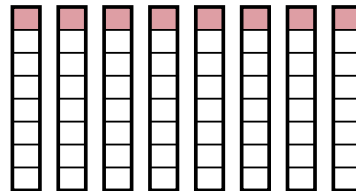
10)  $\frac{1}{4} \times 2 =$



11)  $\frac{3}{4} \times 5 =$



12)  $\frac{1}{8} \times 8 =$



**Respuestas**

1.  $\frac{7}{3}$

2.  $\frac{30}{6}$

3.  $\frac{36}{10}$

4.  $\frac{63}{10}$

5.  $\frac{12}{4}$

6.  $\frac{9}{5}$

7.  $\frac{10}{4}$

8.  $\frac{21}{6}$

9.  $\frac{5}{3}$

10.  $\frac{2}{4}$

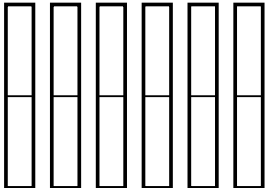
11.  $\frac{15}{4}$

12.  $\frac{8}{8}$

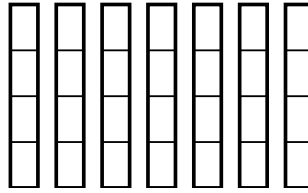


Usa los modelos visuales para resolver.

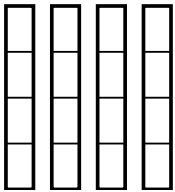
1)  $\frac{1}{2} \times 6 =$



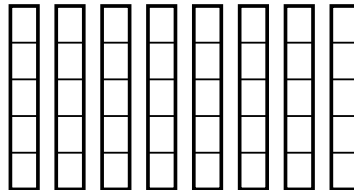
2)  $\frac{2}{4} \times 7 =$



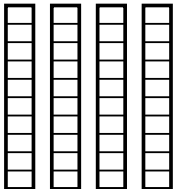
3)  $\frac{2}{4} \times 4 =$



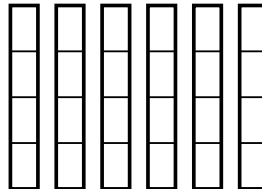
4)  $\frac{1}{5} \times 8 =$



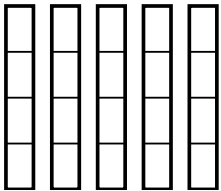
5)  $\frac{5}{10} \times 4 =$



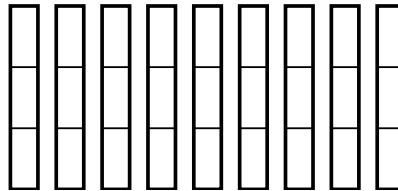
6)  $\frac{1}{4} \times 6 =$



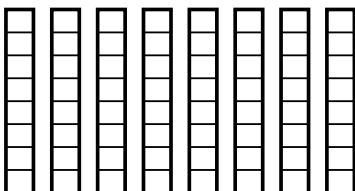
7)  $\frac{1}{4} \times 5 =$



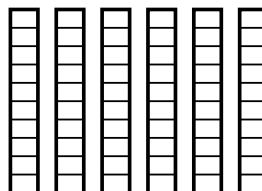
8)  $\frac{2}{3} \times 9 =$



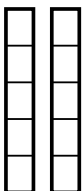
9)  $\frac{1}{8} \times 8 =$



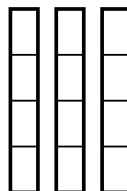
10)  $\frac{4}{10} \times 6 =$



11)  $\frac{4}{5} \times 2 =$



12)  $\frac{1}{4} \times 3 =$



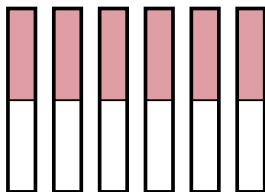
**Respuestas**

1. \_\_\_\_\_
2. \_\_\_\_\_
3. \_\_\_\_\_
4. \_\_\_\_\_
5. \_\_\_\_\_
6. \_\_\_\_\_
7. \_\_\_\_\_
8. \_\_\_\_\_
9. \_\_\_\_\_
10. \_\_\_\_\_
11. \_\_\_\_\_
12. \_\_\_\_\_

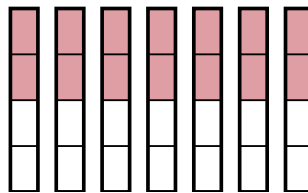


Usa los modelos visuales para resolver.

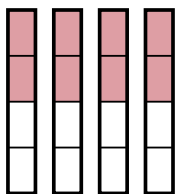
1)  $\frac{1}{2} \times 6 =$



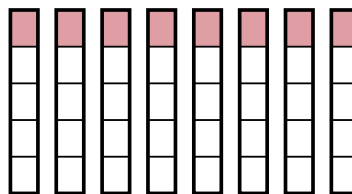
2)  $\frac{2}{4} \times 7 =$



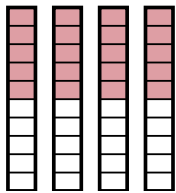
3)  $\frac{2}{4} \times 4 =$



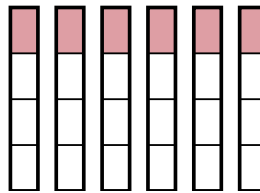
4)  $\frac{1}{5} \times 8 =$



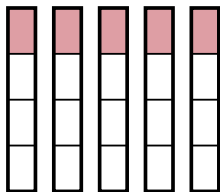
5)  $\frac{5}{10} \times 4 =$



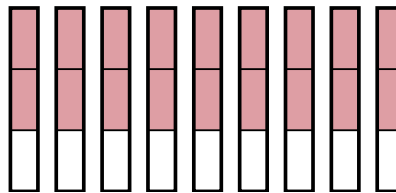
6)  $\frac{1}{4} \times 6 =$



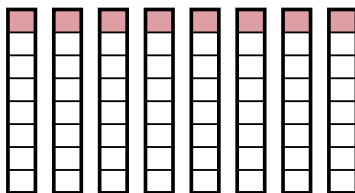
7)  $\frac{1}{4} \times 5 =$



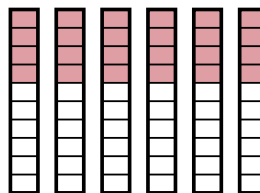
8)  $\frac{2}{3} \times 9 =$



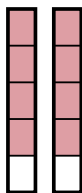
9)  $\frac{1}{8} \times 8 =$



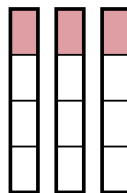
10)  $\frac{4}{10} \times 6 =$



11)  $\frac{4}{5} \times 2 =$



12)  $\frac{1}{4} \times 3 =$



**Respuestas**

1.  $\frac{6}{2}$

2.  $\frac{14}{4}$

3.  $\frac{8}{4}$

4.  $\frac{8}{5}$

5.  $\frac{20}{10}$

6.  $\frac{6}{4}$

7.  $\frac{5}{4}$

8.  $\frac{18}{3}$

9.  $\frac{8}{8}$

10.  $\frac{24}{10}$

11.  $\frac{8}{5}$

12.  $\frac{3}{4}$