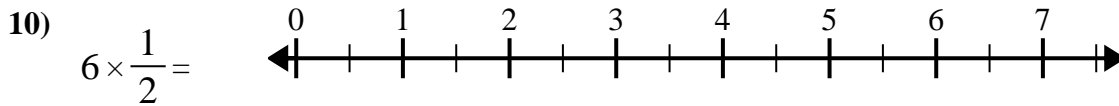
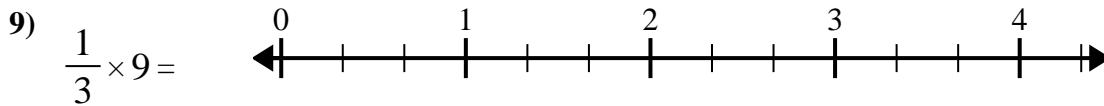
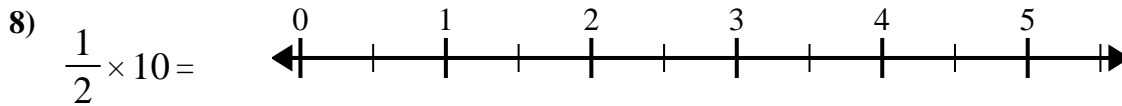
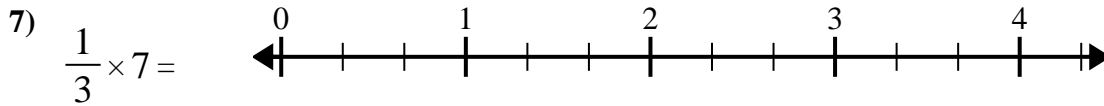
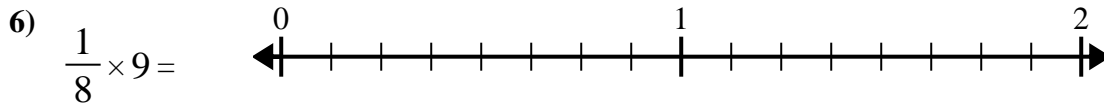
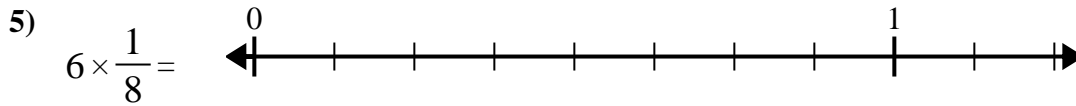
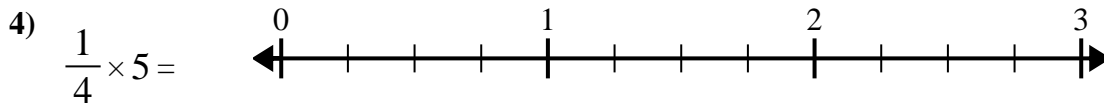
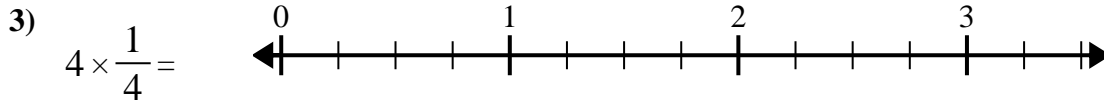

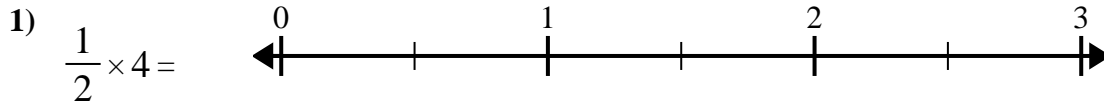




Usa la recta numérica para resolver.

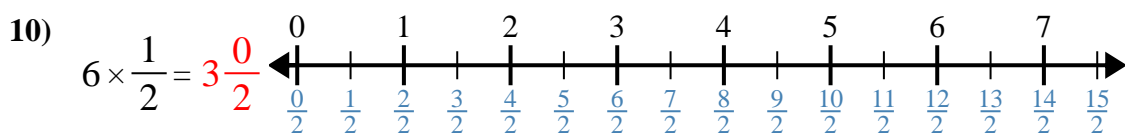
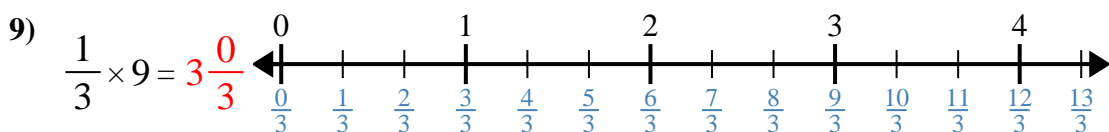
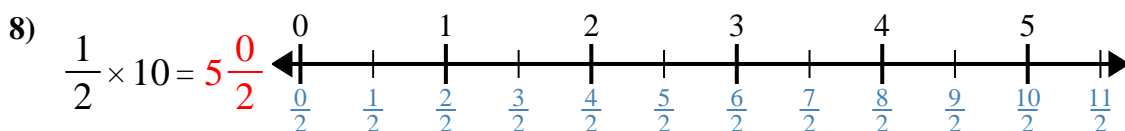
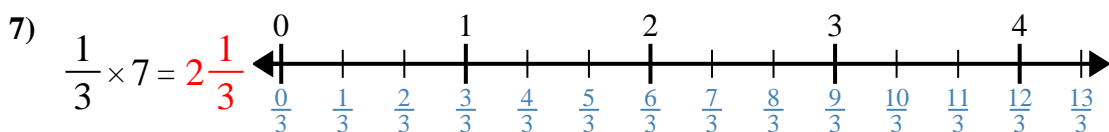
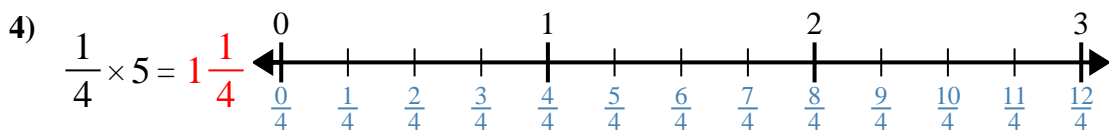
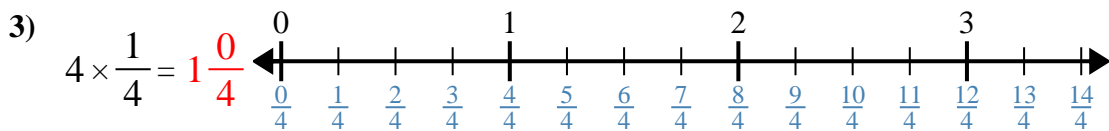
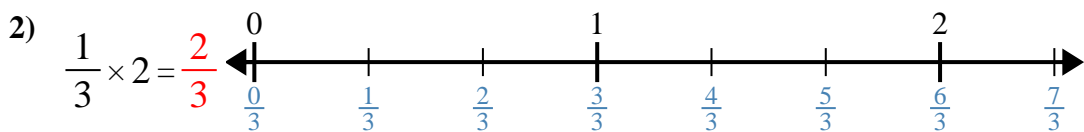
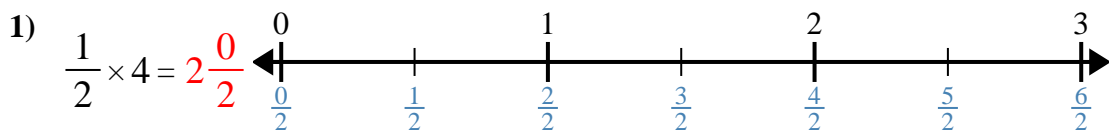


**Respuestas**

1. \_\_\_\_\_
2. \_\_\_\_\_
3. \_\_\_\_\_
4. \_\_\_\_\_
5. \_\_\_\_\_
6. \_\_\_\_\_
7. \_\_\_\_\_
8. \_\_\_\_\_
9. \_\_\_\_\_
10. \_\_\_\_\_



Usa la recta numérica para resolver.



**Respuestas**

1.  $2\frac{0}{2}$

2.  $\frac{2}{3}$

3.  $1\frac{0}{4}$

4.  $1\frac{1}{4}$

5.  $\frac{6}{8}$

6.  $1\frac{1}{8}$

7.  $2\frac{1}{3}$

8.  $5\frac{0}{2}$

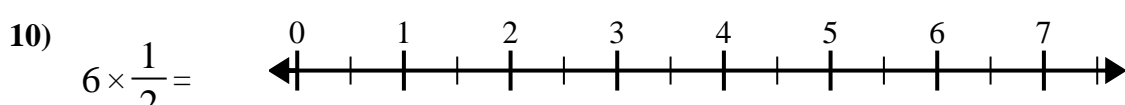
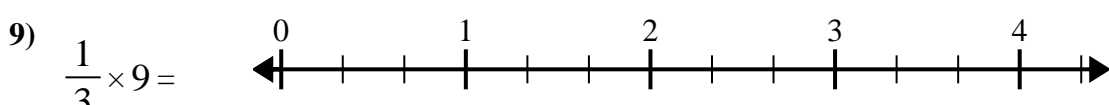
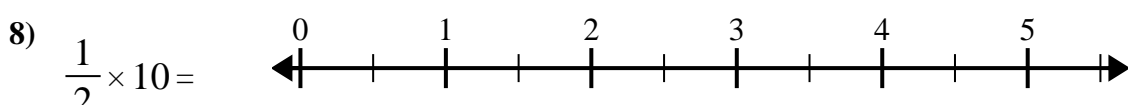
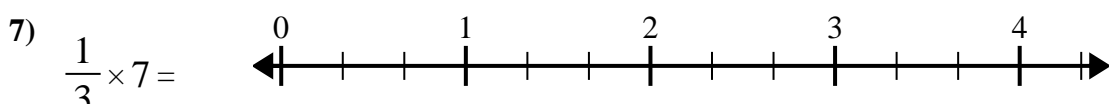
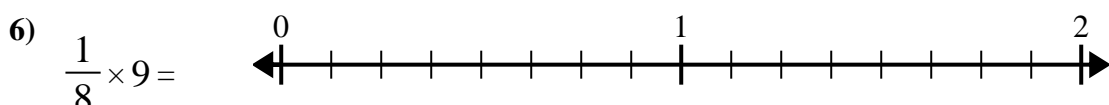
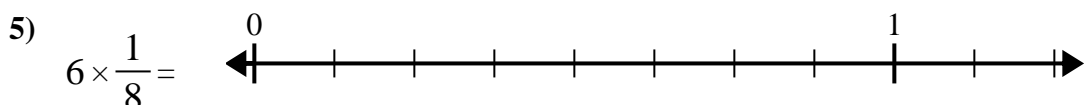
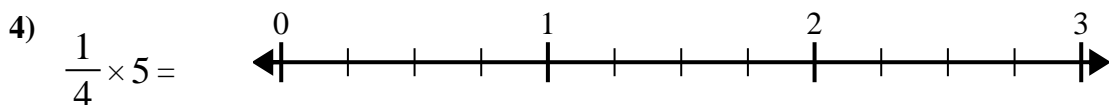
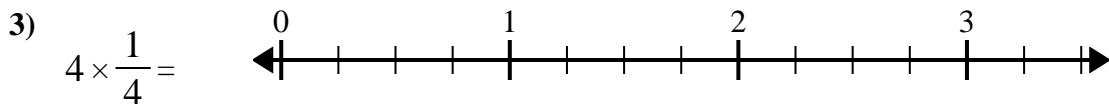
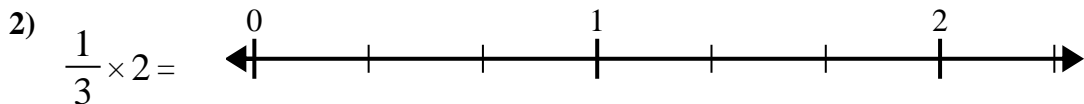
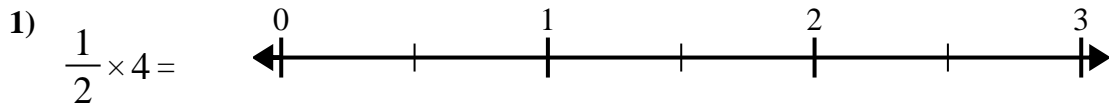
9.  $3\frac{0}{3}$

10.  $3\frac{0}{2}$



Usa la recta numérica para resolver.

$1\frac{1}{8}$	$2\frac{2}{3}$	$5\frac{0}{2}$	$3\frac{0}{3}$
$2\frac{0}{2}$	$2\frac{1}{3}$	$3\frac{0}{2}$	$6\frac{6}{8}$
$1\frac{1}{4}$	$1\frac{0}{4}$		



**Respuestas**

1. \_\_\_\_\_
2. \_\_\_\_\_
3. \_\_\_\_\_
4. \_\_\_\_\_
5. \_\_\_\_\_
6. \_\_\_\_\_
7. \_\_\_\_\_
8. \_\_\_\_\_
9. \_\_\_\_\_
10. \_\_\_\_\_