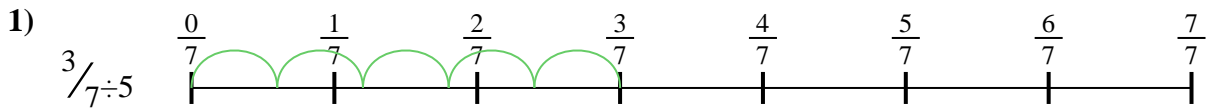





Usa la recta numérica para resolver cada problema. El primero ya está marcado como ejemplo.

Respuestas




1. _____

2. _____



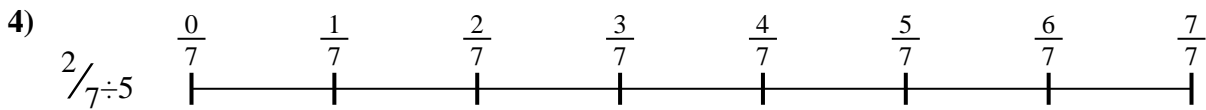
3. _____

4. _____




5. _____

6. _____




7. _____

8. _____



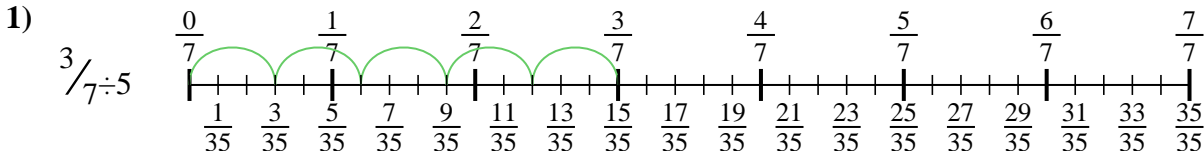
9. _____



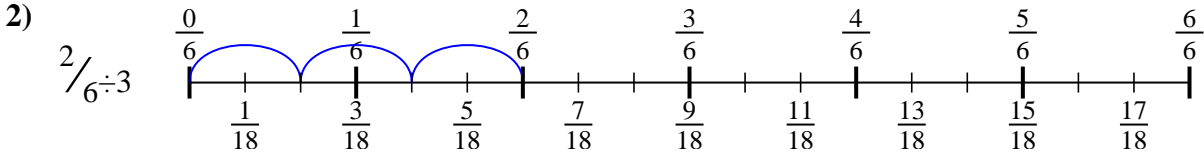


Usa la recta numérica para resolver cada problema. El primero ya está marcado como ejemplo.

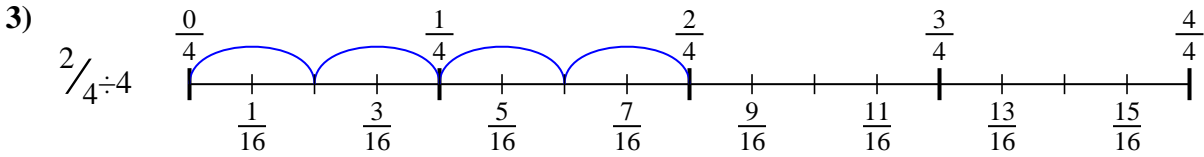
Respuestas



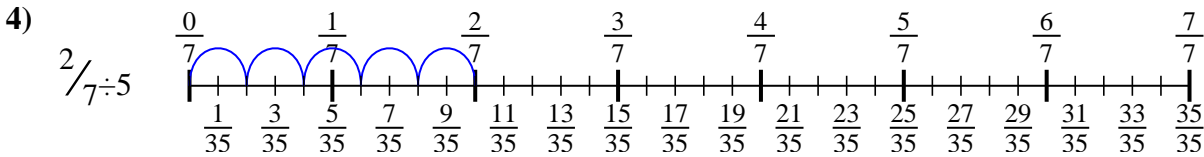
1. $\frac{3}{35}$



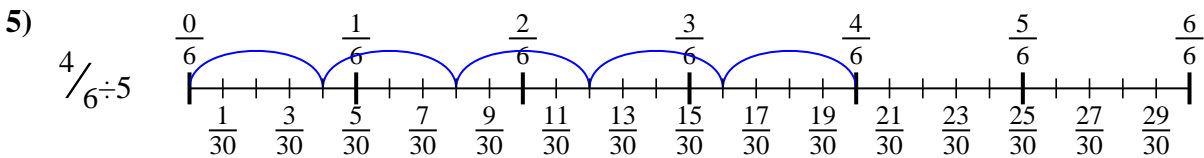
2. $\frac{2}{18}$



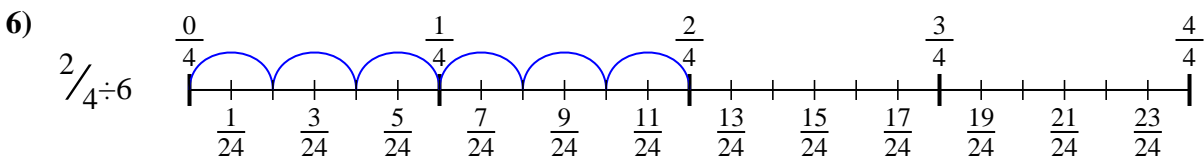
3. $\frac{2}{16}$



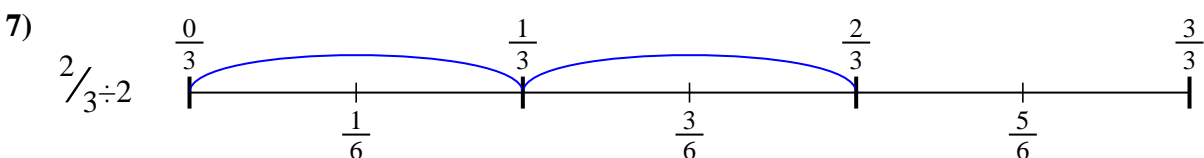
4. $\frac{2}{35}$



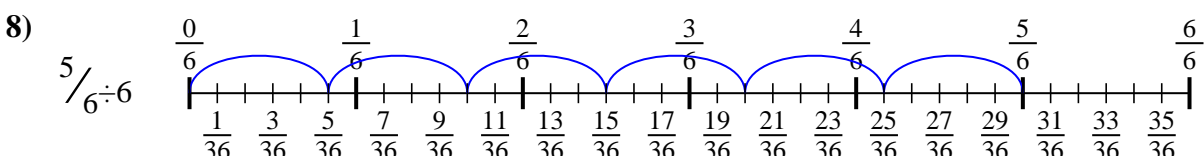
5. $\frac{4}{30}$



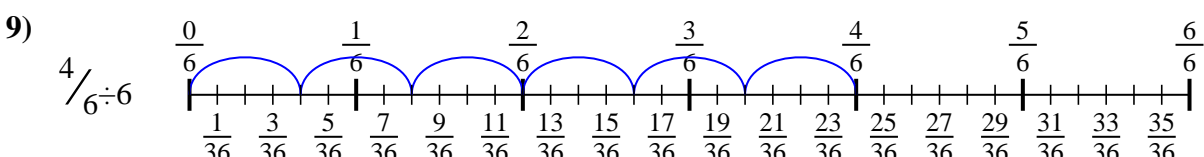
6. $\frac{2}{24}$



7. $\frac{2}{6}$



8. $\frac{5}{36}$



9. $\frac{4}{36}$



Usa la recta numérica para resolver cada problema. El primero ya está marcado como ejemplo.

Respuestas

$\frac{2}{18}$

$\frac{2}{24}$

$\frac{5}{36}$

$\frac{2}{16}$

$\frac{4}{36}$

$\frac{3}{35}$

$\frac{2}{35}$

$\frac{4}{30}$

$\frac{2}{6}$

1. _____

2. _____

3. _____

4. _____

5. _____

6. _____

7. _____

8. _____

9. _____

