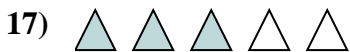
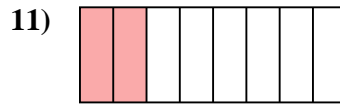
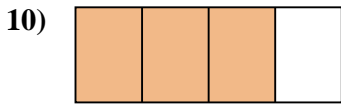
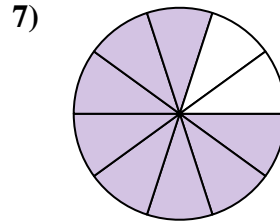
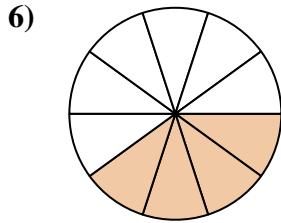
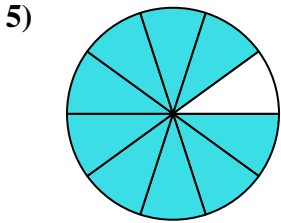

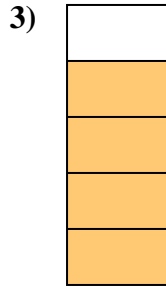
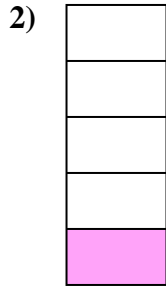





Determina si el área sombreada es 'más', 'menos' o 'igual' que la mitad.

Respuestas



1. _____

2. _____

3. _____

4. _____

5. _____

6. _____

7. _____

8. _____

9. _____

10. _____

11. _____

12. _____

13. _____

14. _____

15. _____

16. _____

17. _____

18. _____


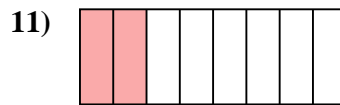
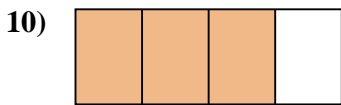
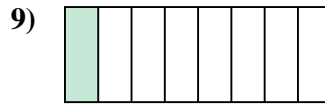
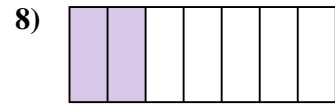
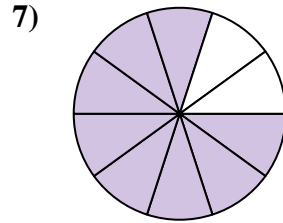
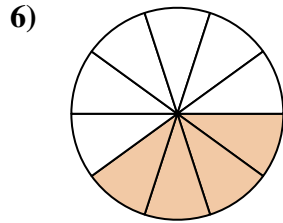
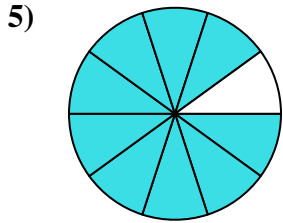

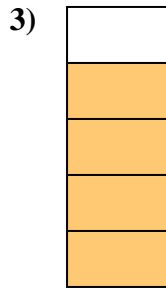
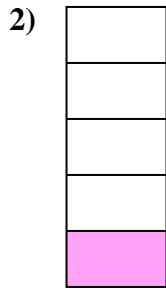

19. _____

20. _____



Determina si el área sombreada es 'más', 'menos' o 'igual' que la mitad.

Respuestas



1. mayor

2. menor

3. mayor

4. mayor

5. mayor

6. menor

7. mayor

8. menor

9. menor

10. mayor

11. menor

12. mayor

13. menor

14. menor

15. menor

16. igual

17. mayor

18. igual

19. igual

20. mayor