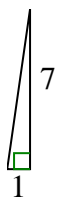




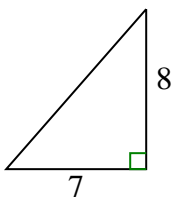
Determine qué opción tiene la misma pendiente que la que se muestra.

Respuestas

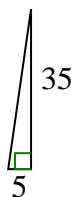
1)



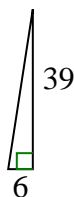
A.



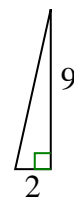
B.



C.



D.



1. _____

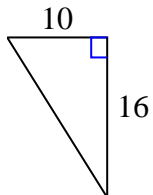
2. _____

3. _____

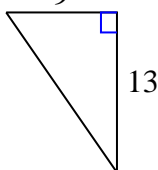
4. _____

5. _____

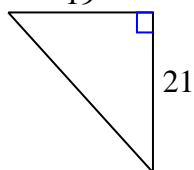
2)



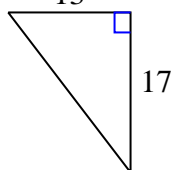
A.



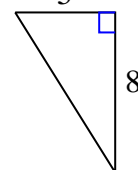
B.



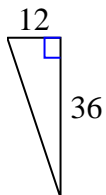
C.



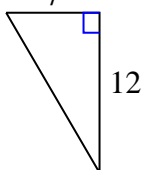
D.



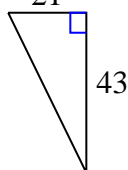
3)



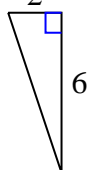
A.



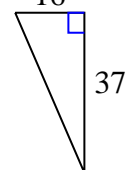
B.



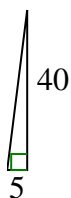
C.



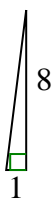
D.



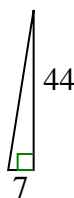
4)



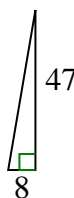
A.



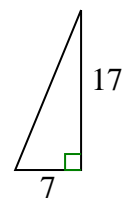
B.



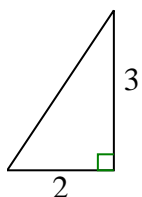
C.



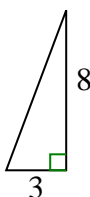
D.



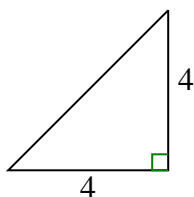
5)



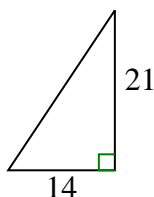
A.



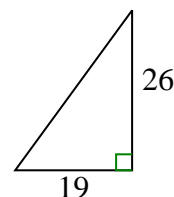
B.



C.



D.





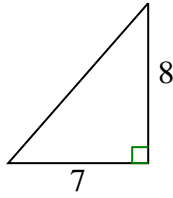
Determine qué opción tiene la misma pendiente que la que se muestra.

Respuestas

1)



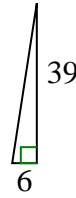
A.



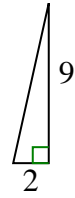
B.



C.

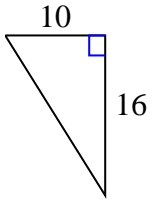


D.

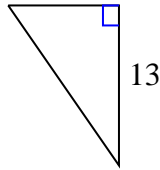


1. **B**

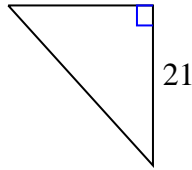
2)



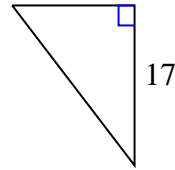
A.



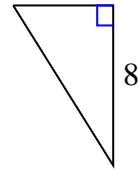
B.



C.

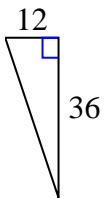


D.

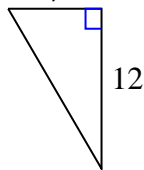


2. **D**

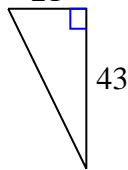
3)



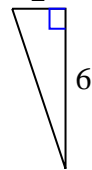
A.



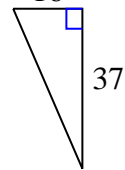
B.



C.

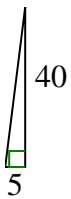


D.



3. **C**

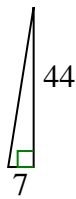
4)



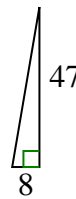
A.



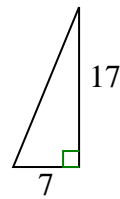
B.



C.

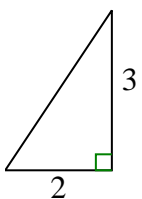


D.

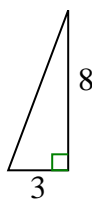


4. **A**

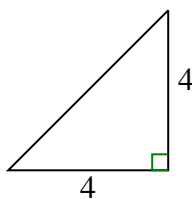
5)



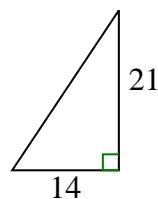
A.



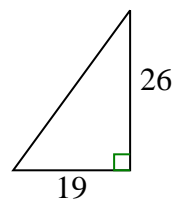
B.



C.



D.



5. **C**