





Cree y etiquete el gráfico de líneas usando el conjunto de números proporcionados.


- 1)
- |   |                |   |                |                |                |   |                |
|---|----------------|---|----------------|----------------|----------------|---|----------------|
| 7 | 7              | 5 | $5\frac{1}{2}$ | $5\frac{1}{2}$ | 5              | 7 | $7\frac{1}{2}$ |
| 6 | $7\frac{1}{2}$ | 5 | $6\frac{1}{2}$ | $7\frac{1}{2}$ | $5\frac{1}{2}$ | 6 | 6              |




- 2)
- |                |                |                |                |                |                |                |                |
|----------------|----------------|----------------|----------------|----------------|----------------|----------------|----------------|
| 6              | $4\frac{3}{8}$ | $6\frac{5}{8}$ | $6\frac{6}{8}$ | 6              | $4\frac{4}{8}$ | $4\frac{7}{8}$ | $6\frac{5}{8}$ |
| $6\frac{6}{8}$ | $4\frac{6}{8}$ | $4\frac{4}{8}$ | $4\frac{4}{8}$ | $5\frac{1}{8}$ | $5\frac{6}{8}$ | $4\frac{3}{8}$ | $6\frac{7}{8}$ |




- 3)
- |                |   |                |                |                |                |                |                |
|----------------|---|----------------|----------------|----------------|----------------|----------------|----------------|
| $4\frac{2}{4}$ | 3 | $4\frac{1}{4}$ | $2\frac{1}{4}$ | $2\frac{2}{4}$ | $3\frac{1}{4}$ | $4\frac{2}{4}$ | 3              |
| $4\frac{2}{4}$ | 3 | $2\frac{3}{4}$ | 2              | $2\frac{1}{4}$ | $3\frac{1}{4}$ | $2\frac{3}{4}$ | $3\frac{3}{4}$ |



- 4)
- |                |                |   |                |                |                |   |                |
|----------------|----------------|---|----------------|----------------|----------------|---|----------------|
| 6              | $6\frac{1}{2}$ | 5 | $6\frac{1}{2}$ | $5\frac{1}{2}$ | $6\frac{1}{2}$ | 4 | $4\frac{1}{2}$ |
| $5\frac{1}{2}$ | 4              | 5 | 6              | $4\frac{1}{2}$ | 5              | 4 | $5\frac{1}{2}$ |

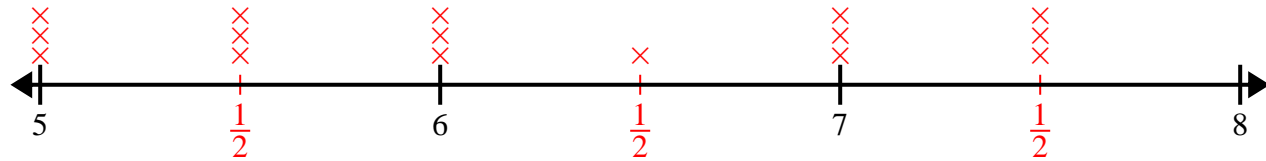
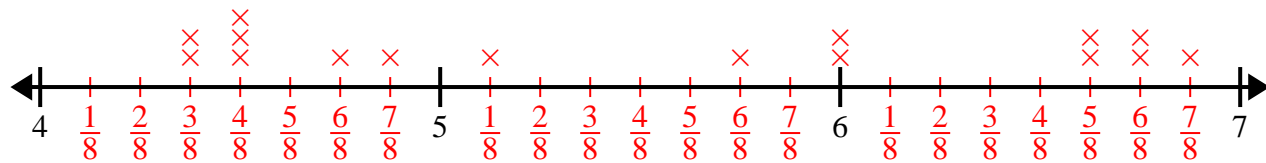
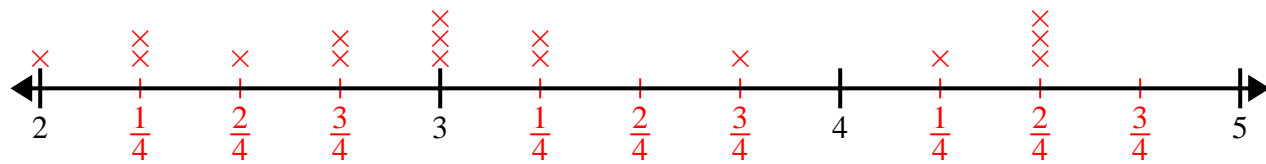
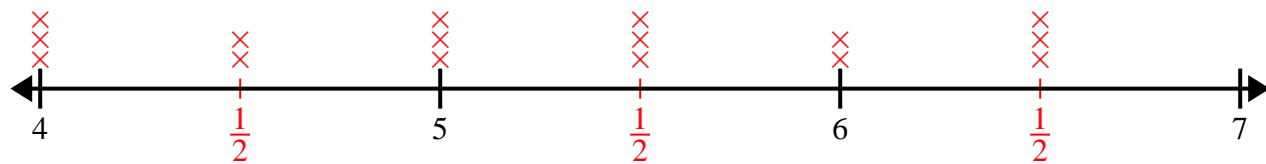


- 5)
- |                |    |                 |                 |                |                |                |                 |
|----------------|----|-----------------|-----------------|----------------|----------------|----------------|-----------------|
| 11             | 9  | $10\frac{2}{4}$ | 11              | $9\frac{3}{4}$ | 9              | 9              | $11\frac{3}{4}$ |
| $9\frac{2}{4}$ | 10 | $11\frac{2}{4}$ | $11\frac{2}{4}$ | $9\frac{2}{4}$ | $9\frac{1}{4}$ | $9\frac{2}{4}$ | $11\frac{3}{4}$ |





Cree y etiqüete el gráfico de líneas usando el conjunto de números proporcionados.

1) 7      7      5       $5\frac{1}{2}$        $5\frac{1}{2}$       5      7       $7\frac{1}{2}$ 6       $7\frac{1}{2}$       5       $6\frac{1}{2}$        $7\frac{1}{2}$        $5\frac{1}{2}$       6      62) 6       $4\frac{3}{8}$        $6\frac{5}{8}$        $6\frac{6}{8}$       6       $4\frac{4}{8}$        $4\frac{7}{8}$        $6\frac{5}{8}$  $6\frac{6}{8}$        $4\frac{6}{8}$        $4\frac{4}{8}$        $4\frac{4}{8}$        $5\frac{1}{8}$        $5\frac{6}{8}$        $4\frac{3}{8}$        $6\frac{7}{8}$ 3)  $4\frac{2}{4}$       3       $4\frac{1}{4}$        $2\frac{1}{4}$        $2\frac{2}{4}$        $3\frac{1}{4}$        $4\frac{2}{4}$       3 $4\frac{2}{4}$       3       $2\frac{3}{4}$       2       $2\frac{1}{4}$        $3\frac{1}{4}$        $2\frac{3}{4}$        $3\frac{3}{4}$ 4) 6       $6\frac{1}{2}$       5       $6\frac{1}{2}$        $5\frac{1}{2}$        $6\frac{1}{2}$       4       $4\frac{1}{2}$  $5\frac{1}{2}$       4      5      6       $4\frac{1}{2}$       5      4       $5\frac{1}{2}$ 5) 11      9       $10\frac{2}{4}$       11       $9\frac{3}{4}$       9      9       $11\frac{3}{4}$  $9\frac{2}{4}$       10       $11\frac{2}{4}$        $11\frac{2}{4}$        $9\frac{2}{4}$        $9\frac{1}{4}$        $9\frac{2}{4}$        $11\frac{3}{4}$ 