





Cree y etiquete el gráfico de líneas usando el conjunto de números proporcionados.


- 1) 3 $4\frac{1}{2}$ 5 $3\frac{1}{2}$ $4\frac{1}{2}$ $3\frac{1}{2}$ $3\frac{1}{2}$ 3
 3 $4\frac{1}{2}$ 4 $5\frac{1}{2}$ 5 $5\frac{1}{2}$ $5\frac{1}{2}$ 5




- 2) $4\frac{2}{8}$ $4\frac{3}{8}$ $6\frac{2}{8}$ 4 $5\frac{1}{8}$ $5\frac{5}{8}$ $6\frac{7}{8}$ 6
 $5\frac{7}{8}$ $5\frac{5}{8}$ $6\frac{2}{8}$ $5\frac{1}{8}$ $4\frac{5}{8}$ $6\frac{2}{8}$ $6\frac{1}{8}$ 4




- 3) $10\frac{1}{2}$ 11 11 10 $10\frac{1}{2}$ 10 $9\frac{1}{2}$ 9
 $10\frac{1}{2}$ $11\frac{1}{2}$ 9 10 9 11 $9\frac{1}{2}$ $9\frac{1}{2}$



- 4) $4\frac{2}{8}$ $3\frac{3}{8}$ $5\frac{7}{8}$ $3\frac{3}{8}$ $3\frac{2}{8}$ $4\frac{7}{8}$ $5\frac{3}{8}$ $3\frac{6}{8}$
 $5\frac{6}{8}$ $4\frac{5}{8}$ $4\frac{2}{8}$ $3\frac{1}{8}$ $3\frac{5}{8}$ $3\frac{6}{8}$ 4 4



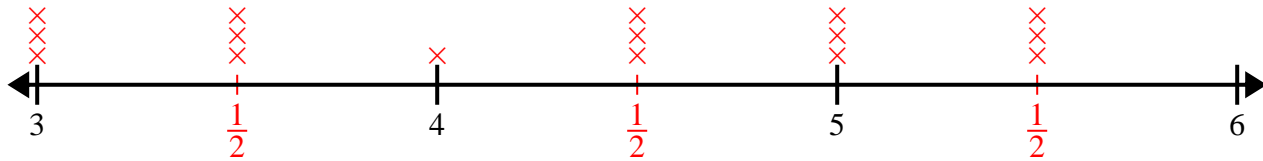
- 5) $9\frac{3}{4}$ $8\frac{2}{4}$ $9\frac{1}{4}$ $8\frac{3}{4}$ $7\frac{3}{4}$ 7 $9\frac{3}{4}$ 9
 $8\frac{3}{4}$ 8 $9\frac{2}{4}$ $8\frac{3}{4}$ 8 9 $7\frac{1}{4}$ 7



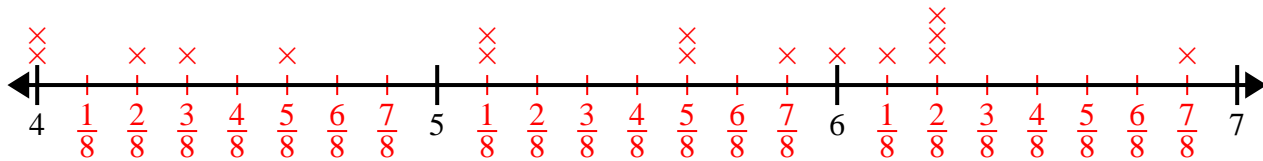


Cree y etiqüete el gráfico de líneas usando el conjunto de números proporcionados.

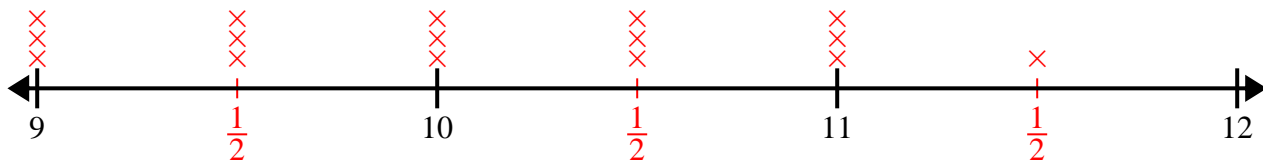
- 1) 3 $4\frac{1}{2}$ 5 $3\frac{1}{2}$ $4\frac{1}{2}$ $3\frac{1}{2}$ $3\frac{1}{2}$ 3
 3 $4\frac{1}{2}$ 4 $5\frac{1}{2}$ 5 $5\frac{1}{2}$ $5\frac{1}{2}$ 5



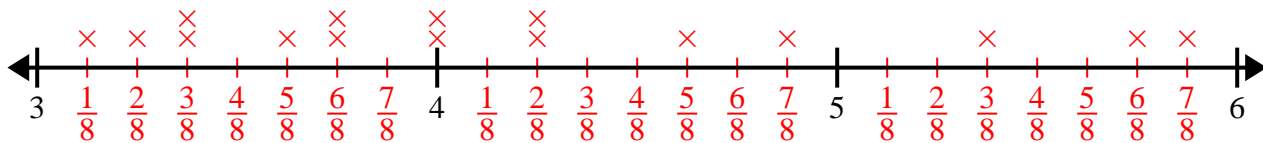
- 2) $4\frac{2}{8}$ $4\frac{3}{8}$ $6\frac{2}{8}$ 4 $5\frac{1}{8}$ $5\frac{5}{8}$ $6\frac{7}{8}$ 6
 $5\frac{7}{8}$ $5\frac{5}{8}$ $6\frac{2}{8}$ $5\frac{1}{8}$ $4\frac{5}{8}$ $6\frac{2}{8}$ $6\frac{1}{8}$ 4



- 3) $10\frac{1}{2}$ 11 11 10 $10\frac{1}{2}$ 10 $9\frac{1}{2}$ 9
 $10\frac{1}{2}$ $11\frac{1}{2}$ 9 10 9 11 $9\frac{1}{2}$ $9\frac{1}{2}$



- 4) $4\frac{2}{8}$ $3\frac{3}{8}$ $5\frac{7}{8}$ $3\frac{3}{8}$ $3\frac{2}{8}$ $4\frac{7}{8}$ $5\frac{3}{8}$ $3\frac{6}{8}$
 $5\frac{6}{8}$ $4\frac{5}{8}$ $4\frac{2}{8}$ $3\frac{1}{8}$ $3\frac{5}{8}$ $3\frac{6}{8}$ 4 4



- 5) $9\frac{3}{4}$ $8\frac{2}{4}$ $9\frac{1}{4}$ $8\frac{3}{4}$ $7\frac{3}{4}$ 7 $9\frac{3}{4}$ 9
 $8\frac{3}{4}$ 8 $9\frac{2}{4}$ $8\frac{3}{4}$ 8 9 $7\frac{1}{4}$ 7

