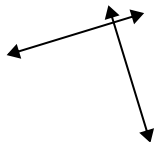




Utilice 'paralelo', 'perpendicular' (perpendicular) o 'inter' (intersección) para describir las líneas.

Respuestas

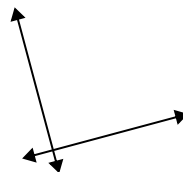
1)



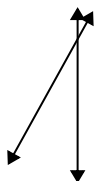
2)



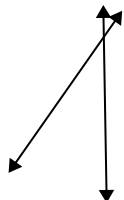
3)



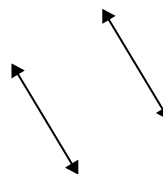
4)



5)



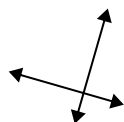
6)



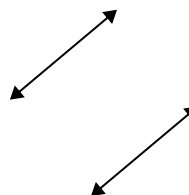
7)



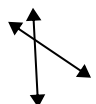
8)



9)



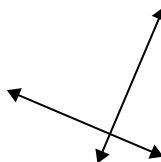
10)



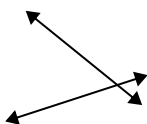
11)



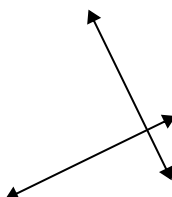
12)



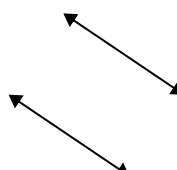
13)



14)



15)



1. _____

2. _____

3. _____

4. _____

5. _____

6. _____

7. _____

8. _____

9. _____

10. _____

11. _____

12. _____

13. _____

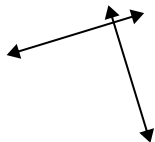
14. _____

15. _____



Utilice 'paralelo', 'perpendicular' (perpendicular) o 'inter' (intersección) para describir las líneas.

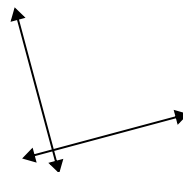
1)



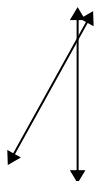
2)



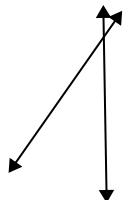
3)



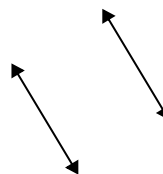
4)



5)



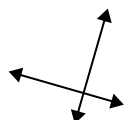
6)



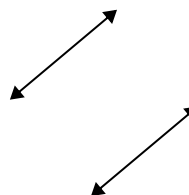
7)



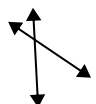
8)



9)



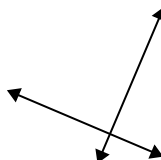
10)



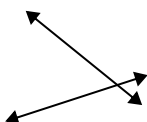
11)



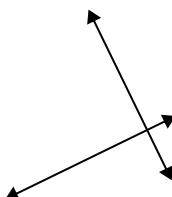
12)



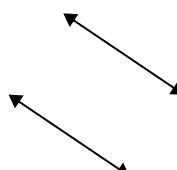
13)



14)



15)

**Respuestas**1. **perp y inter**2. **paralelo**3. **perp y inter**4. **inter**5. **inter**6. **paralelo**7. **inter**8. **perp y inter**9. **paralelo**10. **inter**11. **inter**12. **perp y inter**13. **inter**14. **perp y inter**15. **paralelo**