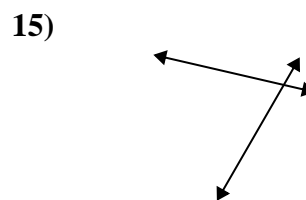
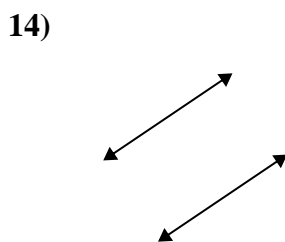
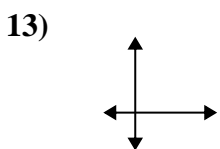
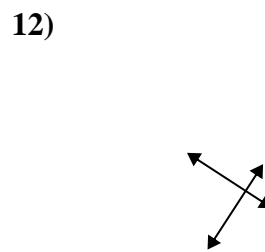
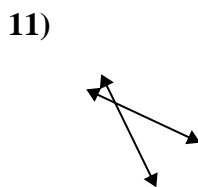
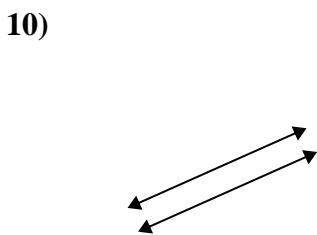
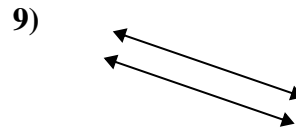
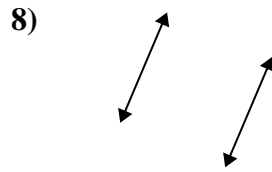
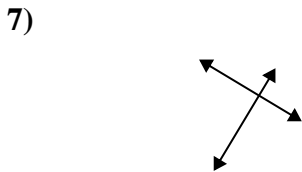
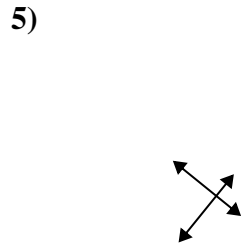
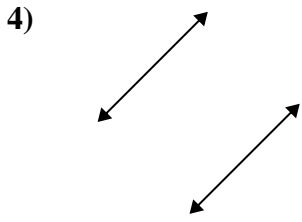
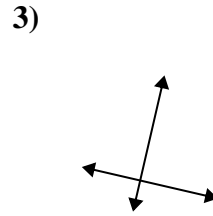
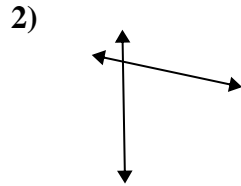
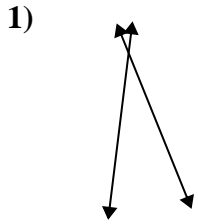




Utilice 'paralelo', 'perpendicular' (perpendicular) o 'inter' (intersección) para describir las líneas.

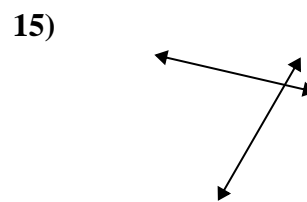
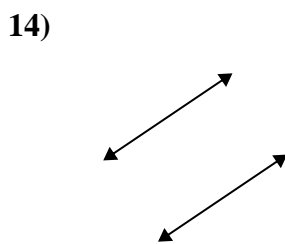
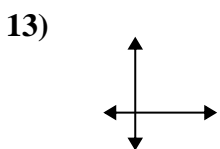
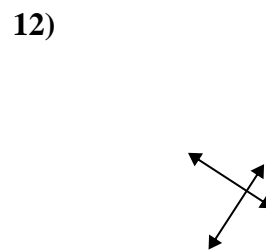
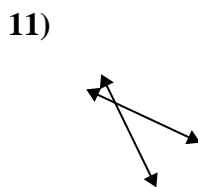
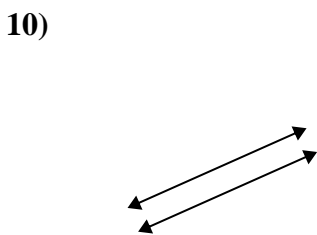
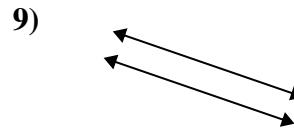
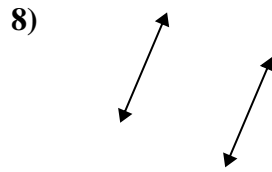
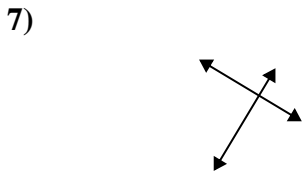
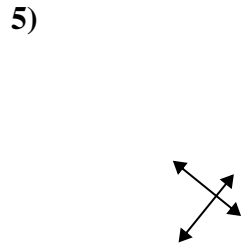
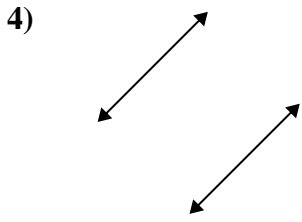
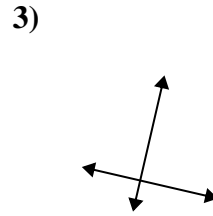
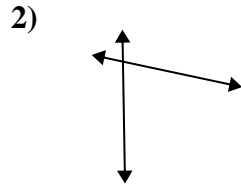
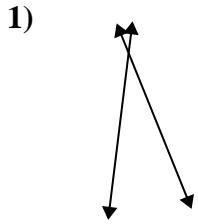
Respuestas



1. _____
2. _____
3. _____
4. _____
5. _____
6. _____
7. _____
8. _____
9. _____
10. _____
11. _____
12. _____
13. _____
14. _____
15. _____



Utilice 'paralelo', 'perpendicular' (perpendicular) o 'inter' (intersección) para describir las líneas.



Respuestas

1. inter

2. inter

3. perp & inter

4. paralelo

5. perp & inter

6. inter

7. perp & inter

8. paralelo

9. paralelo

10. paralelo

11. inter

12. perp & inter

13. perp & inter

14. paralelo

15. inter