




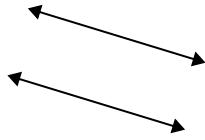
Utilice 'paralelo', 'perpendicular' (perpendicular) o 'inter' (intersección) para describir las líneas.

Respuestas

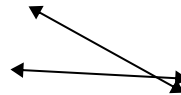
1)



2)



3)



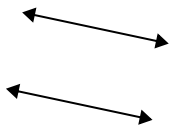
1. _____

2. _____

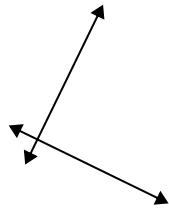
3. _____

4. _____

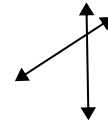
4)



5)



6)



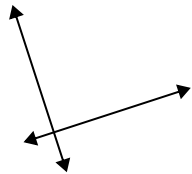
5. _____

6. _____

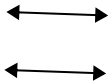
7. _____

8. _____

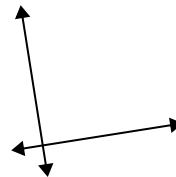
7)



8)



9)



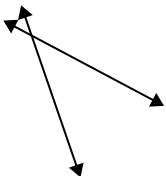
9. _____

10. _____

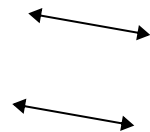
11. _____

12. _____

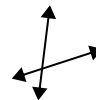
10)



11)



12)

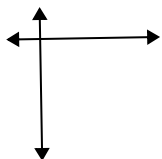


13. _____

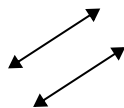
14. _____

15. _____

13)



14)



15)






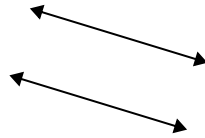
Utilice 'paralelo', 'perpendicular' (perpendicular) o 'inter' (intersección) para describir las líneas.

Respuestas

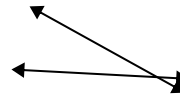
1)



2)



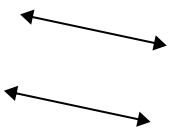
3)



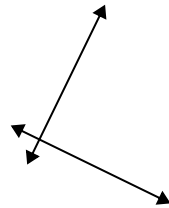
1.

inter

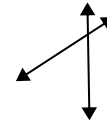
4)



5)



6)



2.

paralelo

3.

inter

4.

paralelo

5.

perp & inter

6.

inter

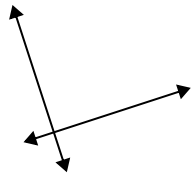
7.

perp & inter

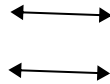
8.

paralelo

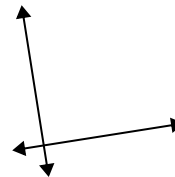
7)



8)



9)



9.

perp & inter

10.

inter

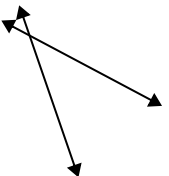
11.

paralelo

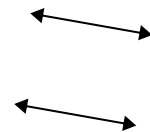
12.

inter

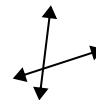
10)



11)



12)



13.

perp & inter

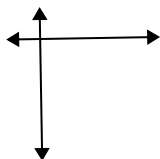
14.

paralelo

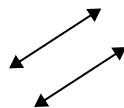
15.

perp & inter

13)



14)



15)

