



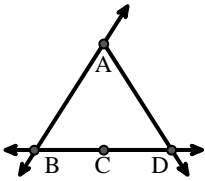
Haga coincidir la descripción de la parte superior con la imagen visual en la parte inferior.

Respuestas

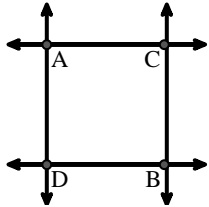
- 1) Right $\angle ADE$
- 2) D as the midpoint of \overleftrightarrow{CE}
- 3) Acute $\angle BED$
- 4) \overleftrightarrow{AB} intersecting \overleftrightarrow{AD}
- 5) Acute $\angle BDE$
- 6) \overleftrightarrow{AD} intersecting \overleftrightarrow{BC} at point E
- 7) \overleftrightarrow{AB} parallel to \overleftrightarrow{CD}
- 8) \overleftrightarrow{AB} intersecting $\angle BCD$ at point B
- 9) \overleftrightarrow{AC} perpendicular to \overleftrightarrow{AD}
- 10) \overleftrightarrow{AE} intersecting \overleftrightarrow{DB}
- 11) \overleftrightarrow{BD} intersecting $\angle ACE$
- 12) \overleftrightarrow{BA} intersecting \overleftrightarrow{AD}

1. _____
2. _____
3. _____
4. _____
5. _____
6. _____
7. _____
8. _____
9. _____
10. _____
11. _____
12. _____

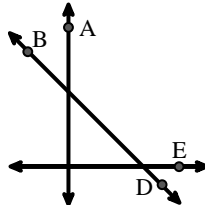
A.



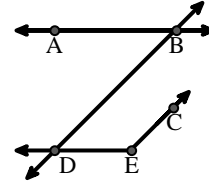
B.



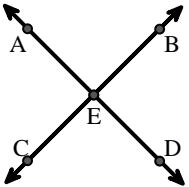
C.



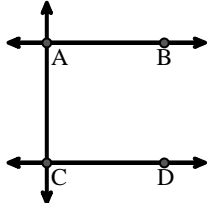
D.



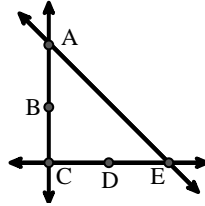
E.



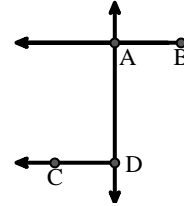
F.



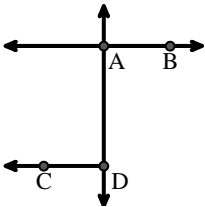
G.



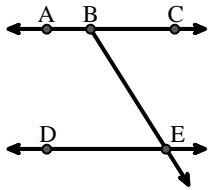
H.



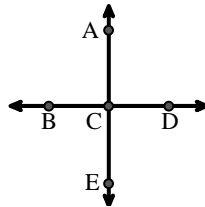
I.



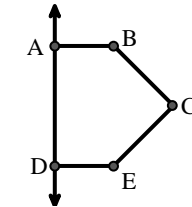
J.



K.



L.



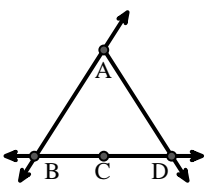


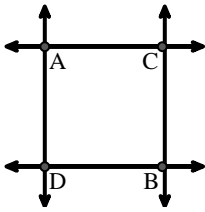
Haga coincidir la descripción de la parte superior con la imagen visual en la parte inferior.

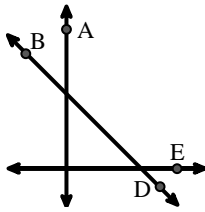
Respuestas

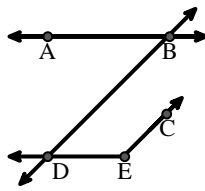
- 1) Right $\angle ADE$
- 2) D as the midpoint of \overleftrightarrow{CE}
- 3) Acute $\angle BED$
- 4) \overleftrightarrow{AB} intersecting \overleftrightarrow{AD}
- 5) Acute $\angle BDE$
- 6) \overleftrightarrow{AD} intersecting \overleftrightarrow{BC} at point E
- 7) \overleftrightarrow{AB} parallel to \overleftrightarrow{CD}
- 8) \overleftrightarrow{AB} intersecting $\angle BCD$ at point B
- 9) \overleftrightarrow{AC} perpendicular to \overleftrightarrow{AD}
- 10) \overleftrightarrow{AE} intersecting \overleftrightarrow{DB}
- 11) \overleftrightarrow{BD} intersecting $\angle ACE$
- 12) \overleftrightarrow{BA} intersecting \overleftrightarrow{AD}

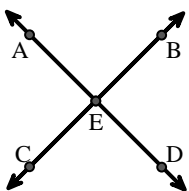
1. **L**
2. **G**
3. **J**
4. **I**
5. **D**
6. **E**
7. **F**
8. **A**
9. **B**
10. **K**
11. **C**
12. **H**

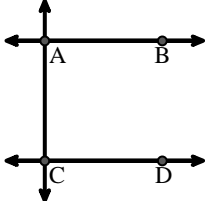
A. 

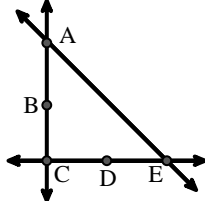
B. 

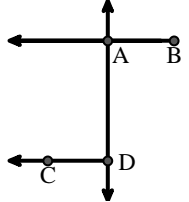
C. 

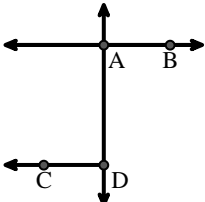
D. 

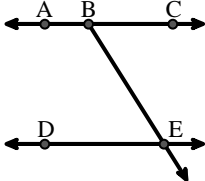
E. 

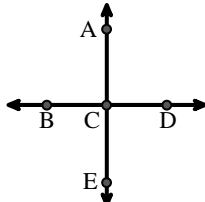
F. 

G. 

H. 

I. 

J. 

K. 

L. 