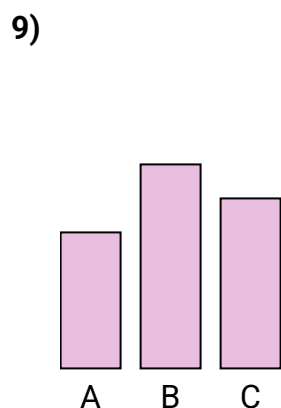
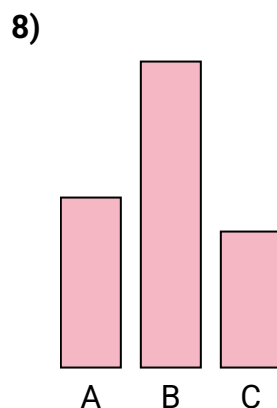
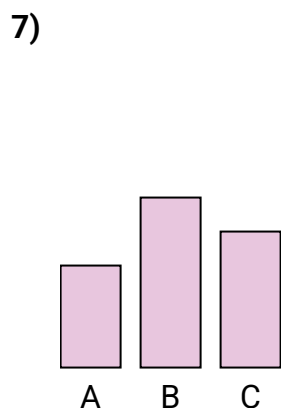
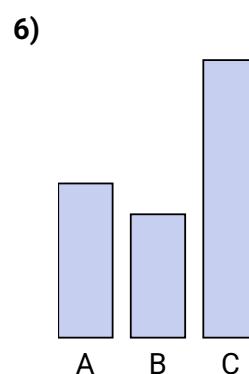
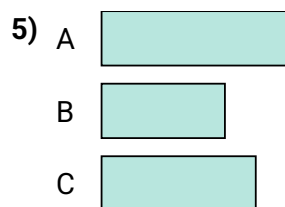
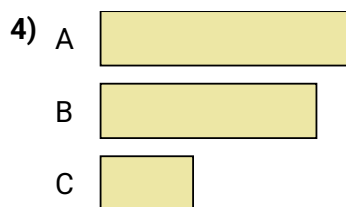
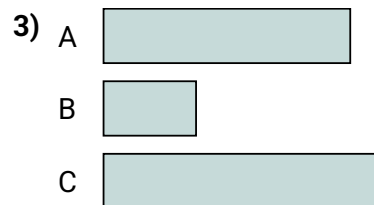
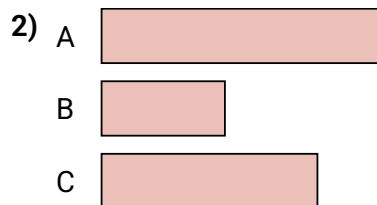
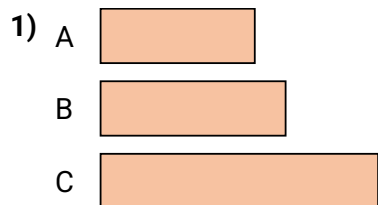




Ordenar los objetos del más corto al más largo

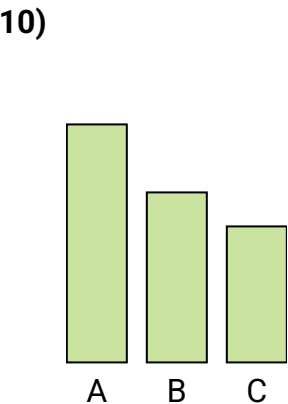
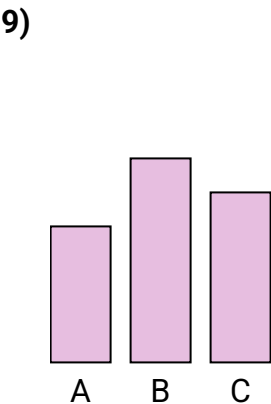
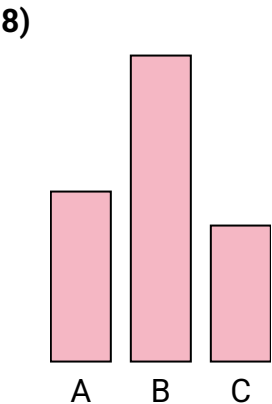
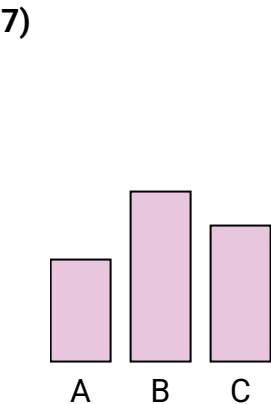
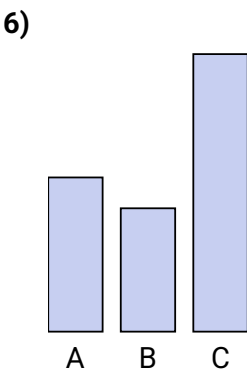
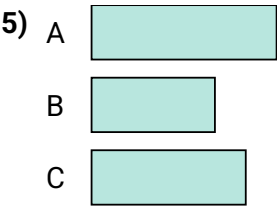
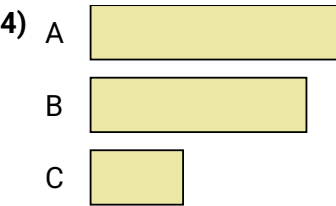
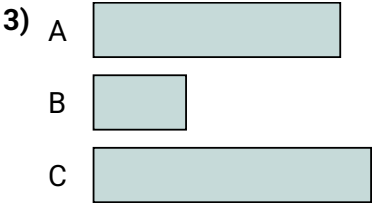
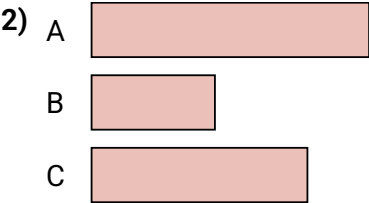
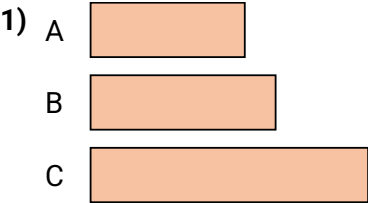


**Respuestas**

1. \_\_\_\_\_
2. \_\_\_\_\_
3. \_\_\_\_\_
4. \_\_\_\_\_
5. \_\_\_\_\_
6. \_\_\_\_\_
7. \_\_\_\_\_
8. \_\_\_\_\_
9. \_\_\_\_\_
10. \_\_\_\_\_



Ordenar los objetos del más corto al más largo



Respuestas	
1.	<b>A, B, C</b>
2.	<b>B, C, A</b>
3.	<b>B, A, C</b>
4.	<b>C, B, A</b>
5.	<b>B, C, A</b>
6.	<b>B, A, C</b>
7.	<b>A, C, B</b>
8.	<b>C, A, B</b>
9.	<b>A, C, B</b>
10.	<b>C, B, A</b>