





Usar la matriz proporcionada para resolver cada problema.


1) $56 \times 36 =$




2) $47 \times 26 =$



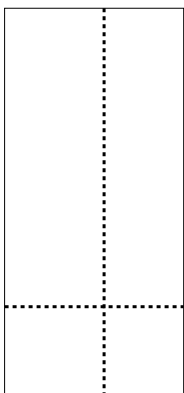
3) $36 \times 29 =$




4) $33 \times 32 =$



5) $39 \times 18 =$



6) $32 \times 22 =$



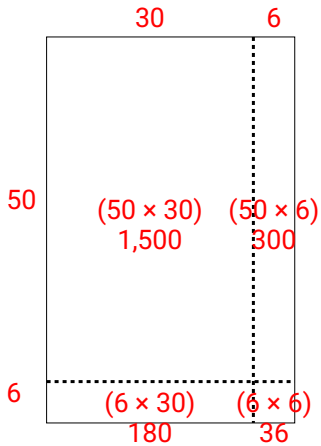
Respuestas

- 1. _____
- 2. _____
- 3. _____
- 4. _____
- 5. _____
- 6. _____

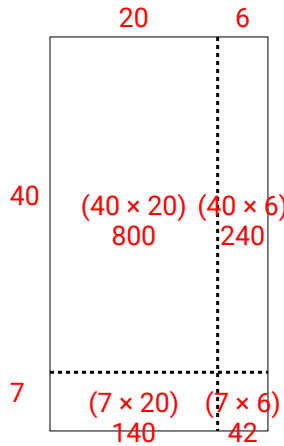


Usar la matriz proporcionada para resolver cada problema.

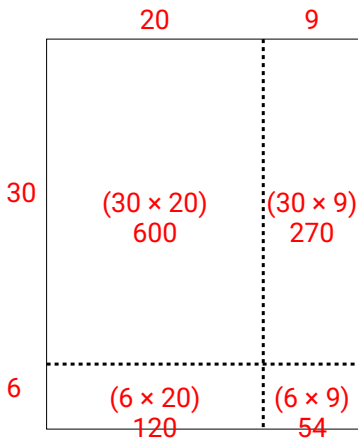
1) $56 \times 36 =$



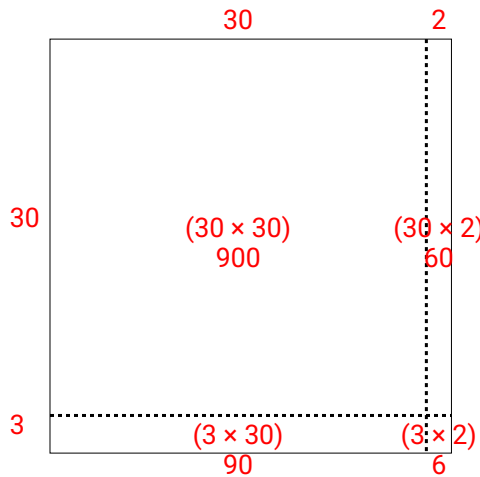
2) $47 \times 26 =$



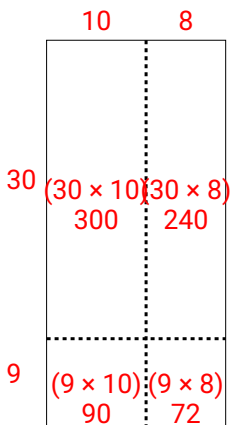
3) $36 \times 29 =$



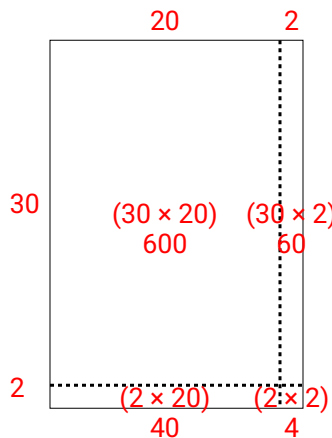
4) $33 \times 32 =$



5) $39 \times 18 =$



6) $32 \times 22 =$



Respuestas

1. **2,016**

2. **1,222**

3. **1,044**

4. **1,056**

5. **702**

6. **704**