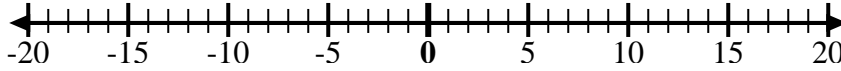


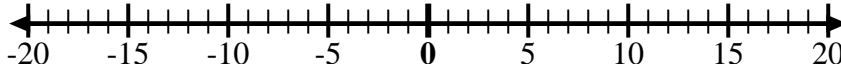


Utilice las rectas numéricas para mostrar cada expresión y resolver.

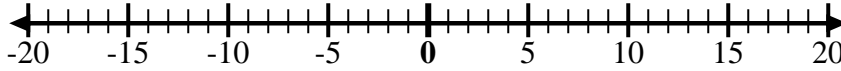
Ej) Empiece en 0
y agregue -2



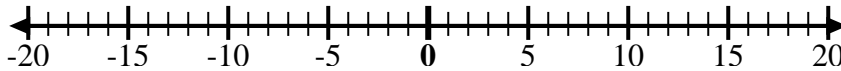
1) Empiece en 0
y agregue -5



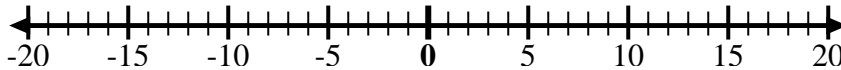
2) Empiece en 0
y agregue 7



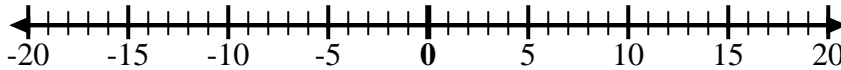
3) Empiece en -6
y agregue 12



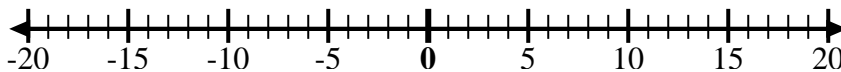
4) Empiece en -2
y agregue -2



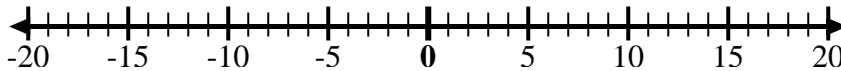
5) Empiece en 2
y agregue -8



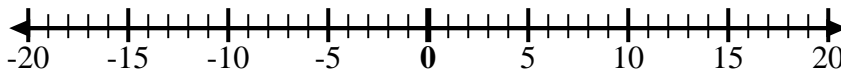
6) Empiece en 3
y agregue -11



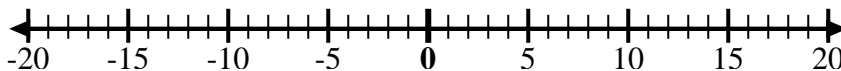
7) Empiece en -7
y agregue 16



8) Empiece en -9
y agregue 7



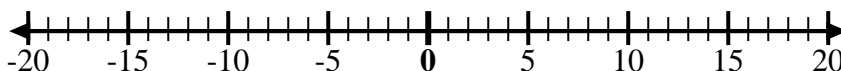
9) Empiece en -8
y agregue 3



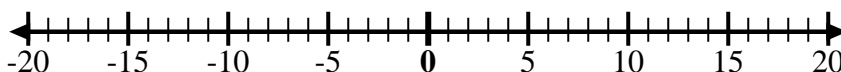
10) Empiece en 5
y agregue -15



11) Empiece en -8
y agregue 4



12) Empiece en 5
y agregue -6



Respuestas

Ej. $0 + -2 = -2$

1. _____

2. _____

3. _____

4. _____

5. _____

6. _____

7. _____

8. _____

9. _____

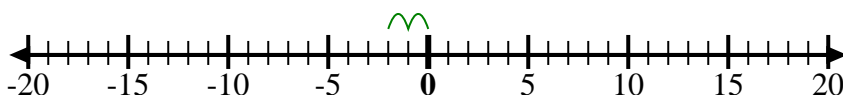
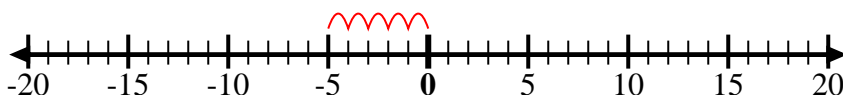
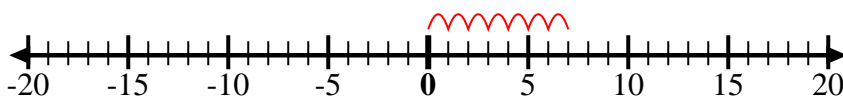
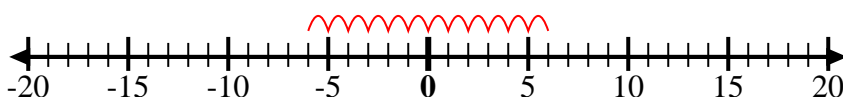
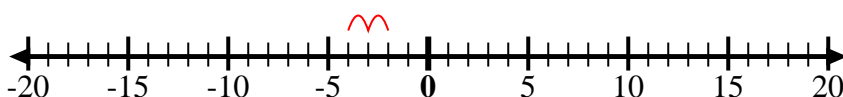
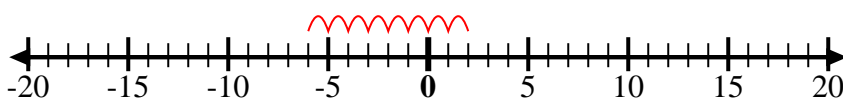
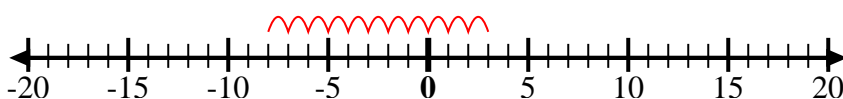
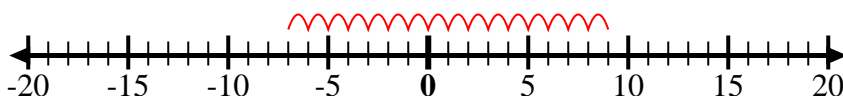
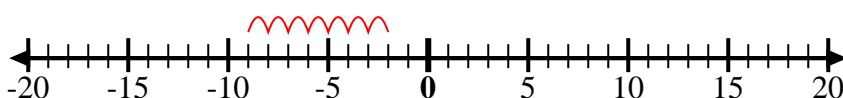
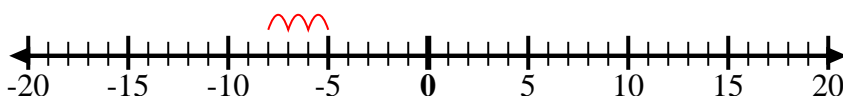
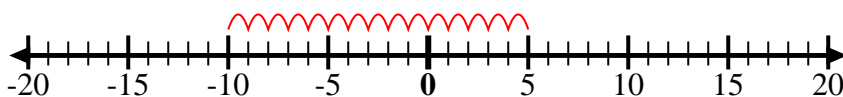
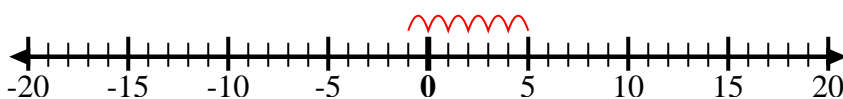
10. _____

11. _____

12. _____



Utilice las rectas numéricas para mostrar cada expresión y resolver.

Ej) Empiece en 0
y agregue -21) Empiece en 0
y agregue -52) Empiece en 0
y agregue 73) Empiece en -6
y agregue 124) Empiece en -2
y agregue -25) Empiece en 2
y agregue -86) Empiece en 3
y agregue -117) Empiece en -7
y agregue 168) Empiece en -9
y agregue 79) Empiece en -8
y agregue 310) Empiece en 5
y agregue -1511) Empiece en -8
y agregue 412) Empiece en 5
y agregue -6**Respuestas**

Ej. $0 + -2 = -2$

1. $0 + -5 = -5$

2. $0 + 7 = 7$

3. $-6 + 12 = 6$

4. $-2 + -2 = -4$

5. $2 + -8 = -6$

6. $3 + -11 = -8$

7. $-7 + 16 = 9$

8. $-9 + 7 = -2$

9. $-8 + 3 = -5$

10. $5 + -15 = -10$

11. $-8 + 4 = -4$

12. $5 + -6 = -1$