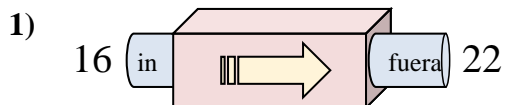
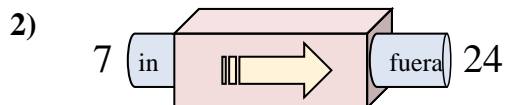




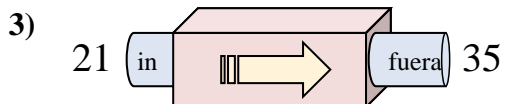
Determinar cuál regla está usando la máquina de funciones.

Respuestas

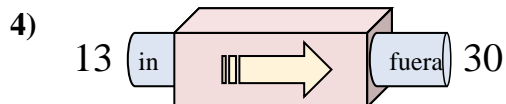
- A. Agregar 11
- B. Agregar 7
- C. Agregar 6
- D. Agregar 5



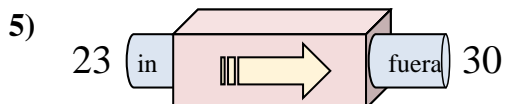
- A. Agregar 17
- B. Agregar 18
- C. Restar 14
- D. Restar 18



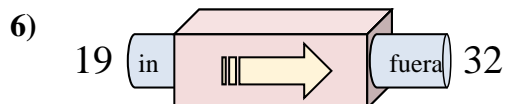
- A. Restar 11
- B. Agregar 18
- C. Agregar 14
- D. Restar 15



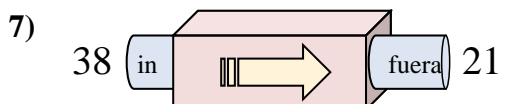
- A. Agregar 18
- B. Agregar 21
- C. Agregar 17
- D. Restar 19



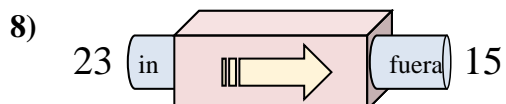
- A. Restar 11
- B. Agregar 7
- C. Restar 3
- D. Agregar 4



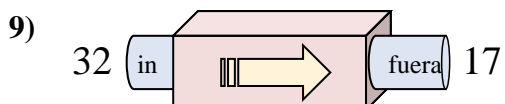
- A. Restar 13
- B. Agregar 13
- C. Agregar 17
- D. Restar 8



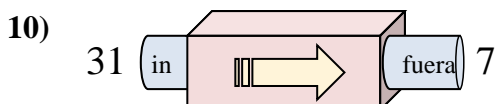
- A. Restar 18
- B. Restar 17
- C. Agregar 13
- D. Restar 14



- A. Restar 9
- B. Restar 11
- C. Restar 8
- D. Agregar 9



- A. Restar 11
- B. Restar 15
- C. Agregar 10
- D. Restar 20

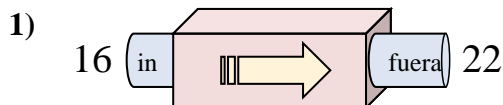


- A. Restar 19
- B. Restar 25
- C. Restar 24
- D. Agregar 22

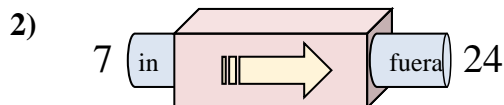
1. _____
2. _____
3. _____
4. _____
5. _____
6. _____
7. _____
8. _____
9. _____
10. _____



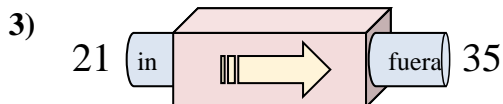
Determinar cuál regla está usando la máquina de funciones.

Respuestas

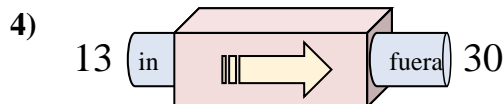
- A. Agregar 11
- B. Agregar 7
- C. Agregar 6
- D. Agregar 5



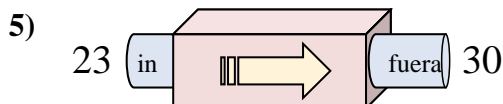
- A. Agregar 17
- B. Agregar 18
- C. Restar 14
- D. Restar 18



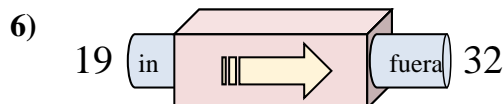
- A. Restar 11
- B. Agregar 18
- C. Agregar 14
- D. Restar 15



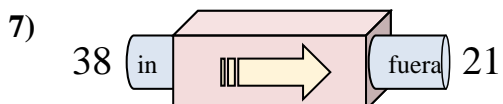
- A. Agregar 18
- B. Agregar 21
- C. Agregar 17
- D. Restar 19



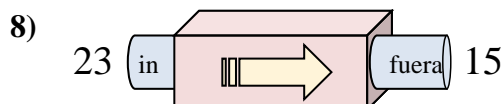
- A. Restar 11
- B. Agregar 7
- C. Restar 3
- D. Agregar 4



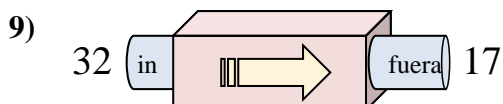
- A. Restar 13
- B. Agregar 13
- C. Agregar 17
- D. Restar 8



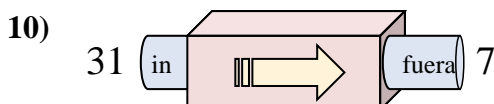
- A. Restar 18
- B. Restar 17
- C. Agregar 13
- D. Restar 14



- A. Restar 9
- B. Restar 11
- C. Restar 8
- D. Agregar 9



- A. Restar 11
- B. Restar 15
- C. Agregar 10
- D. Restar 20



- A. Restar 19
- B. Restar 25
- C. Restar 24
- D. Agregar 22

- 1. **C**
- 2. **A**
- 3. **C**
- 4. **C**
- 5. **B**
- 6. **B**
- 7. **B**
- 8. **C**
- 9. **B**
- 10. **C**