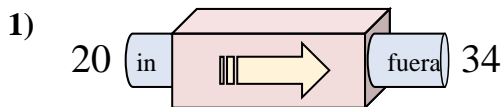


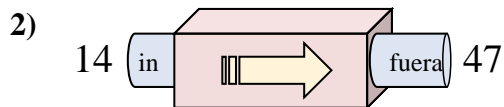


Determinar cuál regla está usando la máquina de funciones.

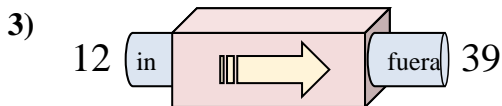
Respuestas



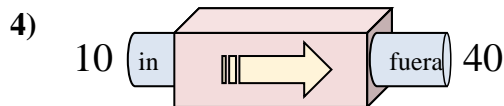
- A. Restar 13
- B. Agregar 14
- C. Agregar 12
- D. Agregar 9



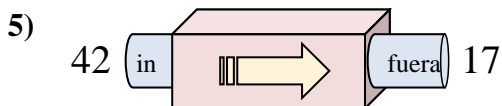
- A. Agregar 32
- B. Agregar 33
- C. Restar 35
- D. Agregar 37



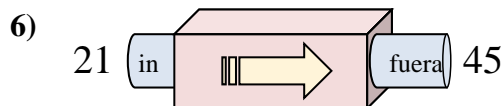
- A. Agregar 31
- B. Agregar 27
- C. Agregar 26
- D. Restar 24



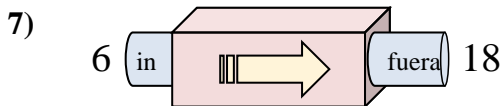
- A. Restar 28
- B. Restar 31
- C. Agregar 26
- D. Agregar 30



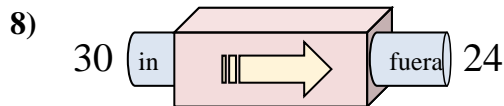
- A. Restar 29
- B. Agregar 24
- C. Restar 25
- D. Agregar 22



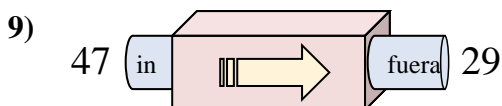
- A. Agregar 24
- B. Agregar 27
- C. Restar 29
- D. Agregar 25



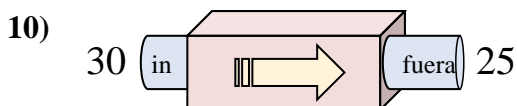
- A. Agregar 9
- B. Agregar 12
- C. Restar 9
- D. Agregar 14



- A. Restar 6
- B. Agregar 5
- C. Restar 11
- D. Restar 10



- A. Agregar 22
- B. Restar 18
- C. Restar 21
- D. Restar 19



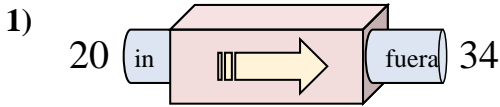
- A. Agregar 8
- B. Agregar 10
- C. Restar 7
- D. Restar 5

1. _____
2. _____
3. _____
4. _____
5. _____
6. _____
7. _____
8. _____
9. _____
10. _____

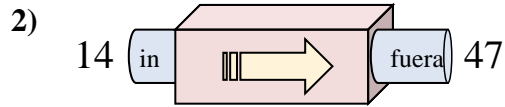


Determinar cuál regla está usando la máquina de funciones.

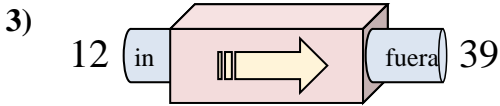
Respuestas



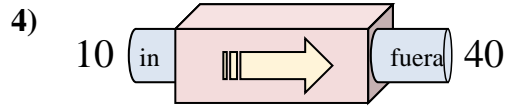
- A. Restar 13
- B. Agregar 14
- C. Agregar 12
- D. Agregar 9



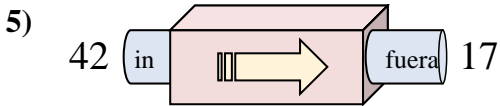
- A. Agregar 32
- B. Agregar 33
- C. Restar 35
- D. Agregar 37



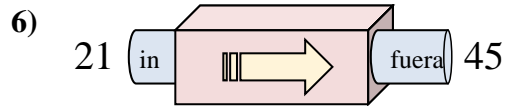
- A. Agregar 31
- B. Agregar 27
- C. Agregar 26
- D. Restar 24



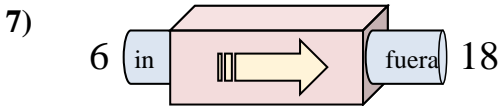
- A. Restar 28
- B. Restar 31
- C. Agregar 26
- D. Agregar 30



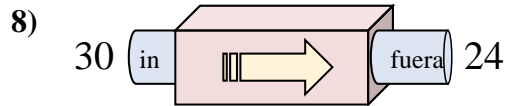
- A. Restar 29
- B. Agregar 24
- C. Restar 25
- D. Agregar 22



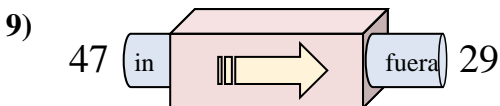
- A. Agregar 24
- B. Agregar 27
- C. Restar 29
- D. Agregar 25



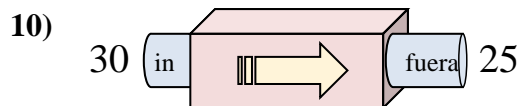
- A. Agregar 9
- B. Agregar 12
- C. Restar 9
- D. Agregar 14



- A. Restar 6
- B. Agregar 5
- C. Restar 11
- D. Restar 10



- A. Agregar 22
- B. Restar 18
- C. Restar 21
- D. Restar 19



- A. Agregar 8
- B. Agregar 10
- C. Restar 7
- D. Restar 5

- 1. **B**
- 2. **B**
- 3. **B**
- 4. **D**
- 5. **C**
- 6. **A**
- 7. **B**
- 8. **A**
- 9. **B**
- 10. **D**