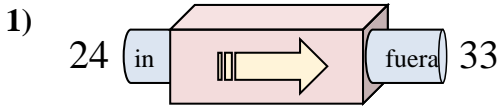


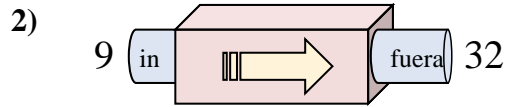


Determinar cuál regla está usando la máquina de funciones.

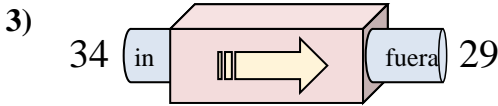
**Respuestas**



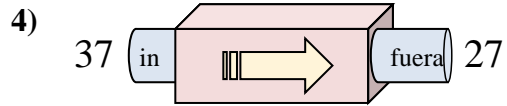
- A. Agregar 12
- B. Restar 8
- C. Agregar 13
- D. Agregar 9



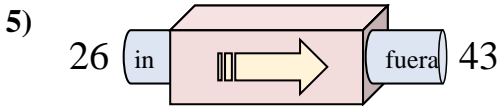
- A. Agregar 25
- B. Agregar 23
- C. Agregar 26
- D. Restar 19



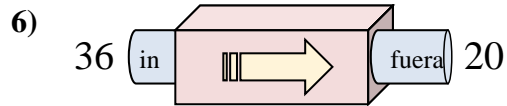
- A. Agregar 7
- B. Restar 5
- C. Restar 6
- D. Agregar 3



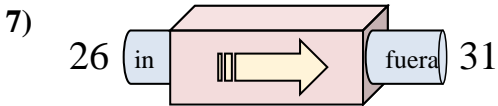
- A. Agregar 13
- B. Restar 10
- C. Restar 15
- D. Restar 13



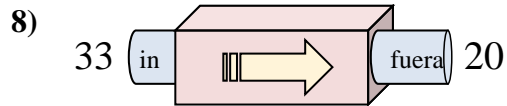
- A. Agregar 14
- B. Restar 22
- C. Agregar 15
- D. Agregar 17



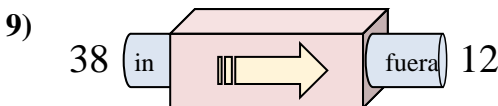
- A. Restar 16
- B. Agregar 19
- C. Agregar 21
- D. Restar 17



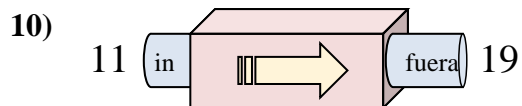
- A. Agregar 5
- B. Restar 7
- C. Agregar 7
- D. Restar 4



- A. Restar 16
- B. Agregar 16
- C. Restar 8
- D. Restar 13



- A. Restar 29
- B. Restar 30
- C. Restar 26
- D. Agregar 21

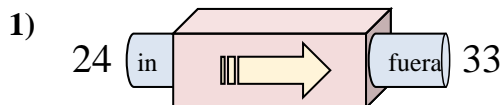


- A. Agregar 8
- B. Agregar 9
- C. Restar 13
- D. Agregar 5

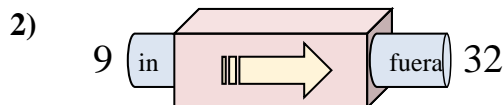
1. \_\_\_\_\_
2. \_\_\_\_\_
3. \_\_\_\_\_
4. \_\_\_\_\_
5. \_\_\_\_\_
6. \_\_\_\_\_
7. \_\_\_\_\_
8. \_\_\_\_\_
9. \_\_\_\_\_
10. \_\_\_\_\_



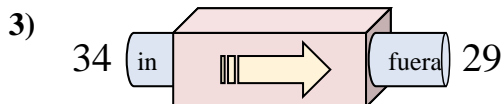
Determinar cuál regla está usando la máquina de funciones.

**Respuestas**

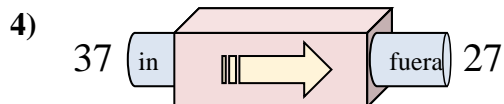
- A. Agregar 12
- B. Restar 8
- C. Agregar 13
- D. Agregar 9



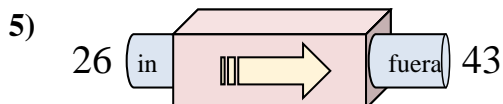
- A. Agregar 25
- B. Agregar 23
- C. Agregar 26
- D. Restar 19



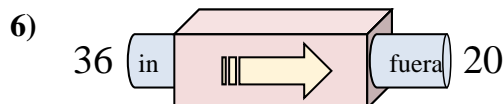
- A. Agregar 7
- B. Restar 5
- C. Restar 6
- D. Agregar 3



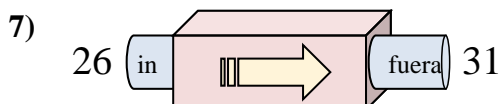
- A. Agregar 13
- B. Restar 10
- C. Restar 15
- D. Restar 13



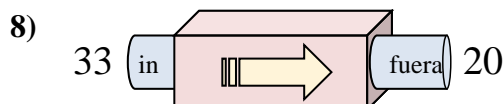
- A. Agregar 14
- B. Restar 22
- C. Agregar 15
- D. Agregar 17



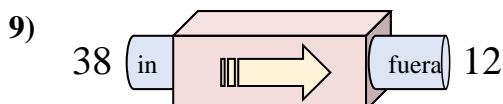
- A. Restar 16
- B. Agregar 19
- C. Agregar 21
- D. Restar 17



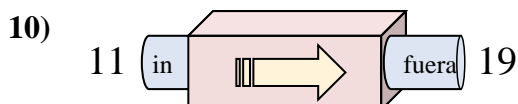
- A. Agregar 5
- B. Restar 7
- C. Agregar 7
- D. Restar 4



- A. Restar 16
- B. Agregar 16
- C. Restar 8
- D. Restar 13



- A. Restar 29
- B. Restar 30
- C. Restar 26
- D. Agregar 21



- A. Agregar 8
- B. Agregar 9
- C. Restar 13
- D. Agregar 5

1. **D**2. **B**3. **B**4. **B**5. **D**6. **A**7. **A**8. **D**9. **C**10. **A**