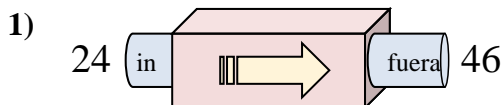
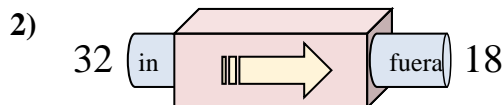




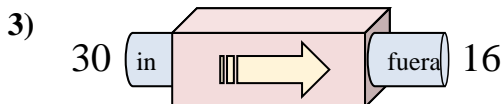
Determinar cuál regla está usando la máquina de funciones.

Respuestas

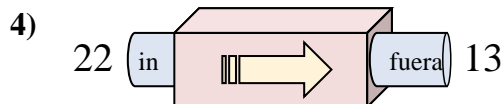
- A. Agregar 22
- B. Restar 20
- C. Agregar 24
- D. Restar 24



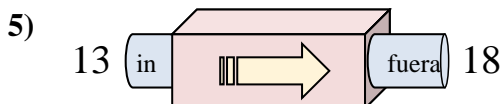
- A. Restar 18
- B. Restar 19
- C. Agregar 9
- D. Restar 14



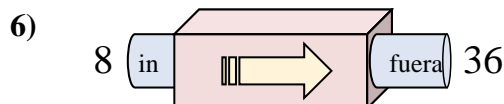
- A. Restar 11
- B. Restar 14
- C. Agregar 18
- D. Restar 12



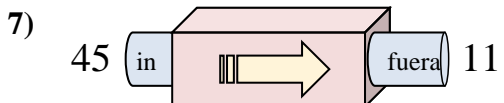
- A. Restar 6
- B. Restar 8
- C. Restar 9
- D. Agregar 10



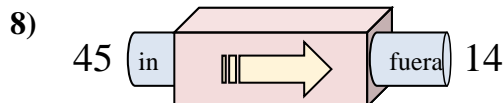
- A. Agregar 5
- B. Restar 8
- C. Agregar 6
- D. Agregar 10



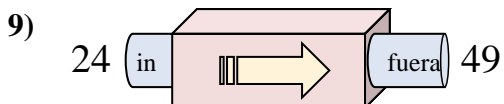
- A. Agregar 24
- B. Restar 25
- C. Agregar 23
- D. Agregar 28



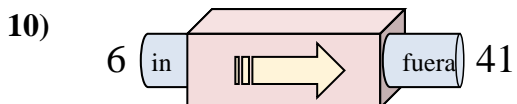
- A. Agregar 39
- B. Agregar 38
- C. Restar 29
- D. Restar 34



- A. Restar 30
- B. Restar 31
- C. Agregar 31
- D. Restar 32



- A. Agregar 28
- B. Agregar 29
- C. Agregar 25
- D. Agregar 23

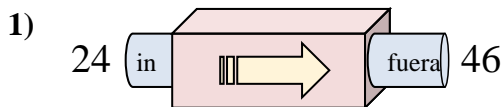


- A. Restar 39
- B. Agregar 37
- C. Agregar 32
- D. Agregar 35

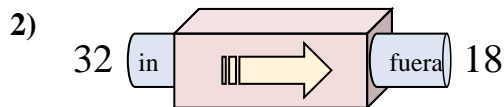
1. _____
2. _____
3. _____
4. _____
5. _____
6. _____
7. _____
8. _____
9. _____
10. _____



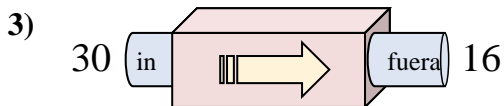
Determinar cuál regla está usando la máquina de funciones.

Respuestas

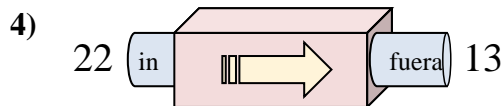
- A. Agregar 22
- B. Restar 20
- C. Agregar 24
- D. Restar 24



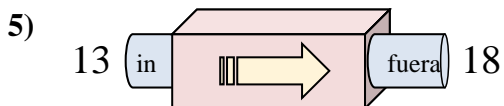
- A. Restar 18
- B. Restar 19
- C. Agregar 9
- D. Restar 14



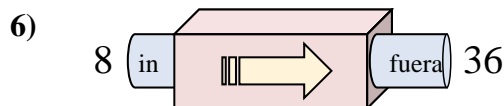
- A. Restar 11
- B. Restar 14
- C. Agregar 18
- D. Restar 12



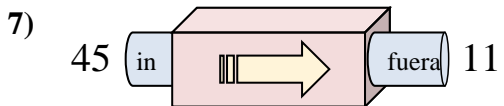
- A. Restar 6
- B. Restar 8
- C. Restar 9
- D. Agregar 10



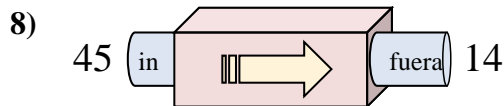
- A. Agregar 5
- B. Restar 8
- C. Agregar 6
- D. Agregar 10



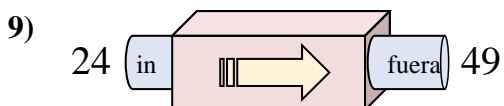
- A. Agregar 24
- B. Restar 25
- C. Agregar 23
- D. Agregar 28



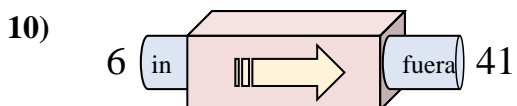
- A. Agregar 39
- B. Agregar 38
- C. Restar 29
- D. Restar 34



- A. Restar 30
- B. Restar 31
- C. Agregar 31
- D. Restar 32



- A. Agregar 28
- B. Agregar 29
- C. Agregar 25
- D. Agregar 23



- A. Restar 39
- B. Agregar 37
- C. Agregar 32
- D. Agregar 35

- 1. **A**
- 2. **D**
- 3. **B**
- 4. **C**
- 5. **A**
- 6. **D**
- 7. **D**
- 8. **B**
- 9. **C**
- 10. **D**