



Resuelve cada problema usando la propiedad distributiva de la división.

Respuestas

1) $160 \div 4 =$

2) $190 \div 5 =$

3) $592 \div 8 =$

4) $511 \div 7 =$

5) $420 \div 5 =$

6) $360 \div 8 =$

7) $765 \div 9 =$

8) $675 \div 9 =$

9) $224 \div 4 =$


10) $230 \div 5 =$

- 1. _____
- 2. _____
- 3. _____
- 4. _____
- 5. _____
- 6. _____
- 7. _____
- 8. _____
- 9. _____
- 10. _____




Resuelve cada problema usando la propiedad distributiva de la división.

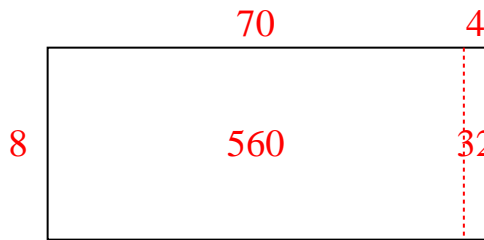
1) $160 \div 4 =$



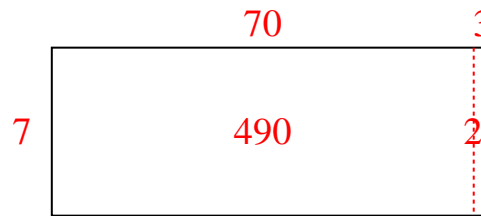
2) $190 \div 5 =$



3) $592 \div 8 =$



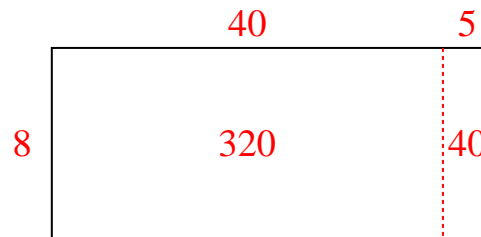
4) $511 \div 7 =$



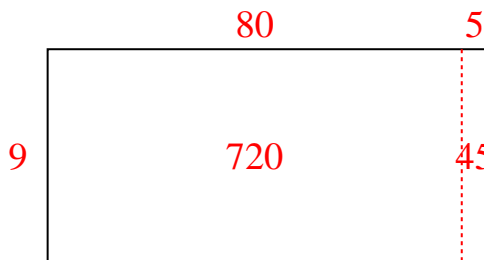
5) $420 \div 5 =$



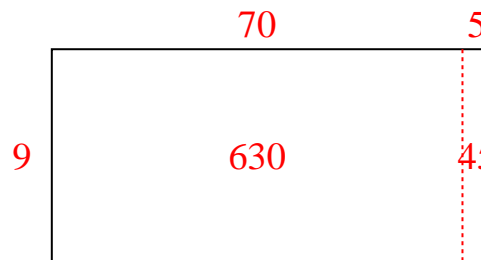
6) $360 \div 8 =$



7) $765 \div 9 =$



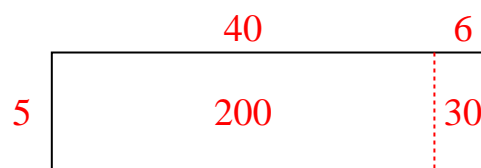
8) $675 \div 9 =$



9) $224 \div 4 =$



10) $230 \div 5 =$

**Respuestas**1. **40**2. **38**3. **74**4. **73**5. **84**6. **45**7. **85**8. **75**9. **56**10. **46**



Resuelve cada problema usando la propiedad distributiva de la división.

Respuestas

1) $370 \div 5 =$

2) $296 \div 8 =$

3) $504 \div 8 =$

4) $420 \div 5 =$

5) $498 \div 6 =$

6) $315 \div 7 =$

7) $560 \div 7 =$

8) $280 \div 7 =$

9) $87 \div 3 =$

10) $343 \div 7 =$

1. _____

2. _____

3. _____

4. _____

5. _____

6. _____

7. _____

8. _____

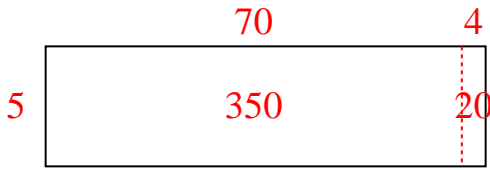
9. _____

10. _____

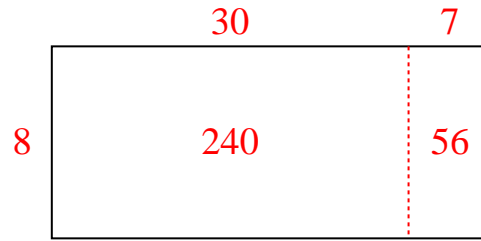


Resuelve cada problema usando la propiedad distributiva de la división.

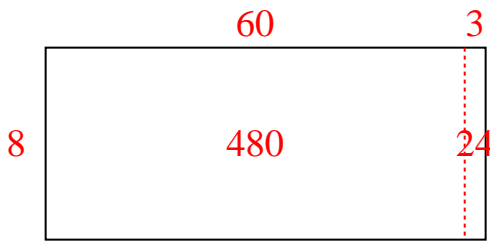
1) $370 \div 5 =$



2) $296 \div 8 =$



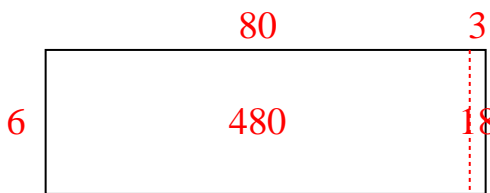
3) $504 \div 8 =$



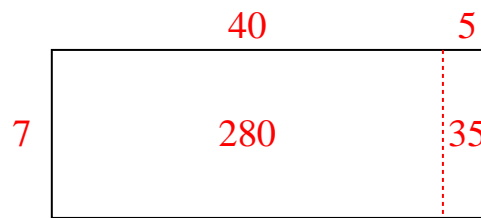
4) $420 \div 5 =$



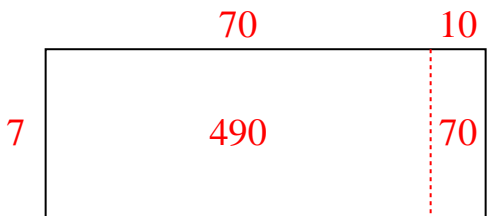
5) $498 \div 6 =$



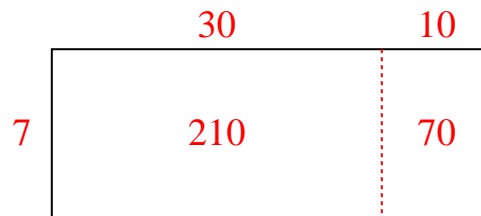
6) $315 \div 7 =$



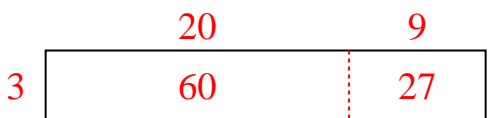
7) $560 \div 7 =$



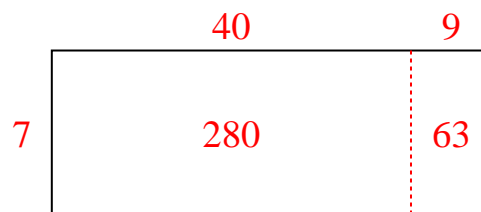
8) $280 \div 7 =$



9) $87 \div 3 =$



10) $343 \div 7 =$



Respuestas

1. 74
2. 37
3. 63
4. 84
5. 83
6. 45
7. 80
8. 40
9. 29
10. 49



Resuelve cada problema usando la propiedad distributiva de la división.

Respuestas

1) $165 \div 5 =$

2) $141 \div 3 =$

3) $168 \div 7 =$

4) $230 \div 5 =$

5) $651 \div 7 =$

6) $504 \div 8 =$

7) $105 \div 3 =$

8) $335 \div 5 =$

9) $288 \div 6 =$

10) $104 \div 4 =$

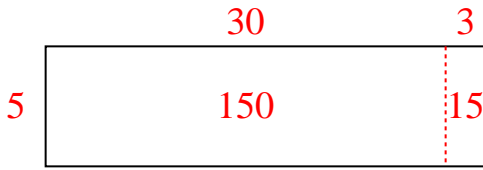
- 1. _____
- 2. _____
- 3. _____
- 4. _____
- 5. _____
- 6. _____
- 7. _____
- 8. _____
- 9. _____
- 10. _____



Resuelve cada problema usando la propiedad distributiva de la división.

Respuestas

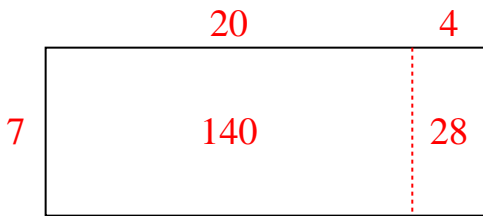
1) $165 \div 5 =$



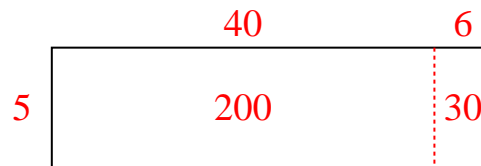
2) $141 \div 3 =$



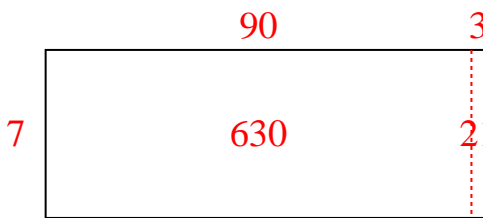
3) $168 \div 7 =$



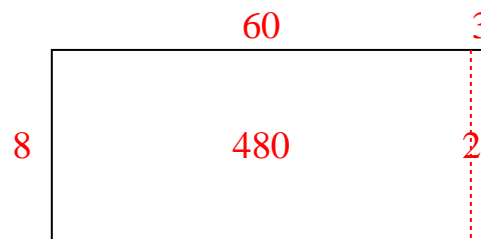
4) $230 \div 5 =$



5) $651 \div 7 =$



6) $504 \div 8 =$



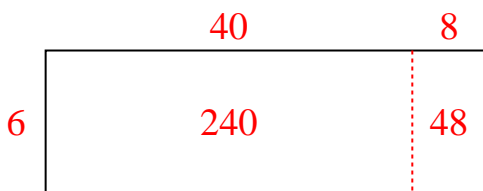
7) $105 \div 3 =$



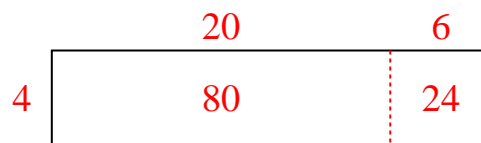
8) $335 \div 5 =$



9) $288 \div 6 =$



10) $104 \div 4 =$

1. **33**2. **47**3. **24**4. **46**5. **93**6. **63**7. **35**8. **67**9. **48**10. **26**



Resuelve cada problema usando la propiedad distributiva de la división.

Respuestas

1) $204 \div 6 =$

2) $612 \div 9 =$

3) $261 \div 3 =$

4) $360 \div 8 =$

5) $348 \div 4 =$

6) $150 \div 6 =$

7) $168 \div 7 =$

8) $665 \div 7 =$

9) $658 \div 7 =$

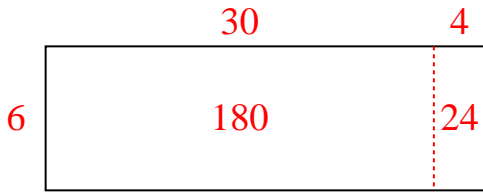
10) $204 \div 3 =$

- 1. _____
- 2. _____
- 3. _____
- 4. _____
- 5. _____
- 6. _____
- 7. _____
- 8. _____
- 9. _____
- 10. _____

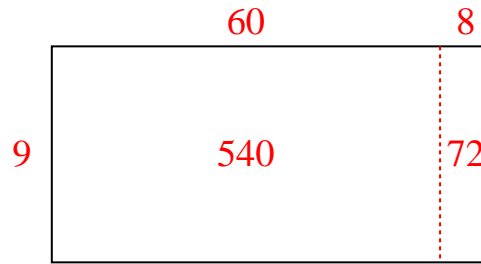


Resuelve cada problema usando la propiedad distributiva de la división.

1) $204 \div 6 =$



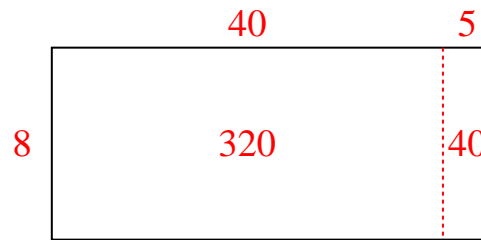
2) $612 \div 9 =$




3) $261 \div 3 =$



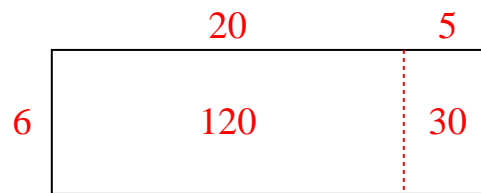
4) $360 \div 8 =$



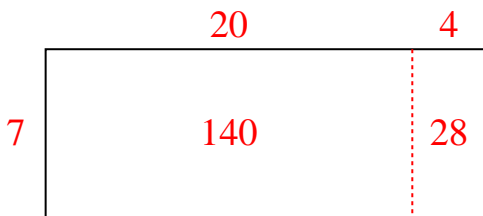
5) $348 \div 4 =$



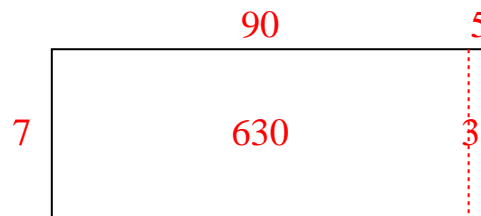
6) $150 \div 6 =$



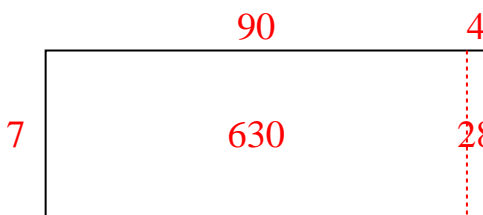
7) $168 \div 7 =$



8) $665 \div 7 =$



9) $658 \div 7 =$



10) $204 \div 3 =$



Respuestas

1. 34
2. 68
3. 87
4. 45
5. 87
6. 25
7. 24
8. 95
9. 94
10. 68



Resuelve cada problema usando la propiedad distributiva de la división.

Respuestas

1) $424 \div 8 =$

2) $370 \div 5 =$

3) $204 \div 3 =$

4) $210 \div 6 =$

5) $162 \div 6 =$

6) $440 \div 8 =$

7) $396 \div 4 =$

8) $490 \div 5 =$

9) $150 \div 5 =$

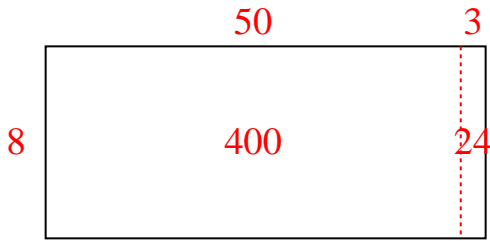
10) $192 \div 8 =$

- 1. _____
- 2. _____
- 3. _____
- 4. _____
- 5. _____
- 6. _____
- 7. _____
- 8. _____
- 9. _____
- 10. _____




Resuelve cada problema usando la propiedad distributiva de la división.


1) $424 \div 8 =$



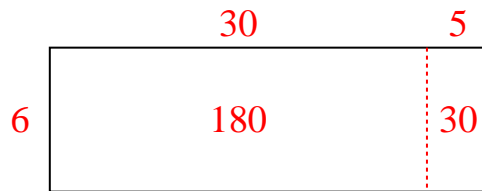
2) $370 \div 5 =$



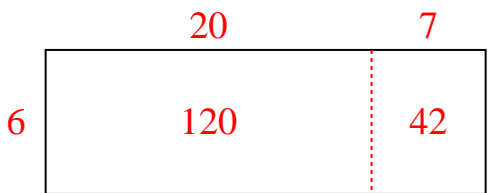
3) $204 \div 3 =$



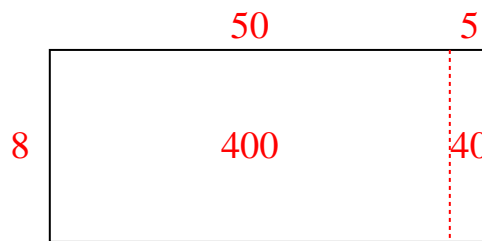
4) $210 \div 6 =$



5) $162 \div 6 =$



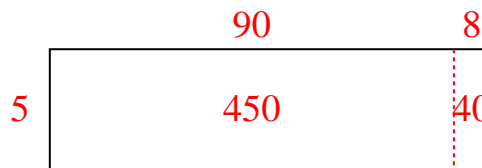
6) $440 \div 8 =$




7) $396 \div 4 =$



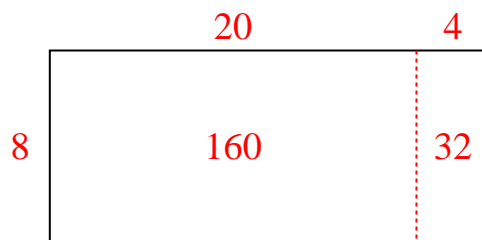
8) $490 \div 5 =$



9) $150 \div 5 =$



10) $192 \div 8 =$



Respuestas

1. 53
2. 74
3. 68
4. 35
5. 27
6. 55
7. 99
8. 98
9. 30
10. 24



Resuelve cada problema usando la propiedad distributiva de la división.

Respuestas

1) $87 \div 3 =$

2) $485 \div 5 =$

3) $195 \div 5 =$

4) $640 \div 8 =$

5) $72 \div 3 =$

6) $540 \div 6 =$

7) $470 \div 5 =$

8) $230 \div 5 =$

9) $480 \div 6 =$

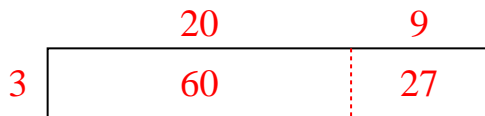
10) $228 \div 4 =$

1. _____
2. _____
3. _____
4. _____
5. _____
6. _____
7. _____
8. _____
9. _____
10. _____

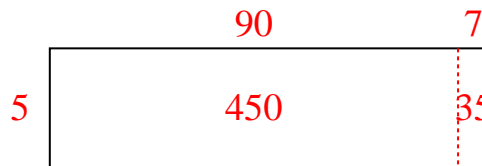


Resuelve cada problema usando la propiedad distributiva de la división.

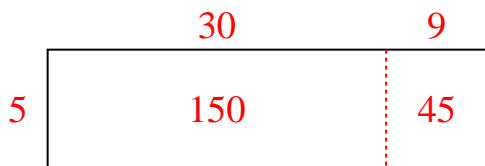
1) $87 \div 3 =$



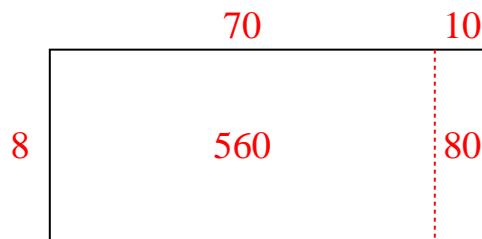
2) $485 \div 5 =$



3) $195 \div 5 =$



4) $640 \div 8 =$



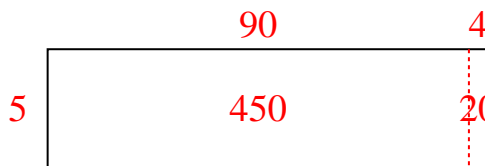
5) $72 \div 3 =$



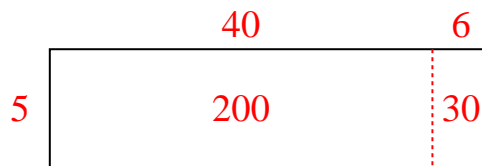
6) $540 \div 6 =$



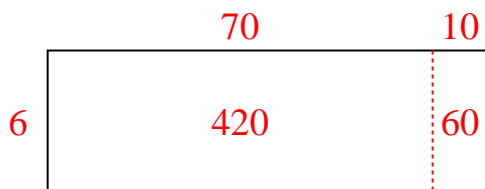
7) $470 \div 5 =$



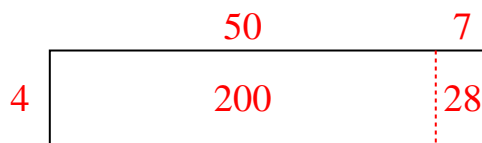
8) $230 \div 5 =$



9) $480 \div 6 =$



10) $228 \div 4 =$

**Respuestas**1. **29**2. **97**3. **39**4. **80**5. **24**6. **90**7. **94**8. **46**9. **80**10. **57**



Resuelve cada problema usando la propiedad distributiva de la división.

Respuestas

1) $783 \div 9 =$

2) $441 \div 7 =$

3) $522 \div 9 =$

4) $220 \div 4 =$

5) $148 \div 4 =$

6) $432 \div 9 =$

7) $162 \div 6 =$

8) $252 \div 4 =$

9) $390 \div 5 =$

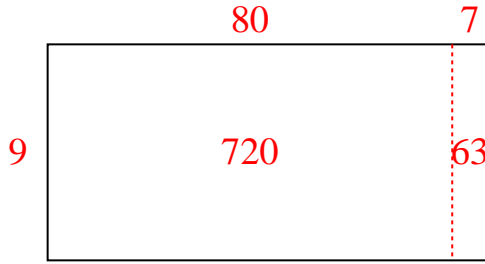
10) $672 \div 8 =$

1. _____
2. _____
3. _____
4. _____
5. _____
6. _____
7. _____
8. _____
9. _____
10. _____

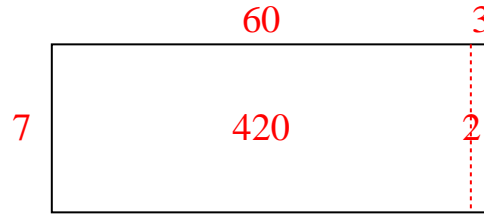


Resuelve cada problema usando la propiedad distributiva de la división.

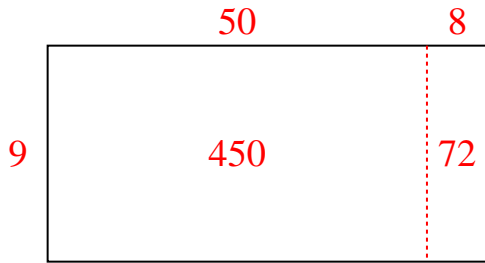
1) $783 \div 9 =$



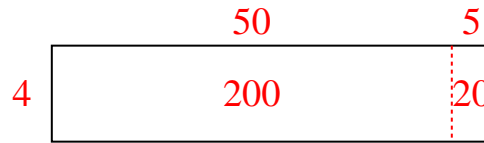
2) $441 \div 7 =$



3) $522 \div 9 =$



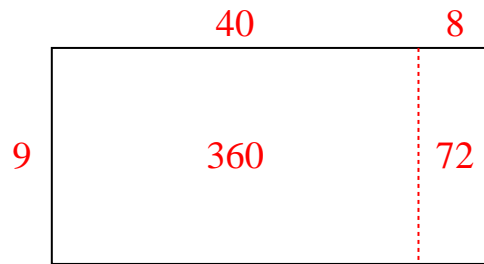
4) $220 \div 4 =$



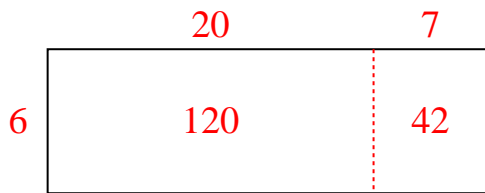
5) $148 \div 4 =$



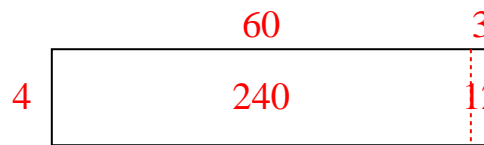
6) $432 \div 9 =$



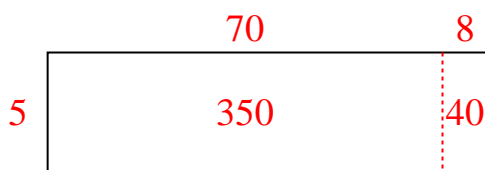
7) $162 \div 6 =$



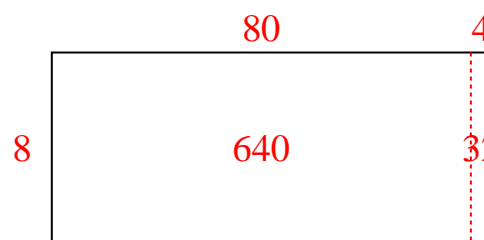
8) $252 \div 4 =$



9) $390 \div 5 =$



10) $672 \div 8 =$



Respuestas

1. 87
2. 63
3. 58
4. 55
5. 37
6. 48
7. 27
8. 63
9. 78
10. 84



Resuelve cada problema usando la propiedad distributiva de la división.

Respuestas

1) $295 \div 5 =$

2) $368 \div 8 =$

3) $216 \div 9 =$

4) $240 \div 5 =$

5) $800 \div 8 =$

6) $480 \div 5 =$

7) $320 \div 5 =$

8) $104 \div 4 =$

9) $495 \div 5 =$


10) $495 \div 9 =$

- 1. _____
- 2. _____
- 3. _____
- 4. _____
- 5. _____
- 6. _____
- 7. _____
- 8. _____
- 9. _____
- 10. _____

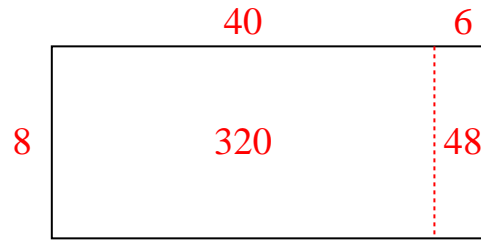


Resuelve cada problema usando la propiedad distributiva de la división.

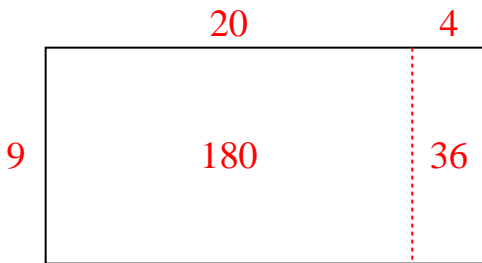
1) $295 \div 5 =$



2) $368 \div 8 =$



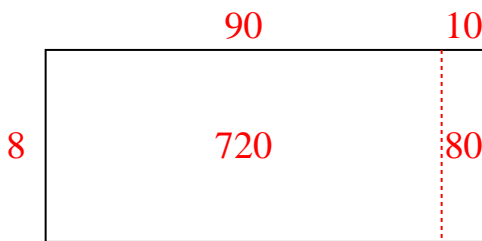
3) $216 \div 9 =$



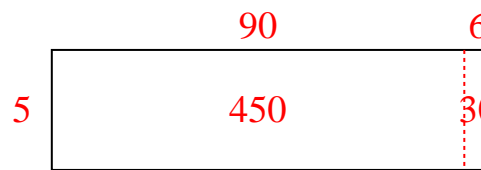
4) $240 \div 5 =$



5) $800 \div 8 =$



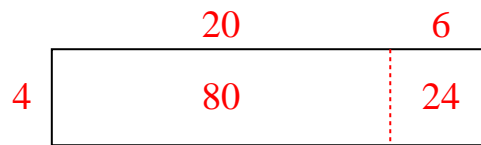
6) $480 \div 5 =$



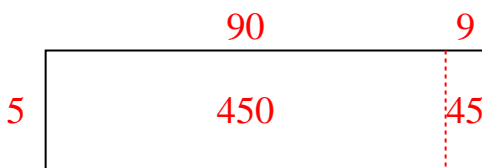
7) $320 \div 5 =$



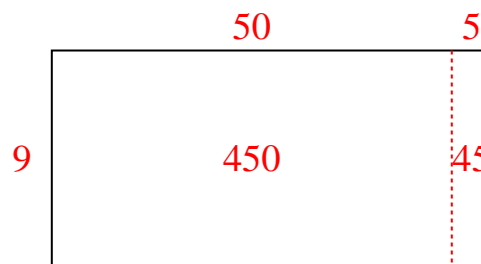
8) $104 \div 4 =$



9) $495 \div 5 =$



10) $495 \div 9 =$



Respuestas

1. 59
2. 46
3. 24
4. 48
5. 100
6. 96
7. 64
8. 26
9. 99
10. 55



Resuelve cada problema usando la propiedad distributiva de la división.

Respuestas

1) $666 \div 9 =$

2) $272 \div 4 =$

3) $264 \div 6 =$

4) $380 \div 4 =$

5) $490 \div 7 =$

6) $148 \div 4 =$

7) $413 \div 7 =$

8) $657 \div 9 =$

9) $270 \div 5 =$


10) $72 \div 3 =$

- 1. _____
- 2. _____
- 3. _____
- 4. _____
- 5. _____
- 6. _____
- 7. _____
- 8. _____
- 9. _____
- 10. _____

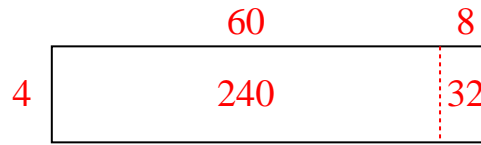


Resuelve cada problema usando la propiedad distributiva de la división.

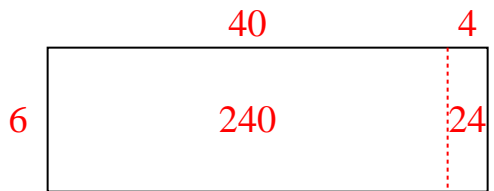
1) $666 \div 9 =$




2) $272 \div 4 =$



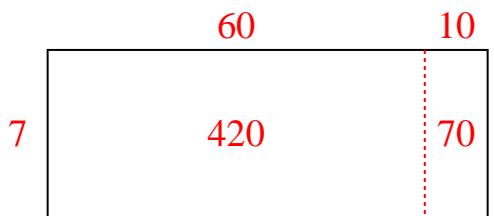
3) $264 \div 6 =$



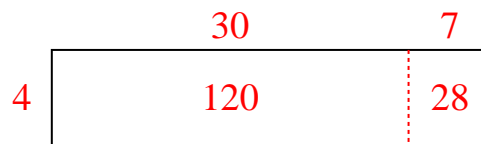
4) $380 \div 4 =$




5) $490 \div 7 =$



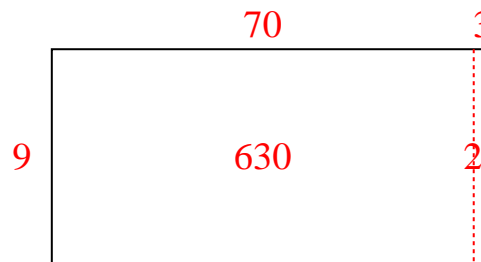
6) $148 \div 4 =$



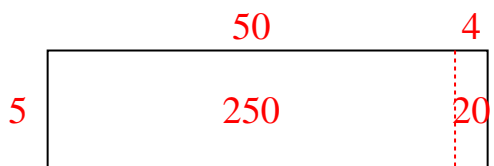
7) $413 \div 7 =$



8) $657 \div 9 =$



9) $270 \div 5 =$



10) $72 \div 3 =$

**Respuestas**1. **74**2. **68**3. **44**4. **95**5. **70**6. **37**7. **59**8. **73**9. **54**10. **24**



Resuelve cada problema usando la propiedad distributiva de la división.

Respuestas

1) $528 \div 8 =$

2) $560 \div 7 =$

3) $300 \div 6 =$

4) $440 \div 5 =$

5) $240 \div 5 =$

6) $612 \div 9 =$

7) $224 \div 4 =$

8) $500 \div 5 =$

9) $510 \div 6 =$

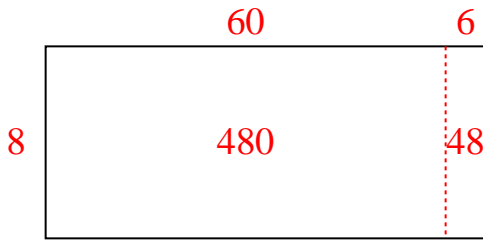
10) $335 \div 5 =$

- 1. _____
- 2. _____
- 3. _____
- 4. _____
- 5. _____
- 6. _____
- 7. _____
- 8. _____
- 9. _____
- 10. _____

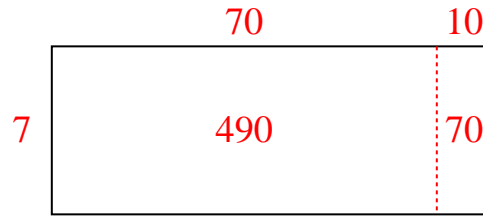


Resuelve cada problema usando la propiedad distributiva de la división.

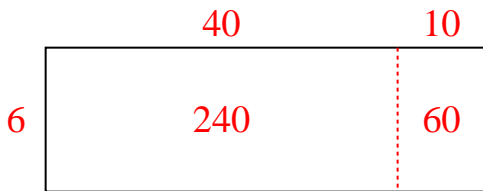
1) $528 \div 8 =$



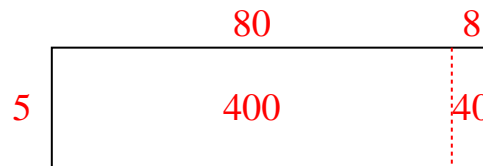
2) $560 \div 7 =$



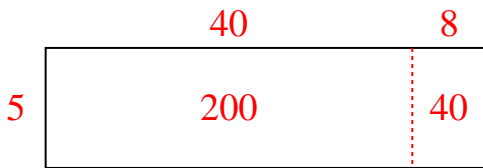
3) $300 \div 6 =$



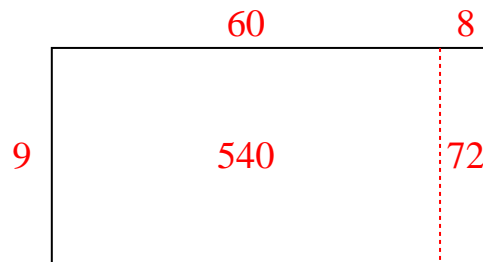
4) $440 \div 5 =$



5) $240 \div 5 =$



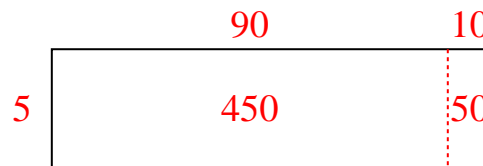
6) $612 \div 9 =$



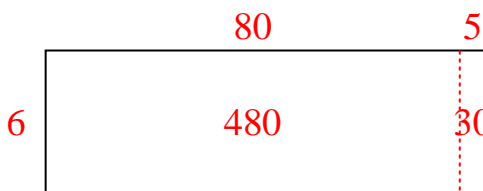
7) $224 \div 4 =$



8) $500 \div 5 =$



9) $510 \div 6 =$



10) $335 \div 5 =$

**Respuestas**1. **66**2. **80**3. **50**4. **88**5. **48**6. **68**7. **56**8. **100**9. **85**10. **67**