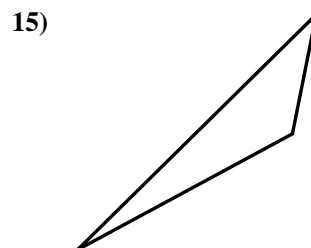
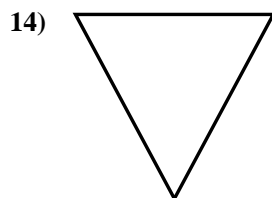
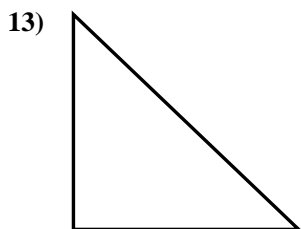
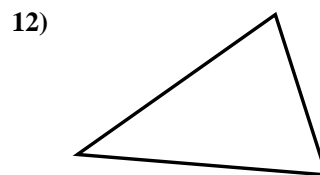
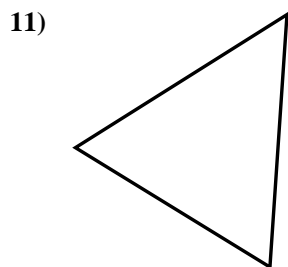
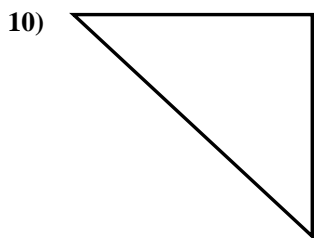
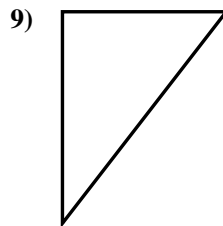
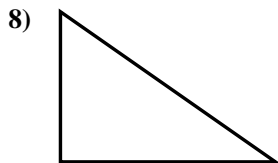
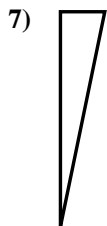
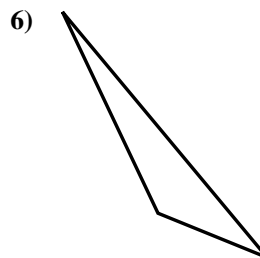
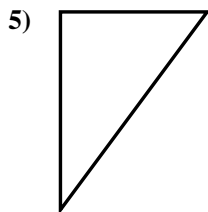
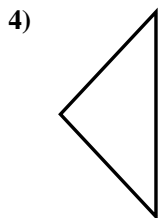
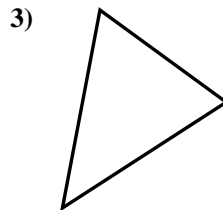
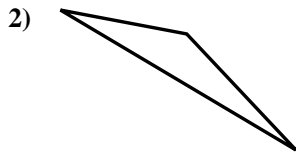
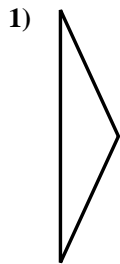




Determinar si el triángulo mostrado es un triángulo recto (sí) o no (no).

**Respuestas**



1. \_\_\_\_\_

2. \_\_\_\_\_

3. \_\_\_\_\_

4. \_\_\_\_\_

5. \_\_\_\_\_

6. \_\_\_\_\_

7. \_\_\_\_\_

8. \_\_\_\_\_

9. \_\_\_\_\_

10. \_\_\_\_\_

11. \_\_\_\_\_

12. \_\_\_\_\_

13. \_\_\_\_\_

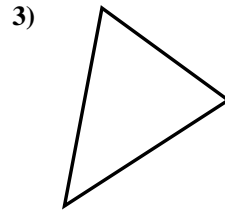
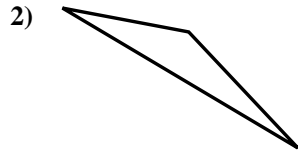
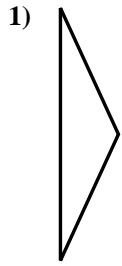
14. \_\_\_\_\_

15. \_\_\_\_\_

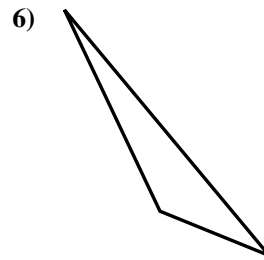
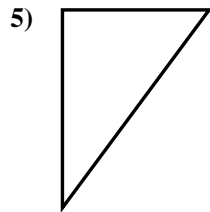
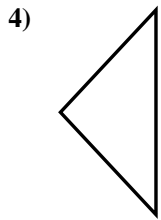


Determinar si el triángulo mostrado es un triángulo recto (si) o no (no).

**Respuestas**



1. no



2. no

3. no

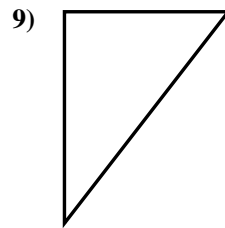
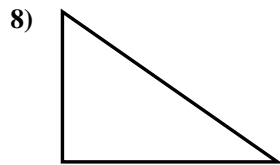
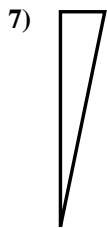
4. no

5. si

6. no

7. si

8. si

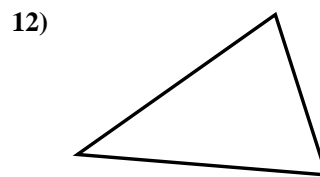
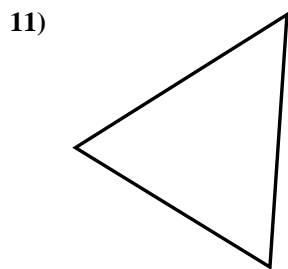
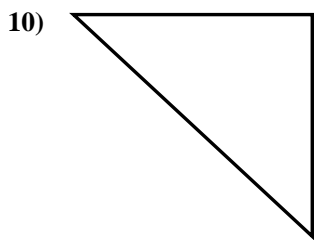


9. si

10. si

11. no

12. no



13. si

14. no

15. no

