

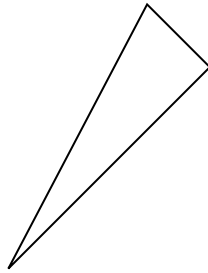


Determinar si la forma mostrada es un 'Triángulo', 'Cuadrado', 'Rectángulo', 'Hexágono' u 'Otro'.

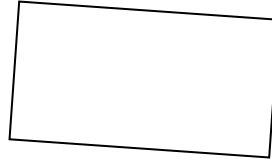
1)



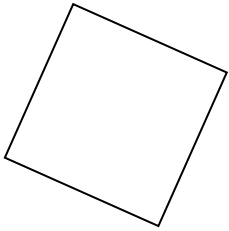
2)



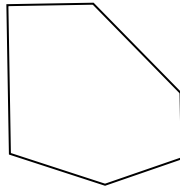
3)



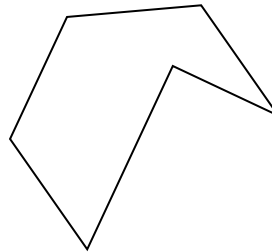
4)



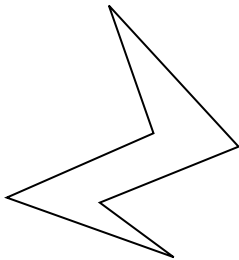
5)



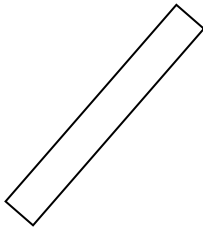
6)



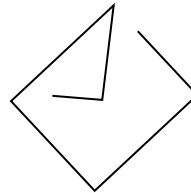
7)



8)



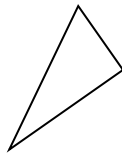
9)



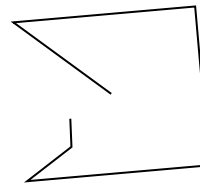
10)




11)




12)



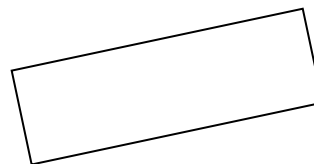
13)



14)



15)



**Respuestas**

- 1. \_\_\_\_\_
- 2. \_\_\_\_\_
- 3. \_\_\_\_\_
- 4. \_\_\_\_\_
- 5. \_\_\_\_\_
- 6. \_\_\_\_\_
- 7. \_\_\_\_\_
- 8. \_\_\_\_\_
- 9. \_\_\_\_\_
- 10. \_\_\_\_\_
- 11. \_\_\_\_\_
- 12. \_\_\_\_\_
- 13. \_\_\_\_\_
- 14. \_\_\_\_\_
- 15. \_\_\_\_\_

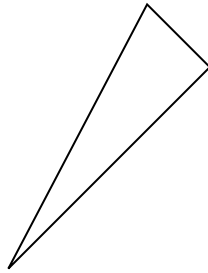


Determinar si la forma mostrada es un 'Triángulo', 'Cuadrado', 'Rectángulo', 'Hexágono' u 'Otro'.

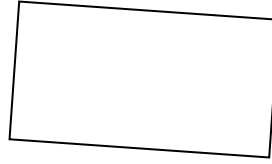
1)



2)



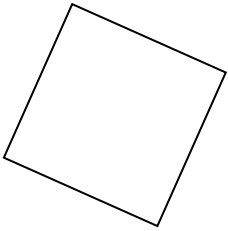
3)



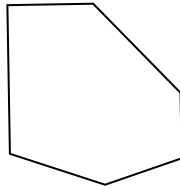
1.

**Otra**

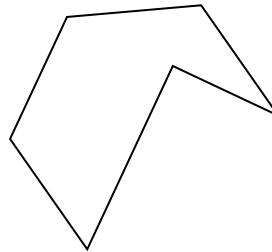
4)



5)



6)



2.

**triangle**

3.

**rectangle**

4.

**square**

5.

**hexágono**

6.

**hexágono**

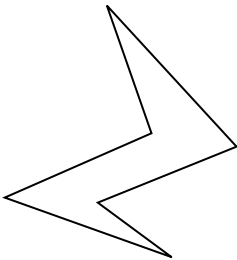
7.

**hexágono**

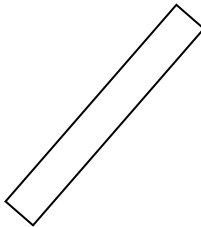
8.

**rectangle**

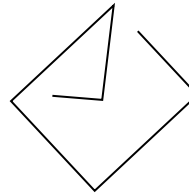
7)



8)



9)



9.

**Otra**

10.

**triangle**

11.

**triangle**

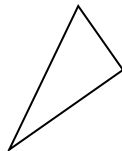
12.

**Otra**

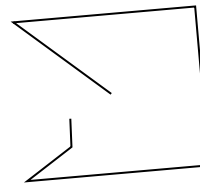
10)



11)



12)



13.

**Otra**


14.

**triangle**


15.

**rectangle**

13)



14)



15)

