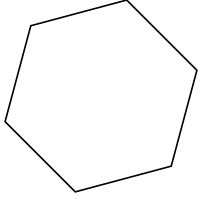


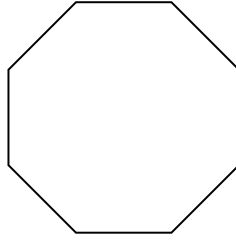


Identificar el tipo de figura mostrada.

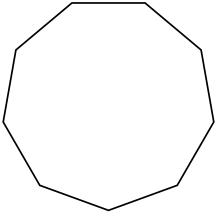
1)



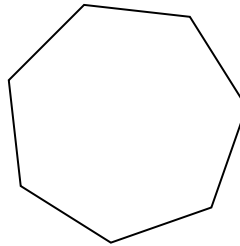
2)




3)



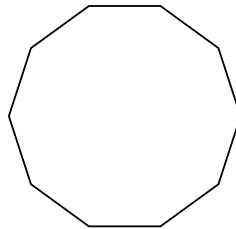
4)



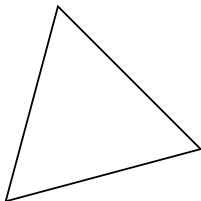
5)



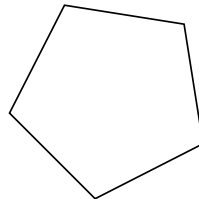
6)



7)



8)



Respuestas

1. _____

2. _____

3. _____

4. _____

5. _____

6. _____

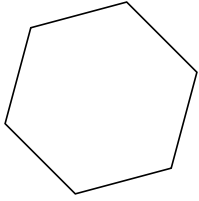
7. _____

8. _____

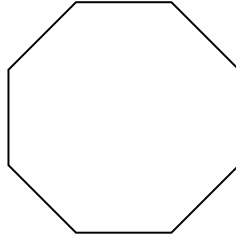


Identificar el tipo de figura mostrada.

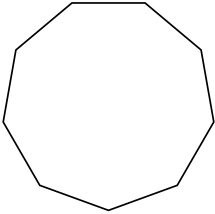
1)



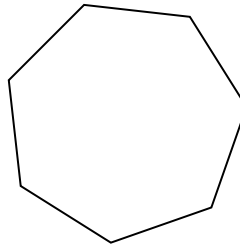
2)




3)



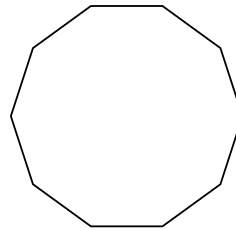
4)



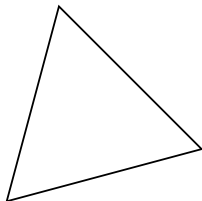
5)



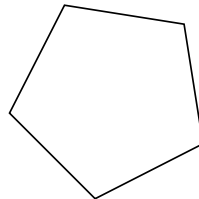
6)



7)



8)



Respuestas

1. **hexágono**

2. **octágonos**

3. **nonagono**

4. **heptágono**

5. **cuadrilátero**

6. **decágono**

7. **triangle**

8. **pentágono**